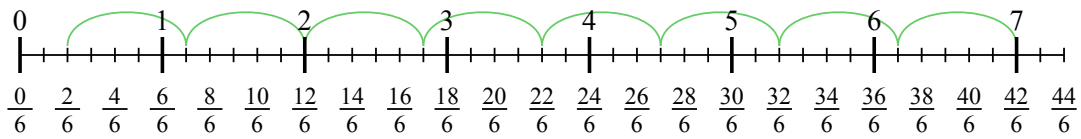





Usa la linea numerata per risolvere ogni problema. Il primo è un esempio.

**Risposte**

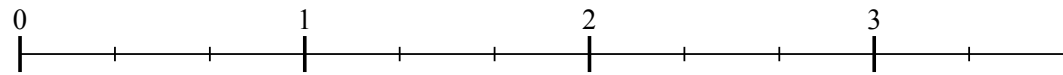
1)  $7 : \frac{5}{6}$



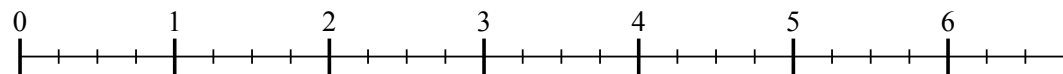
2)  $2 : \frac{2}{3}$



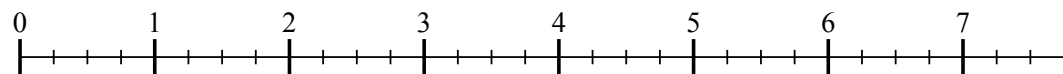
3)  $3 : \frac{2}{3}$



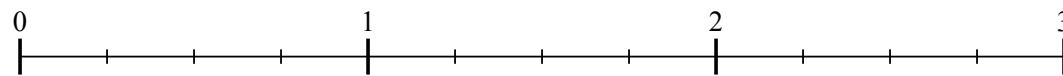
4)  $6 : \frac{3}{4}$



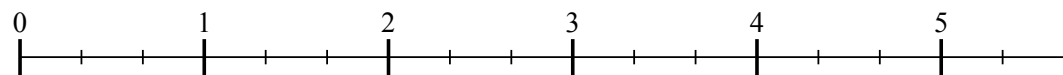
5)  $7 : \frac{3}{4}$



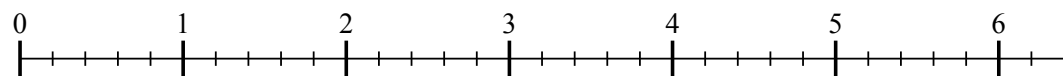
6)  $2 : \frac{2}{4}$



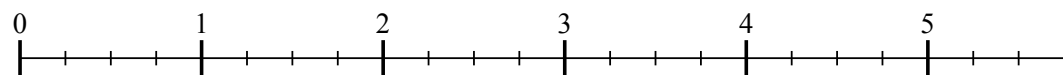
7)  $5 : \frac{2}{3}$



8)  $6 : \frac{2}{5}$



9)  $5 : \frac{3}{4}$

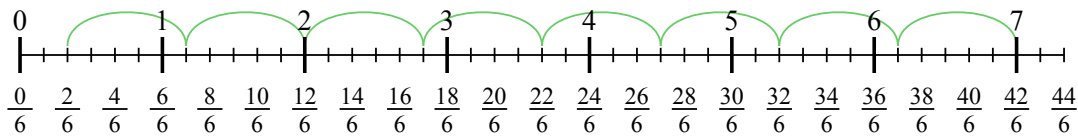


1. \_\_\_\_\_
2. \_\_\_\_\_
3. \_\_\_\_\_
4. \_\_\_\_\_
5. \_\_\_\_\_
6. \_\_\_\_\_
7. \_\_\_\_\_
8. \_\_\_\_\_
9. \_\_\_\_\_

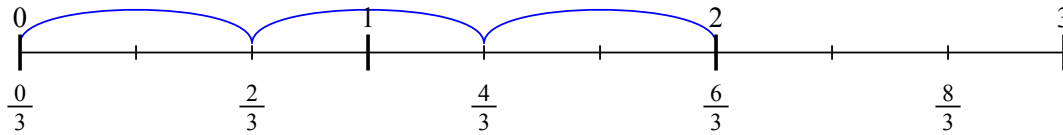


Usa la linea numerata per risolvere ogni problema. Il primo è un esempio.

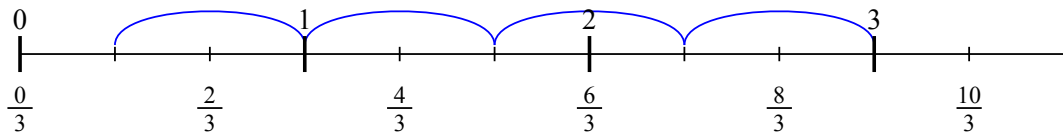
1)  $7 : \frac{5}{6}$



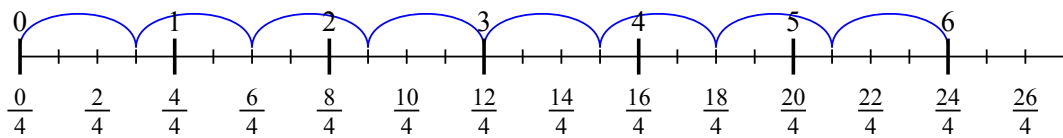
2)  $2 : \frac{2}{3}$



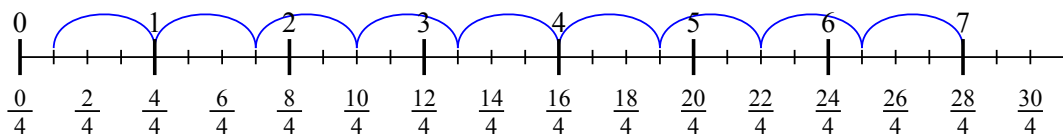
3)  $3 : \frac{2}{3}$



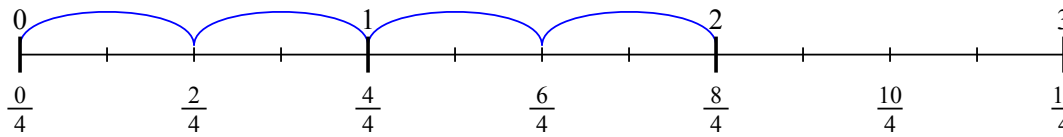
4)  $6 : \frac{3}{4}$



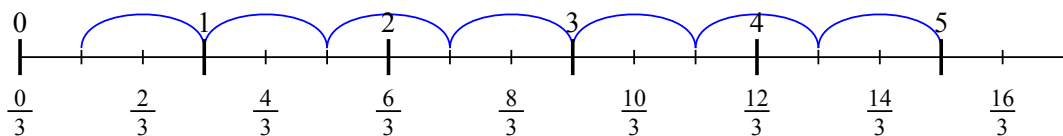
5)  $7 : \frac{3}{4}$



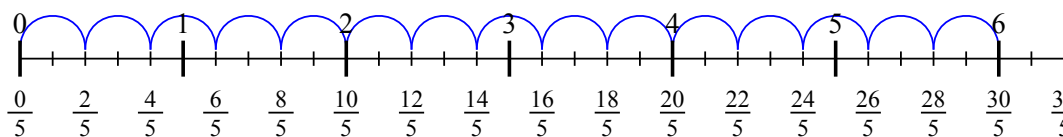
6)  $2 : \frac{2}{4}$



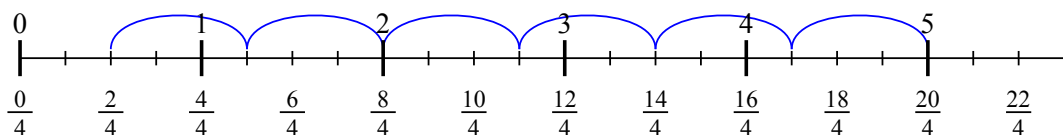
7)  $5 : \frac{2}{3}$



8)  $6 : \frac{2}{5}$



9)  $5 : \frac{3}{4}$

**Risposte**

1.  $8 \frac{2}{5}$

2.  $3$

3.  $4 \frac{1}{2}$

4.  $8$

5.  $9 \frac{1}{3}$

6.  $4$

7.  $7 \frac{1}{2}$

8.  $15$

9.  $6 \frac{2}{3}$