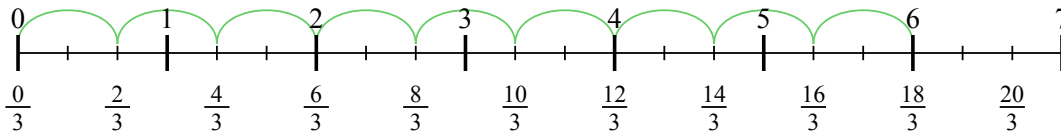


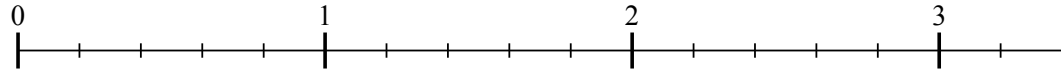


Usa la linea numerata per risolvere ogni problema. Il primo è un esempio.

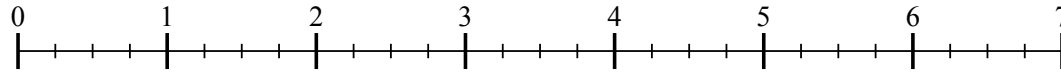
1) $6 : \frac{2}{3}$



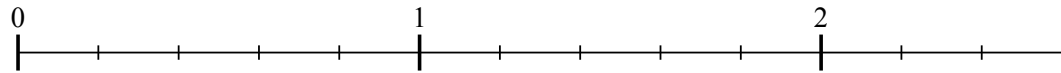
2) $3 : \frac{2}{5}$



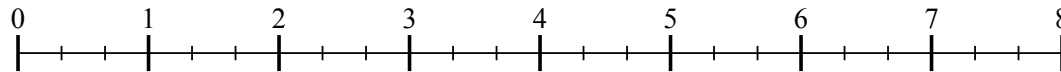
3) $6 : \frac{3}{4}$



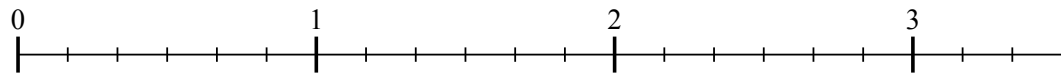
4) $2 : \frac{3}{5}$



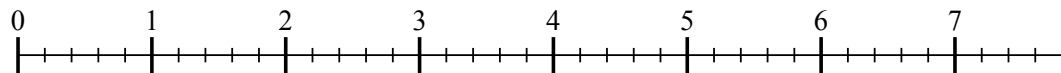
5) $7 : \frac{2}{3}$



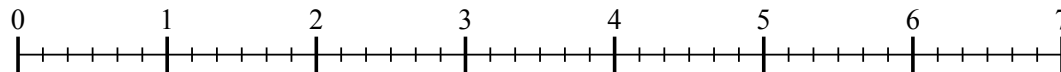
6) $3 : \frac{4}{6}$



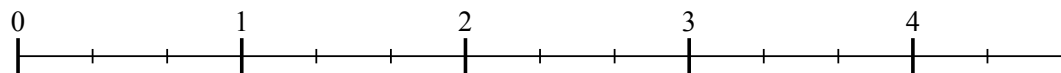
7) $7 : \frac{3}{5}$



8) $6 : \frac{3}{6}$



9) $4 : \frac{2}{3}$



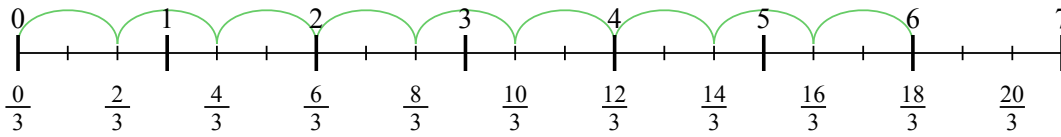
Risposte

1. _____
2. _____
3. _____
4. _____
5. _____
6. _____
7. _____
8. _____
9. _____

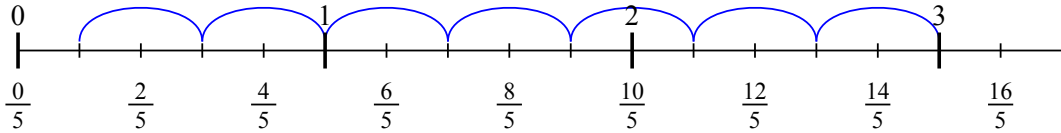


Usa la linea numerata per risolvere ogni problema. Il primo è un esempio.

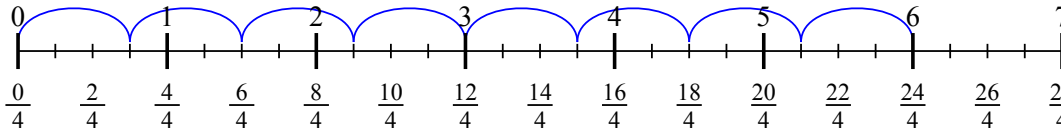
1) $6 : \frac{2}{3}$



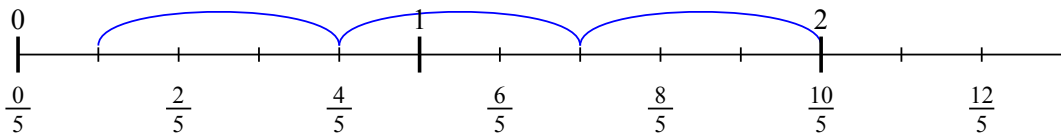
2) $3 : \frac{2}{5}$



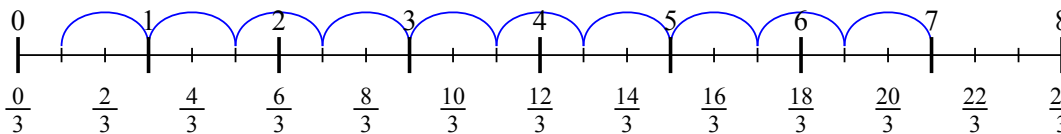
3) $6 : \frac{3}{4}$



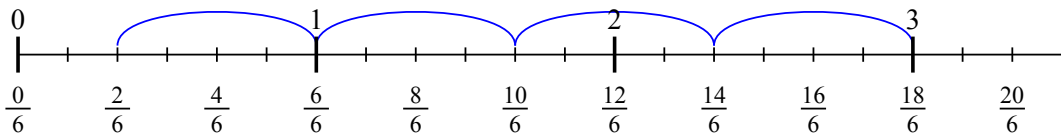
4) $2 : \frac{3}{5}$



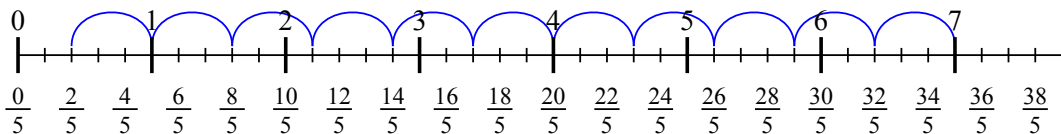
5) $7 : \frac{2}{3}$



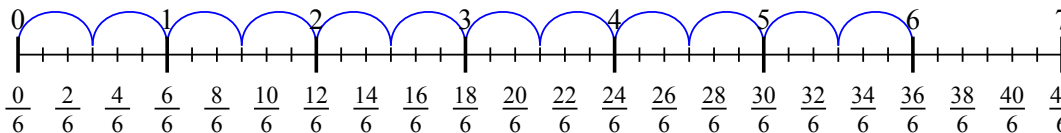
6) $3 : \frac{4}{6}$



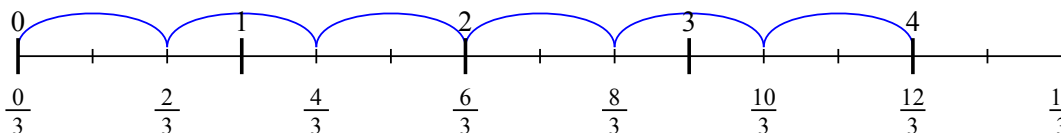
7) $7 : \frac{3}{5}$



8) $6 : \frac{3}{6}$



9) $4 : \frac{2}{3}$



Risposte

1. 9
2. $7 \frac{1}{2}$
3. 8
4. $3 \frac{1}{3}$
5. $10 \frac{1}{2}$
6. $4 \frac{2}{4}$
7. $11 \frac{2}{3}$
8. 12
9. 6