




Usa la linea numerata per risolvere ogni problema. Il primo è un esempio.


Risposte

1) $\frac{1}{5} : 6$



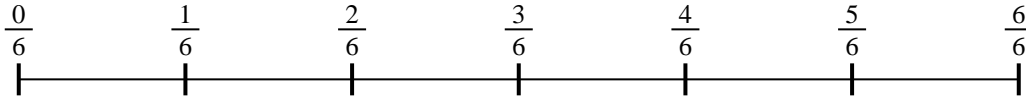
1. _____

2) $\frac{1}{5} : 5$




2. _____

3) $\frac{1}{6} : 2$



3. _____

4) $\frac{1}{7} : 6$




4. _____

5) $\frac{1}{7} : 5$



5. _____

6) $\frac{1}{5} : 4$



6. _____

7) $\frac{1}{5} : 2$



7. _____

8) $\frac{1}{3} : 3$



8. _____

9) $\frac{1}{7} : 5$

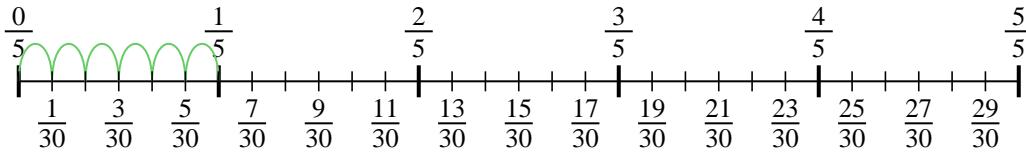


9. _____

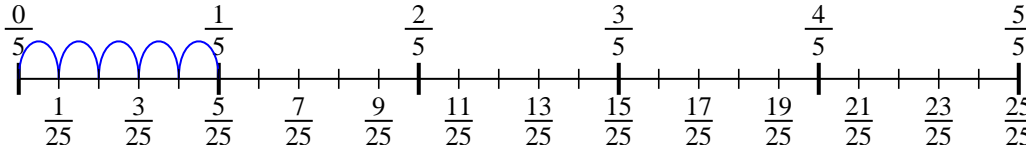


Usa la linea numerata per risolvere ogni problema. Il primo è un esempio.

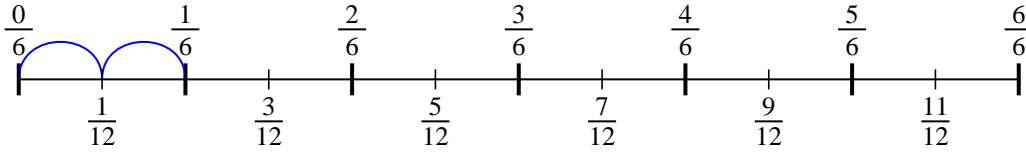
1) $\frac{1}{5} : 6$



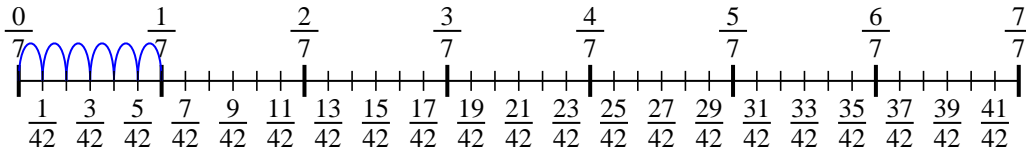
2) $\frac{1}{5} : 5$



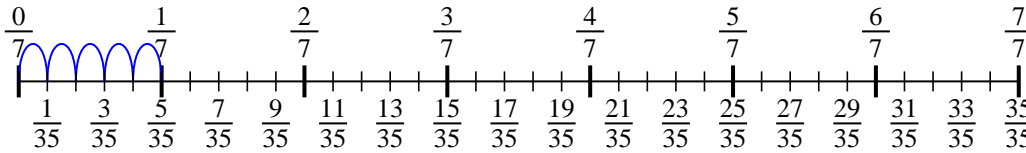
3) $\frac{1}{6} : 2$



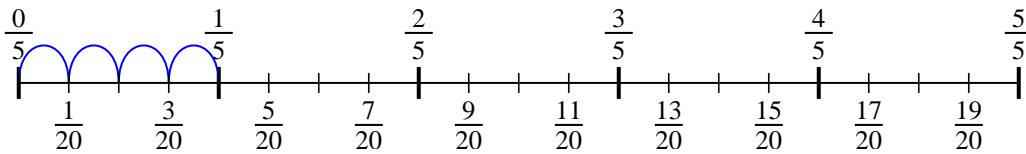
4) $\frac{1}{7} : 6$



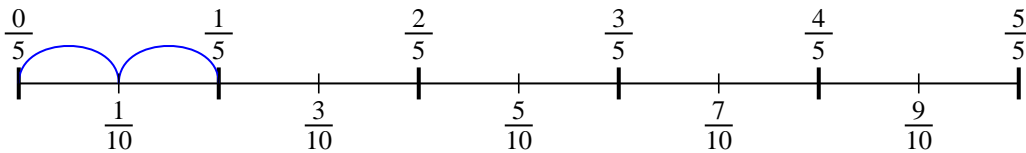
5) $\frac{1}{7} : 5$



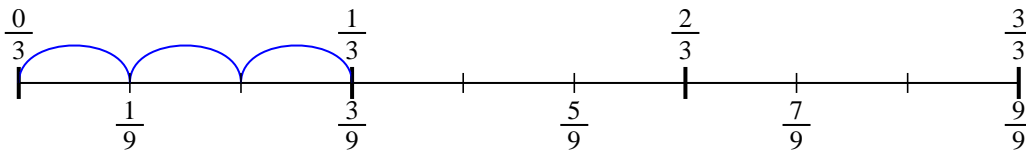
6) $\frac{1}{5} : 4$



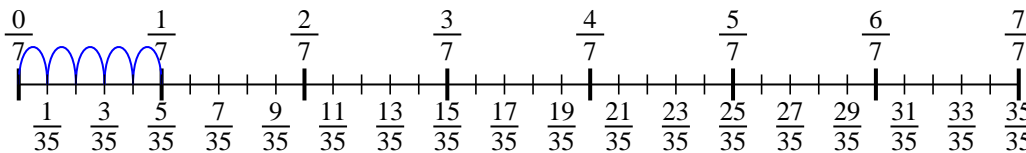
7) $\frac{1}{5} : 2$



8) $\frac{1}{3} : 3$



9) $\frac{1}{7} : 5$

**Risposte**

1. $\frac{1}{30}$

2. $\frac{1}{25}$

3. $\frac{1}{12}$

4. $\frac{1}{42}$

5. $\frac{1}{35}$

6. $\frac{1}{20}$

7. $\frac{1}{10}$

8. $\frac{1}{9}$

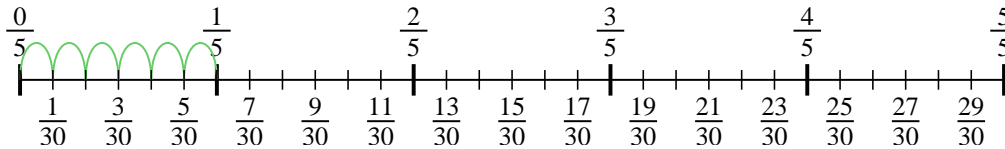
9. $\frac{1}{35}$



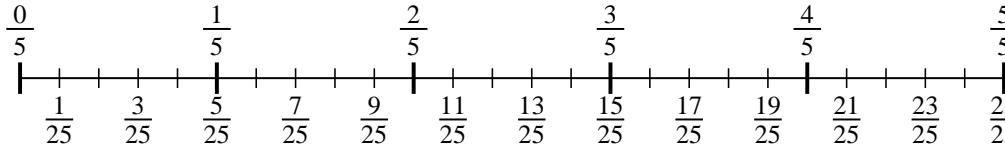
Usa la linea numerata per risolvere ogni problema. Il primo è un esempio.

Risposte

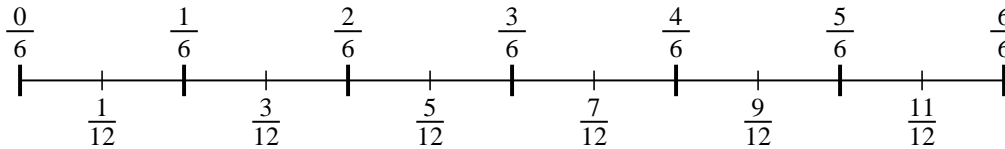
1) $\frac{1}{5} : 6$



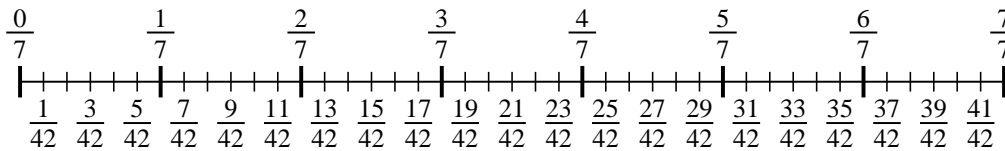
2) $\frac{1}{5} : 5$



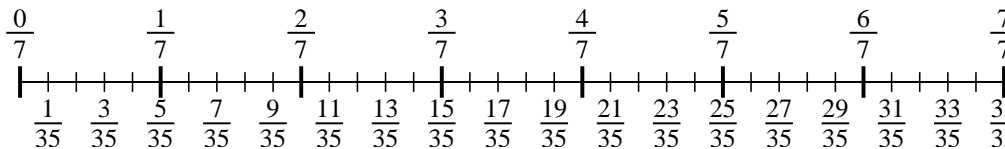
3) $\frac{1}{6} : 2$



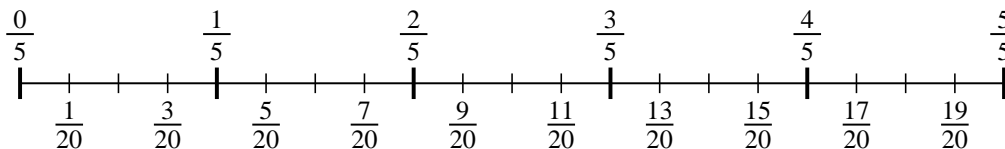
4) $\frac{1}{7} : 6$



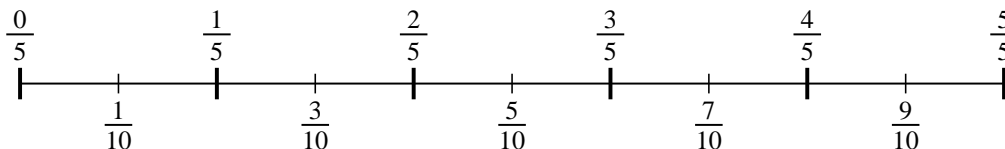
5) $\frac{1}{7} : 5$



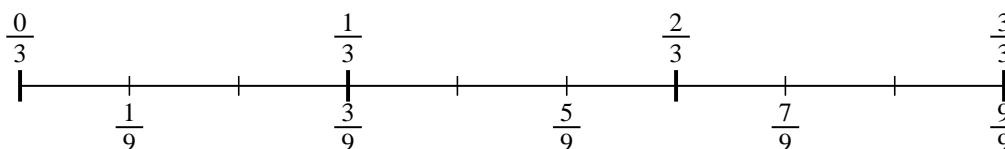
6) $\frac{1}{5} : 4$



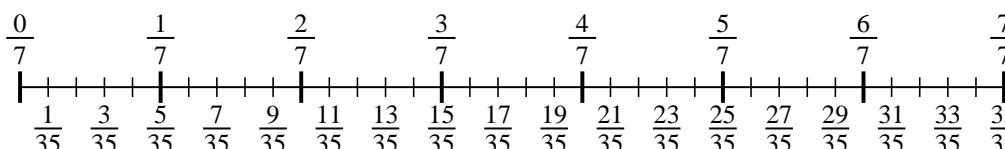
7) $\frac{1}{5} : 2$



8) $\frac{1}{3} : 3$



9) $\frac{1}{7} : 5$



1. _____

2. _____

3. _____

4. _____

5. _____

6. _____

7. _____

8. _____

9. _____