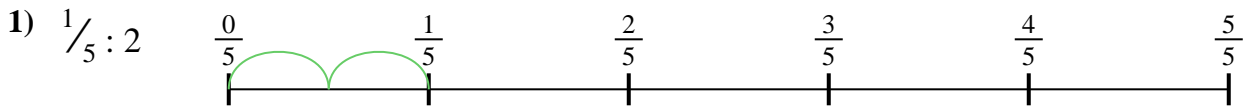
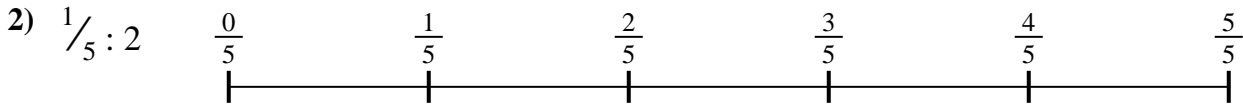




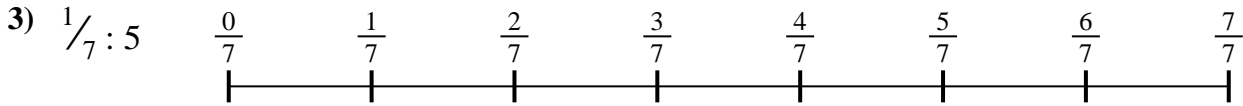
Usa la linea numerata per risolvere ogni problema. Il primo è un esempio.

**Risposte**

1. \_\_\_\_\_




2. \_\_\_\_\_



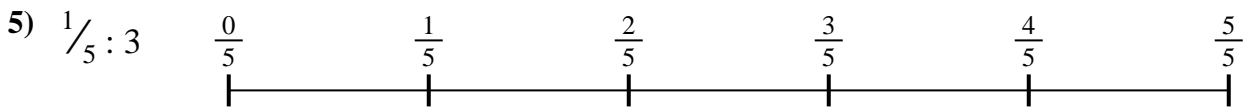
3. \_\_\_\_\_

4. \_\_\_\_\_



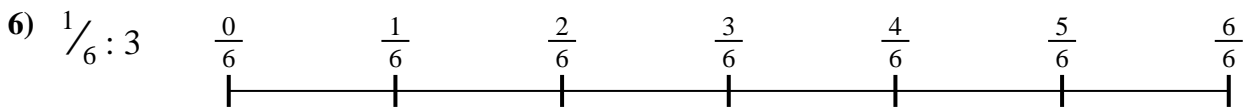
5. \_\_\_\_\_

6. \_\_\_\_\_

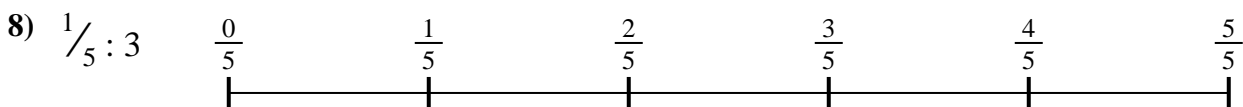
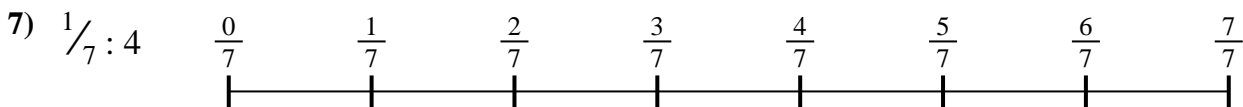


7. \_\_\_\_\_

8. \_\_\_\_\_



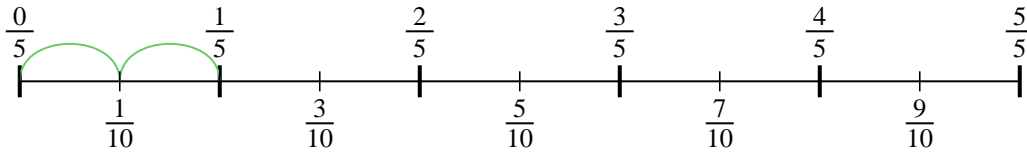
9. \_\_\_\_\_



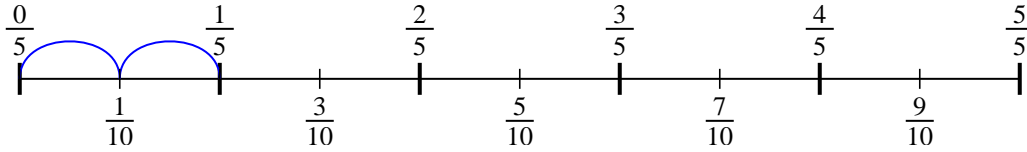


Usa la linea numerata per risolvere ogni problema. Il primo è un esempio.

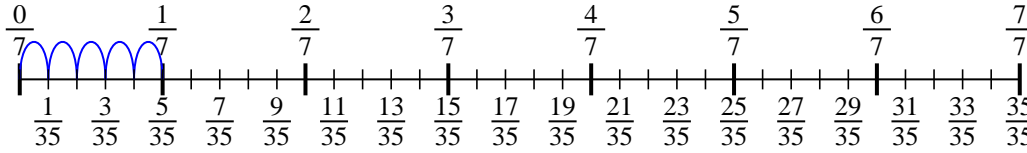
1)  $\frac{1}{5} : 2$



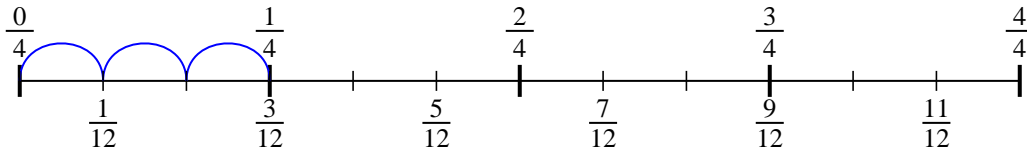
2)  $\frac{1}{5} : 2$



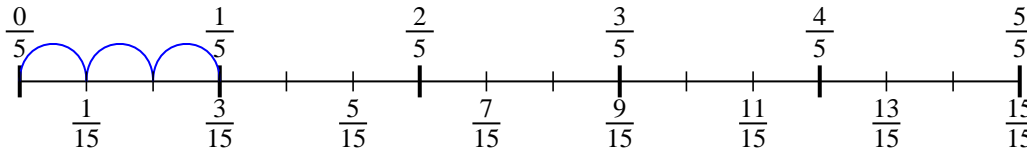
3)  $\frac{1}{7} : 5$



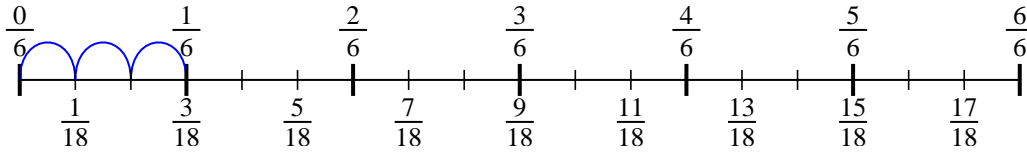
4)  $\frac{1}{4} : 3$



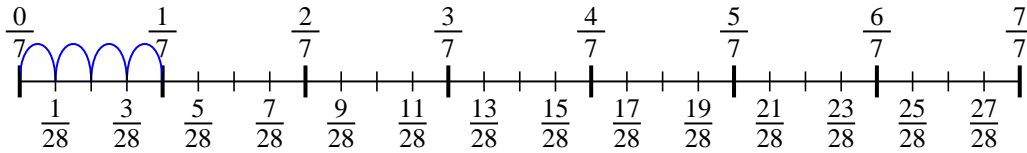
5)  $\frac{1}{5} : 3$



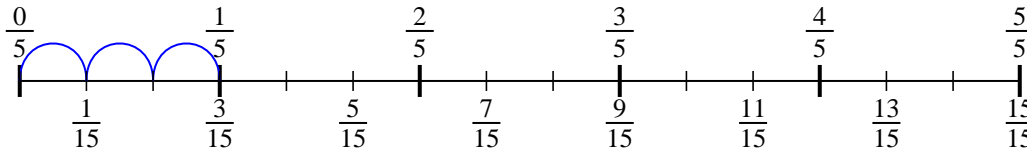
6)  $\frac{1}{6} : 3$



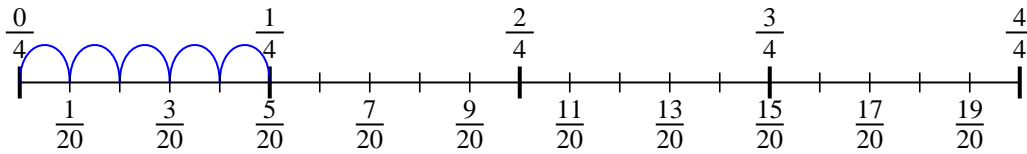
7)  $\frac{1}{7} : 4$



8)  $\frac{1}{5} : 3$



9)  $\frac{1}{4} : 5$

**Risposte**

1.  $\frac{1}{10}$

2.  $\frac{1}{10}$

3.  $\frac{1}{35}$

4.  $\frac{1}{12}$

5.  $\frac{1}{15}$

6.  $\frac{1}{18}$

7.  $\frac{1}{28}$

8.  $\frac{1}{15}$

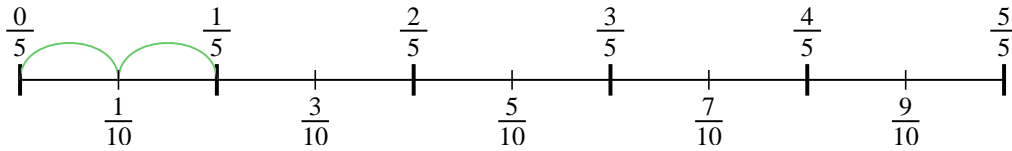
9.  $\frac{1}{20}$



Usa la linea numerata per risolvere ogni problema. Il primo è un esempio.

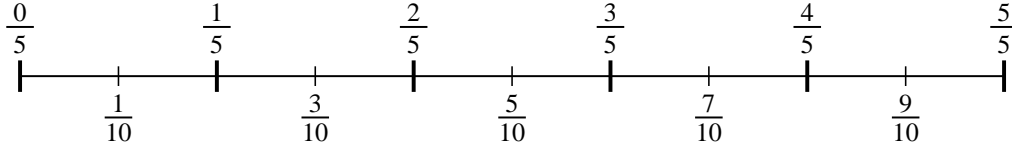
**Risposte**

1)  $\frac{1}{5} : 2$



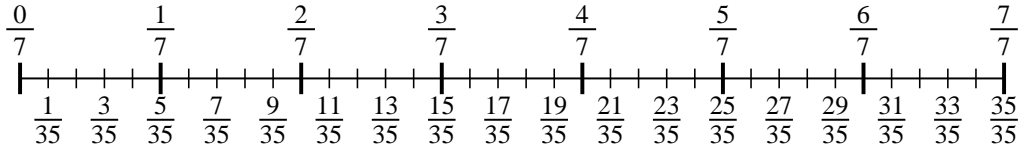
1. \_\_\_\_\_

2)  $\frac{1}{5} : 2$



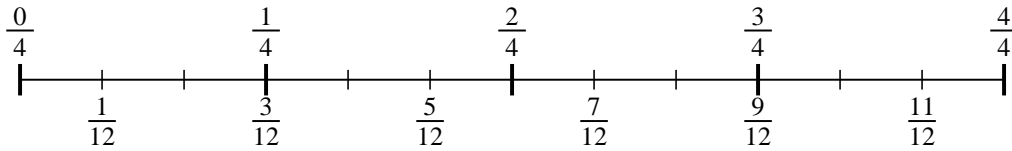
2. \_\_\_\_\_

3)  $\frac{1}{7} : 5$



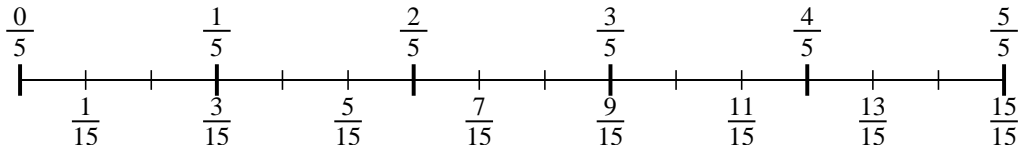
3. \_\_\_\_\_

4)  $\frac{1}{4} : 3$



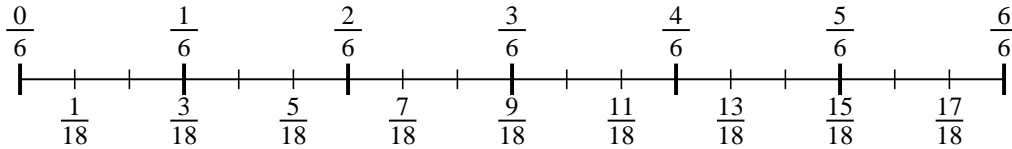
4. \_\_\_\_\_

5)  $\frac{1}{5} : 3$



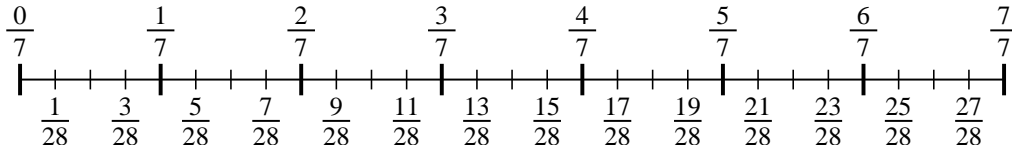
5. \_\_\_\_\_

6)  $\frac{1}{6} : 3$



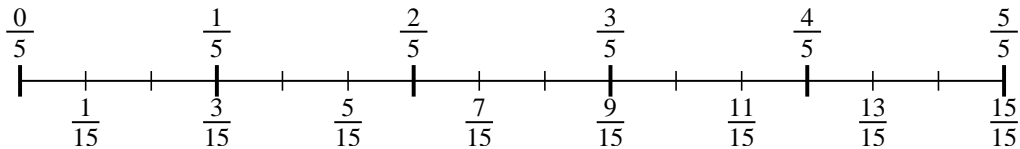
6. \_\_\_\_\_

7)  $\frac{1}{7} : 4$



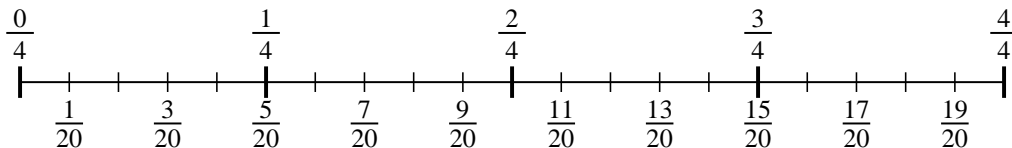
7. \_\_\_\_\_

8)  $\frac{1}{5} : 3$



8. \_\_\_\_\_

9)  $\frac{1}{4} : 5$



9. \_\_\_\_\_