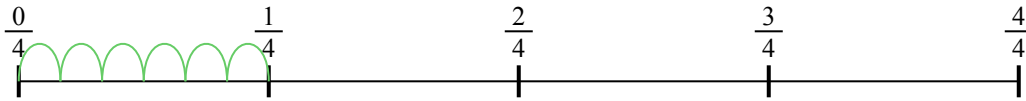





Usa la linea numerata per risolvere ogni problema. Il primo è un esempio.


1)  $\frac{1}{4} : 6$




2)  $\frac{1}{7} : 4$




3)  $\frac{1}{7} : 6$




4)  $\frac{1}{3} : 2$



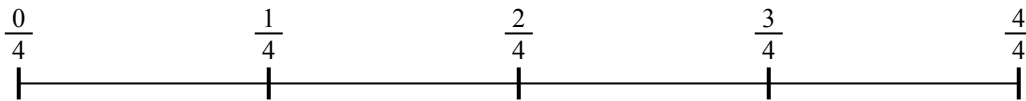
5)  $\frac{1}{5} : 4$




6)  $\frac{1}{7} : 3$



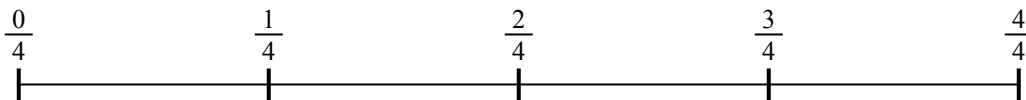
7)  $\frac{1}{4} : 3$



8)  $\frac{1}{7} : 3$



9)  $\frac{1}{4} : 5$



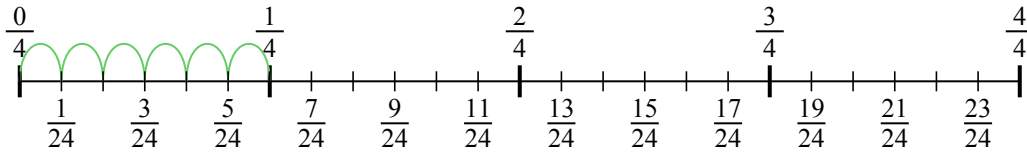
**Risposte**

1. \_\_\_\_\_
2. \_\_\_\_\_
3. \_\_\_\_\_
4. \_\_\_\_\_
5. \_\_\_\_\_
6. \_\_\_\_\_
7. \_\_\_\_\_
8. \_\_\_\_\_
9. \_\_\_\_\_

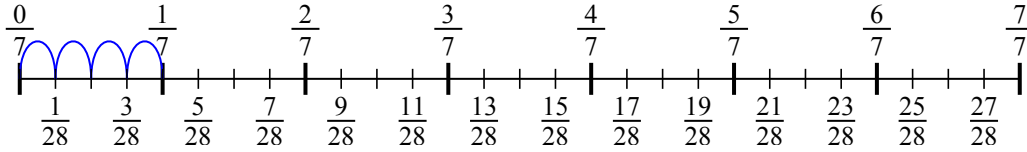


Usa la linea numerata per risolvere ogni problema. Il primo è un esempio.

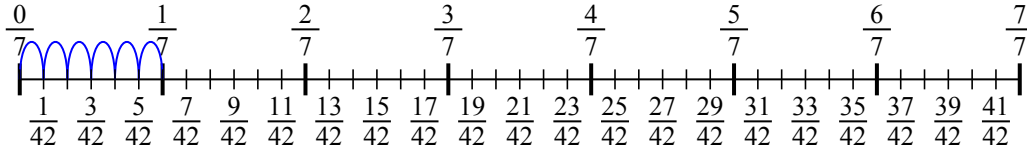
1)  $\frac{1}{4} : 6$



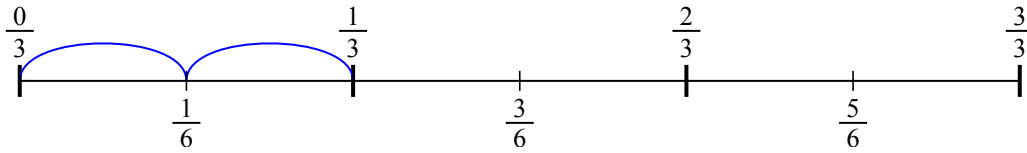
2)  $\frac{1}{7} : 4$



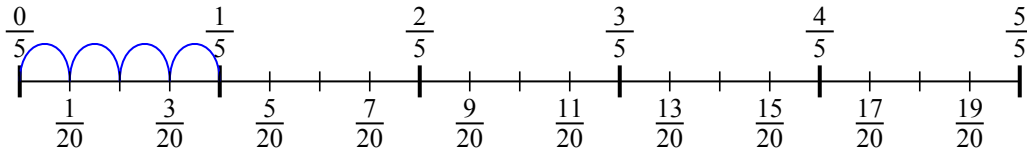
3)  $\frac{1}{7} : 6$



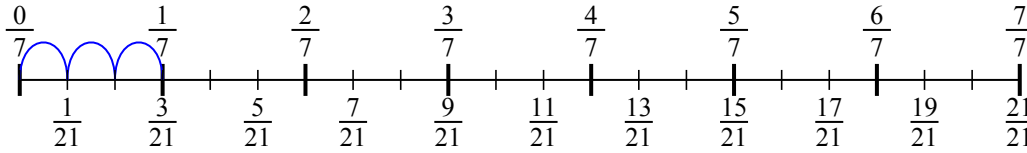
4)  $\frac{1}{3} : 2$



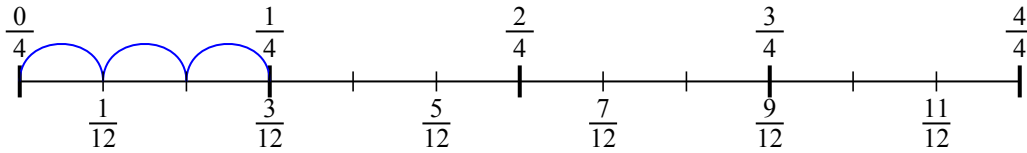
5)  $\frac{1}{5} : 4$



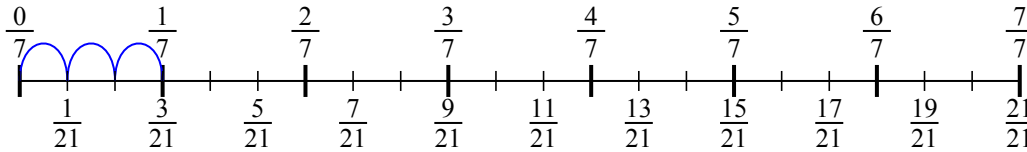
6)  $\frac{1}{7} : 3$



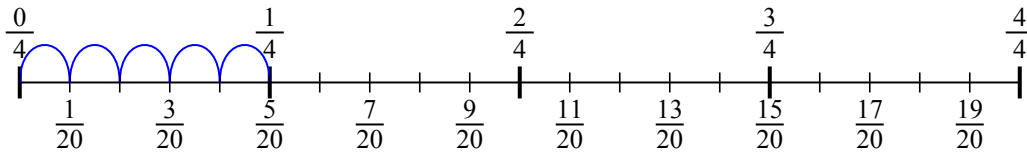
7)  $\frac{1}{4} : 3$



8)  $\frac{1}{7} : 3$



9)  $\frac{1}{4} : 5$

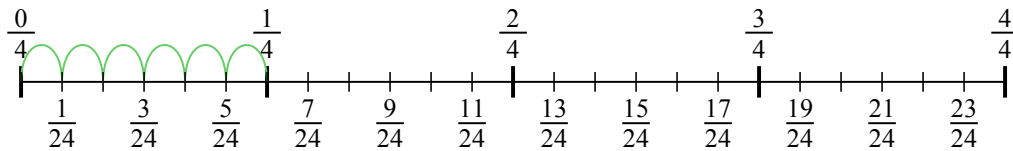


**Risposte**

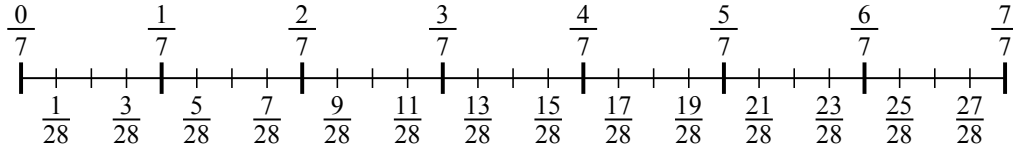
1.  $\frac{1}{24}$
2.  $\frac{1}{28}$
3.  $\frac{1}{42}$
4.  $\frac{1}{6}$
5.  $\frac{1}{20}$
6.  $\frac{1}{21}$
7.  $\frac{1}{12}$
8.  $\frac{1}{21}$
9.  $\frac{1}{20}$



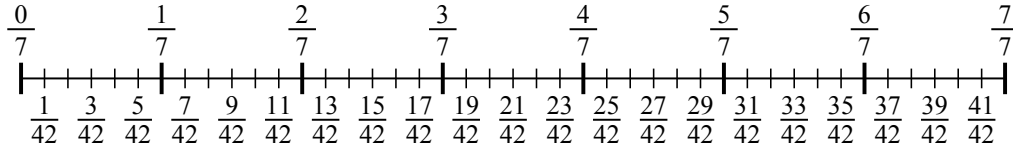
1)  $\frac{1}{4} : 6$



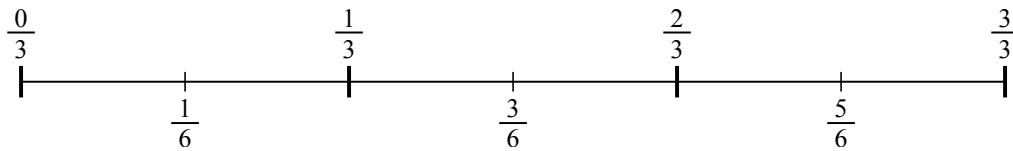
2)  $\frac{1}{7} : 4$



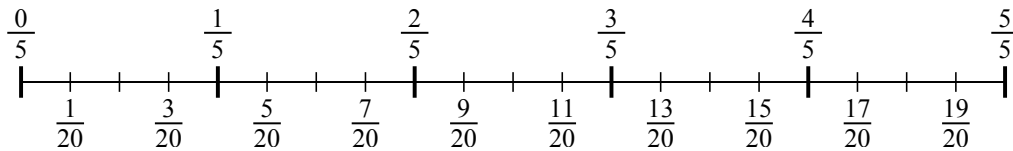
3)  $\frac{1}{7} : 6$



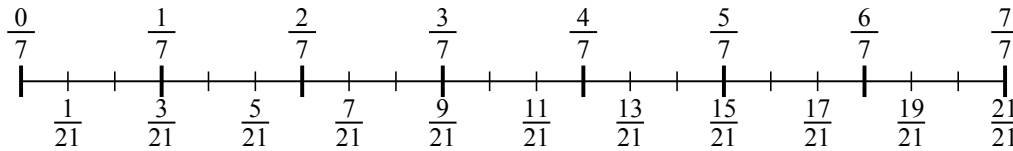
4)  $\frac{1}{3} : 2$



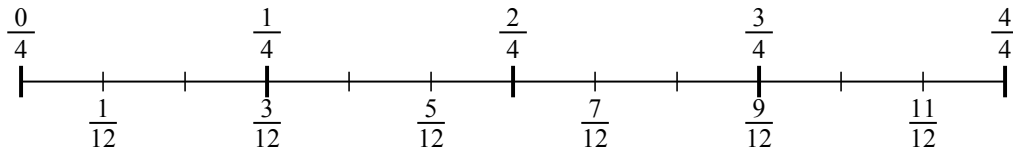
5)  $\frac{1}{5} : 4$



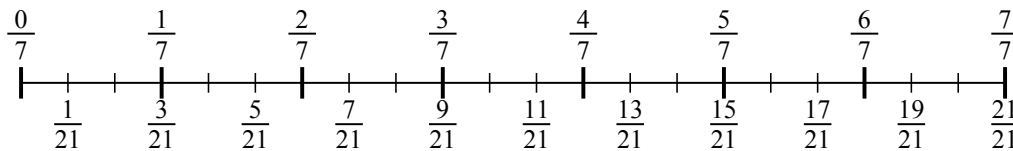
6)  $\frac{1}{7} : 3$



7)  $\frac{1}{4} : 3$



8)  $\frac{1}{7} : 3$



9)  $\frac{1}{4} : 5$

