




Usa la linea numerata per risolvere ogni problema. Il primo è un esempio.


**Risposte**

1)  $\frac{1}{5} : 3$




1. \_\_\_\_\_

2)  $\frac{1}{7} : 5$



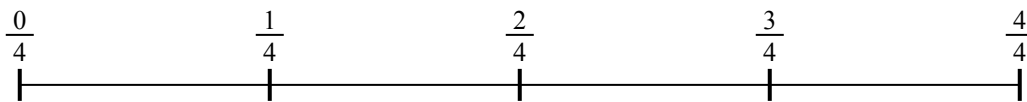
2. \_\_\_\_\_

3)  $\frac{1}{3} : 4$



3. \_\_\_\_\_

4)  $\frac{1}{4} : 2$



4. \_\_\_\_\_

5)  $\frac{1}{3} : 6$



5. \_\_\_\_\_

6)  $\frac{1}{3} : 3$



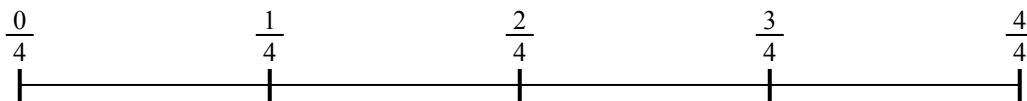
6. \_\_\_\_\_

7)  $\frac{1}{3} : 4$



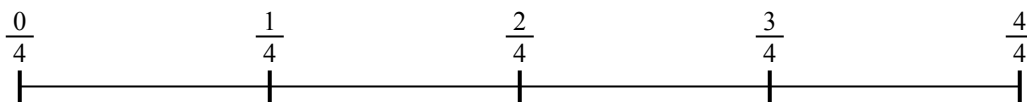
7. \_\_\_\_\_

8)  $\frac{1}{4} : 3$



8. \_\_\_\_\_

9)  $\frac{1}{4} : 3$

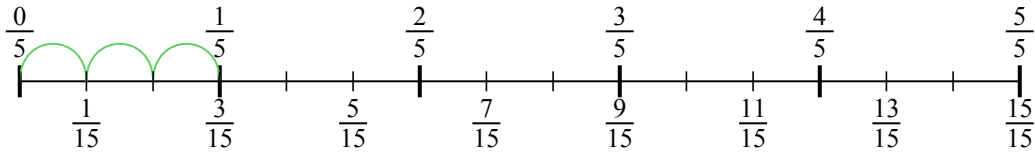


9. \_\_\_\_\_

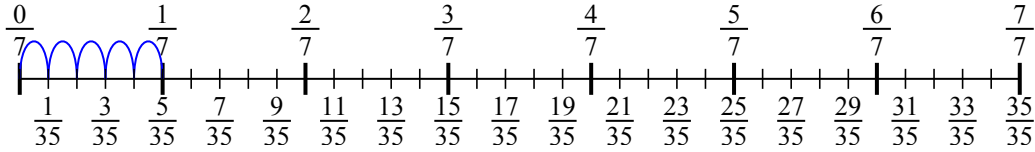


Usa la linea numerata per risolvere ogni problema. Il primo è un esempio.

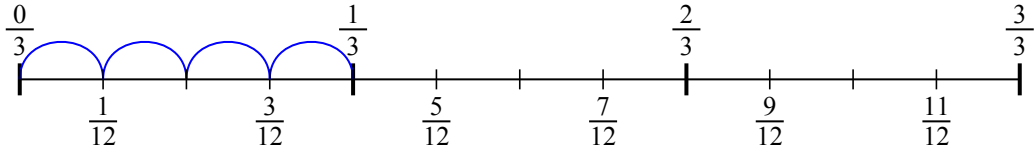
1)  $\frac{1}{5} : 3$



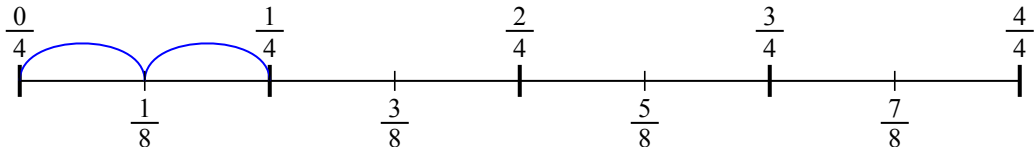
2)  $\frac{1}{7} : 5$



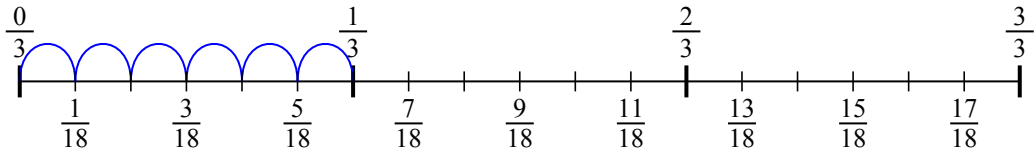
3)  $\frac{1}{3} : 4$



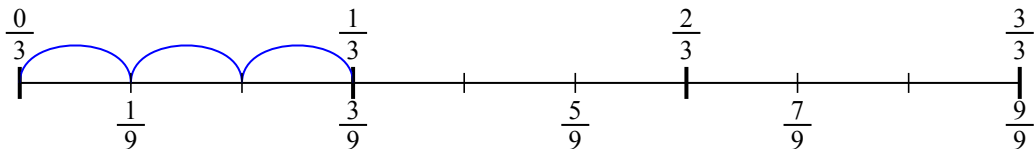
4)  $\frac{1}{4} : 2$



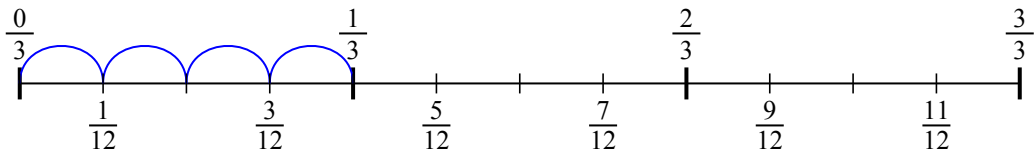
5)  $\frac{1}{3} : 6$



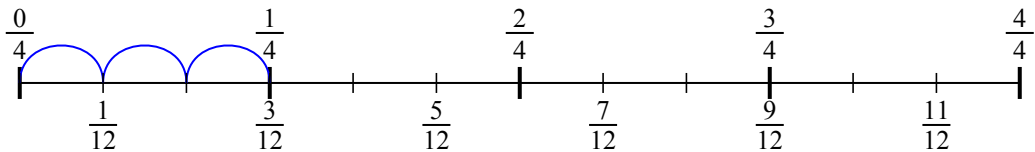
6)  $\frac{1}{3} : 3$



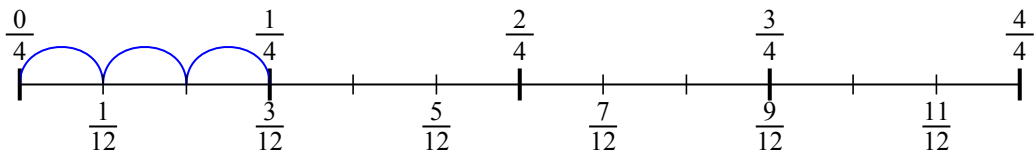
7)  $\frac{1}{3} : 4$



8)  $\frac{1}{4} : 3$



9)  $\frac{1}{4} : 3$

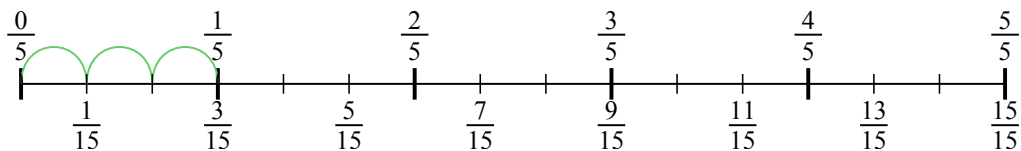


**Risposte**

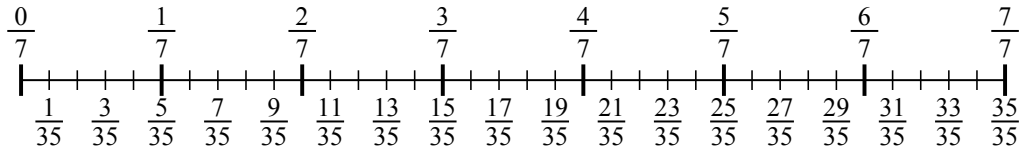
1.  $\frac{1}{15}$
2.  $\frac{1}{35}$
3.  $\frac{1}{12}$
4.  $\frac{1}{8}$
5.  $\frac{1}{18}$
6.  $\frac{1}{9}$
7.  $\frac{1}{12}$
8.  $\frac{1}{12}$
9.  $\frac{1}{12}$



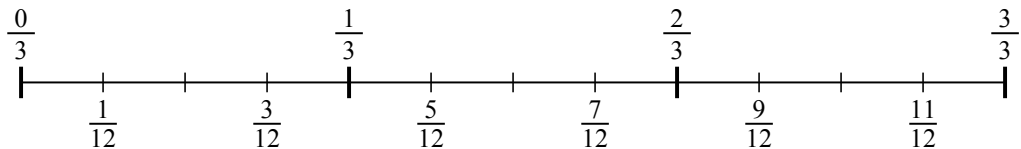
1)  $\frac{1}{5} : 3$



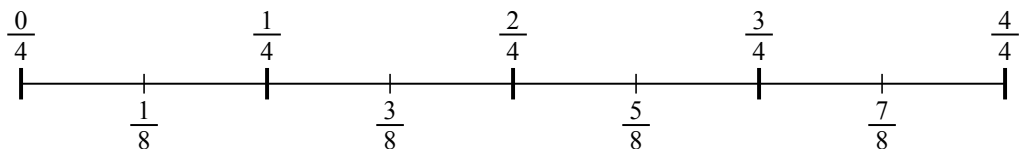
2)  $\frac{1}{7} : 5$



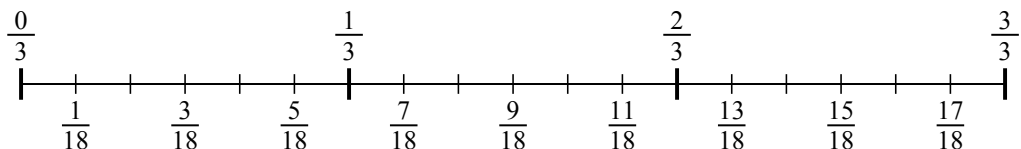
3)  $\frac{1}{3} : 4$



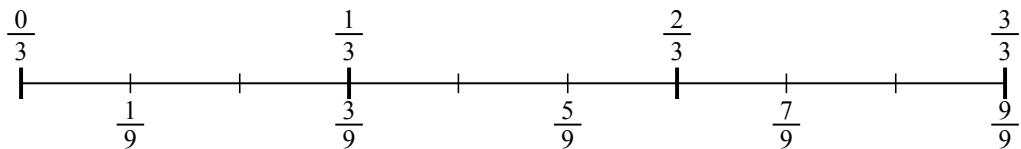
4)  $\frac{1}{4} : 2$



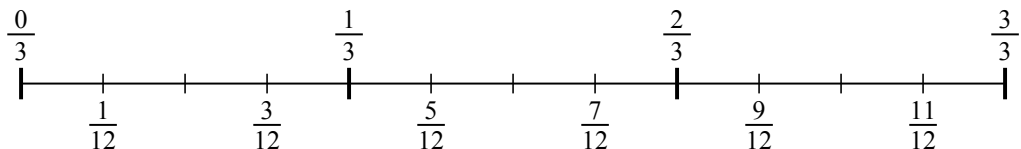
5)  $\frac{1}{3} : 6$



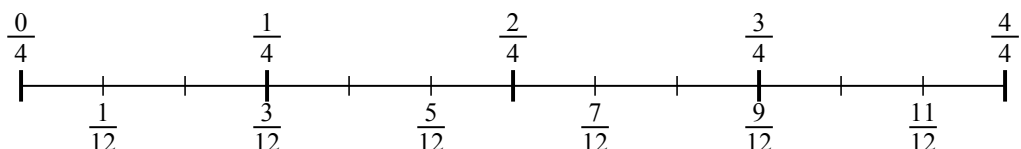
6)  $\frac{1}{3} : 3$



7)  $\frac{1}{3} : 4$



8)  $\frac{1}{4} : 3$



9)  $\frac{1}{4} : 3$

