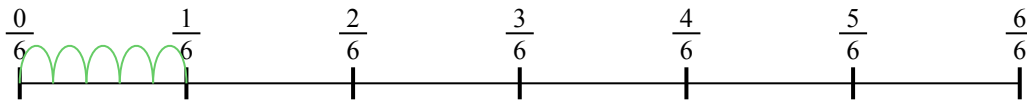





Usa la linea numerata per risolvere ogni problema. Il primo è un esempio.

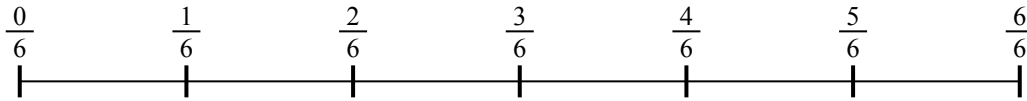
1) $\frac{1}{6} : 5$



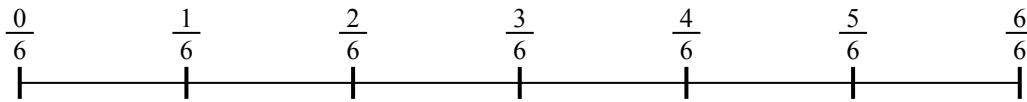
2) $\frac{1}{5} : 5$



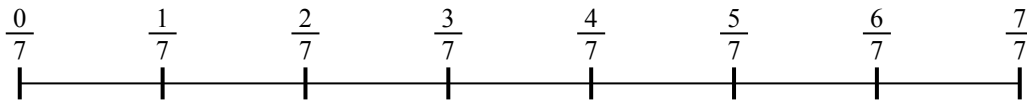
3) $\frac{1}{6} : 6$




4) $\frac{1}{6} : 4$



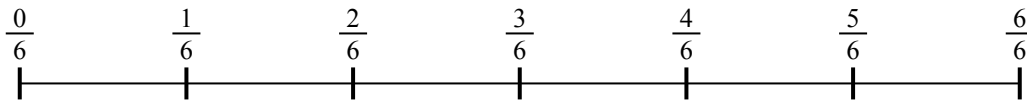
5) $\frac{1}{7} : 4$



6) $\frac{1}{5} : 2$



7) $\frac{1}{6} : 6$



8) $\frac{1}{5} : 5$



9) $\frac{1}{5} : 5$



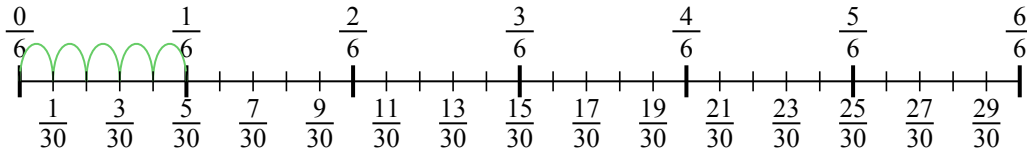
Risposte

1. _____
2. _____
3. _____
4. _____
5. _____
6. _____
7. _____
8. _____
9. _____

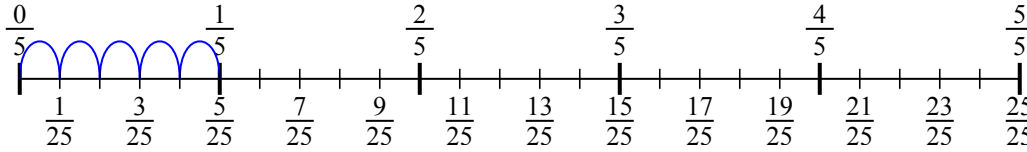


Usa la linea numerata per risolvere ogni problema. Il primo è un esempio.

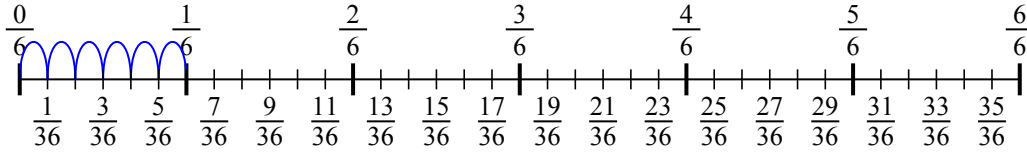
1) $\frac{1}{6} : 5$



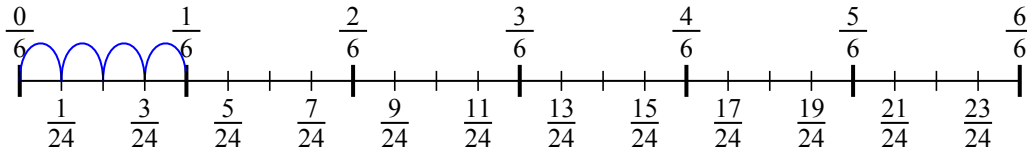
2) $\frac{1}{5} : 5$



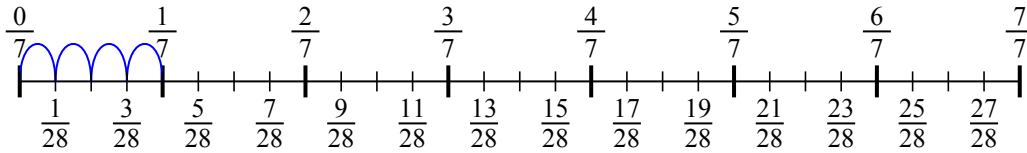
3) $\frac{1}{6} : 6$



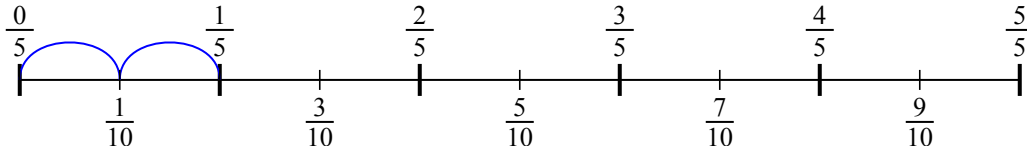
4) $\frac{1}{6} : 4$



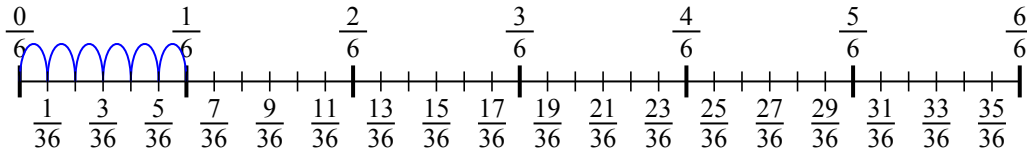
5) $\frac{1}{7} : 4$



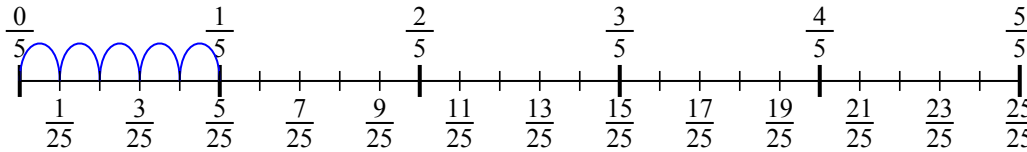
6) $\frac{1}{5} : 2$



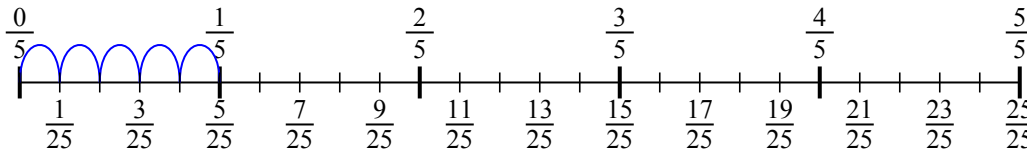
7) $\frac{1}{6} : 6$



8) $\frac{1}{5} : 5$



9) $\frac{1}{5} : 5$

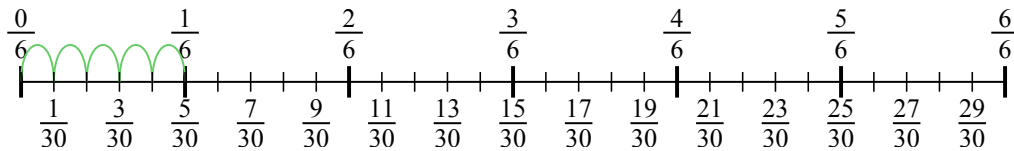


Risposte

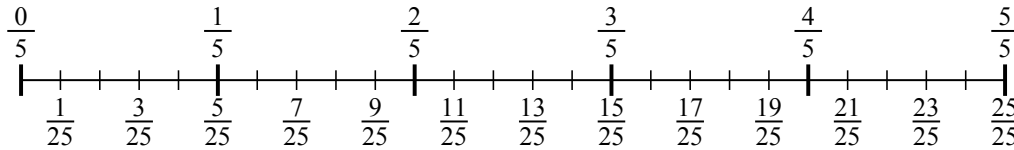
1. $\frac{1}{30}$
2. $\frac{1}{25}$
3. $\frac{1}{36}$
4. $\frac{1}{24}$
5. $\frac{1}{28}$
6. $\frac{1}{10}$
7. $\frac{1}{36}$
8. $\frac{1}{25}$
9. $\frac{1}{25}$



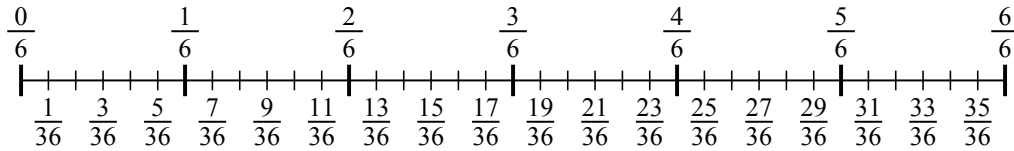
1) $\frac{1}{6} : 5$



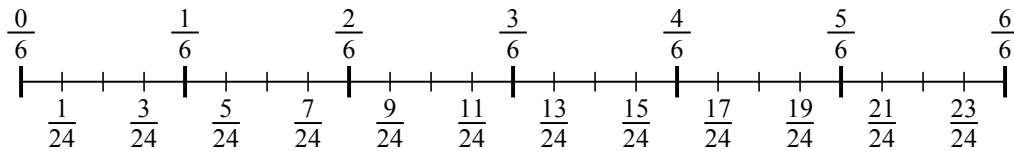
2) $\frac{1}{5} : 5$



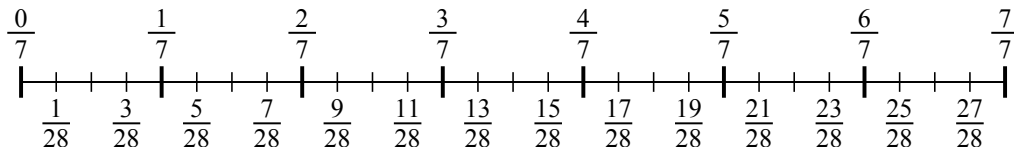
3) $\frac{1}{6} : 6$



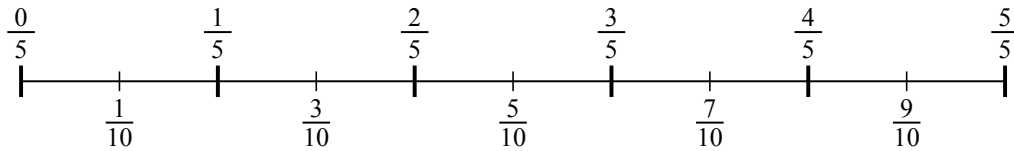
4) $\frac{1}{6} : 4$



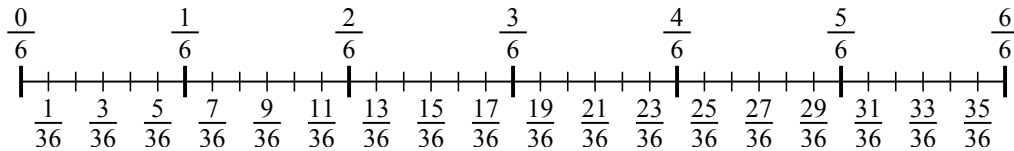
5) $\frac{1}{7} : 4$



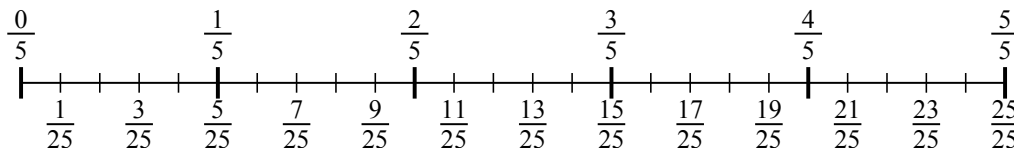
6) $\frac{1}{5} : 2$



7) $\frac{1}{6} : 6$



8) $\frac{1}{5} : 5$



9) $\frac{1}{5} : 5$

