





Usa la linea numerata per risolvere ogni problema. Il primo è un esempio.

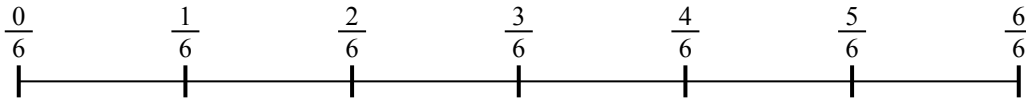
1) $\frac{1}{7} : 6$




2) $\frac{1}{5} : 3$




3) $\frac{1}{6} : 5$




4) $\frac{1}{5} : 6$




5) $\frac{1}{7} : 3$



6) $\frac{1}{3} : 4$



7) $\frac{1}{3} : 2$



8) $\frac{1}{3} : 6$



9) $\frac{1}{3} : 5$



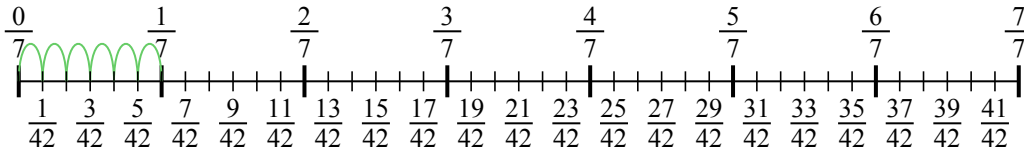
Risposte

1. _____
2. _____
3. _____
4. _____
5. _____
6. _____
7. _____
8. _____
9. _____

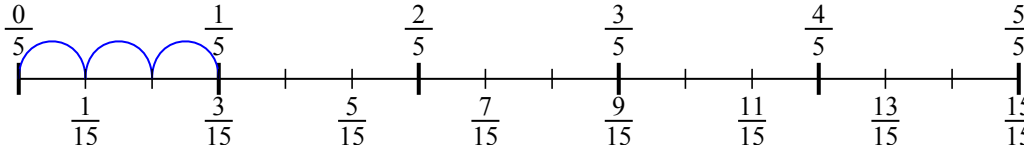


Usa la linea numerata per risolvere ogni problema. Il primo è un esempio.

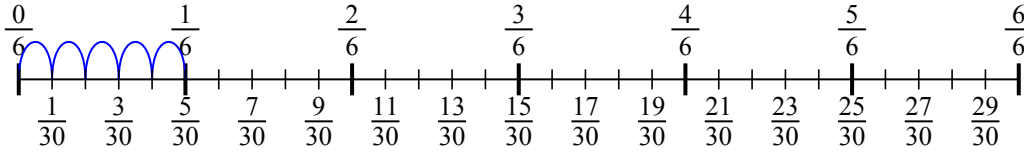
1) $\frac{1}{7} : 6$



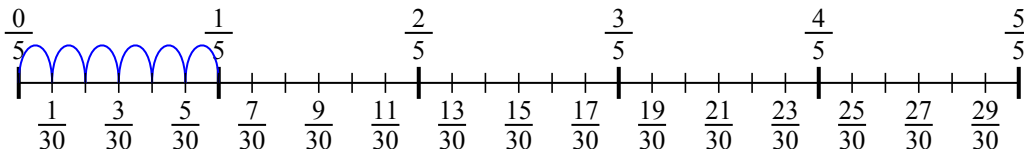
2) $\frac{1}{5} : 3$



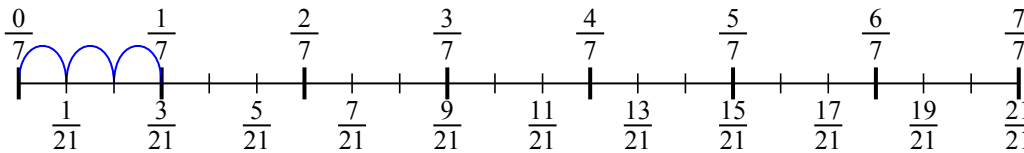
3) $\frac{1}{6} : 5$



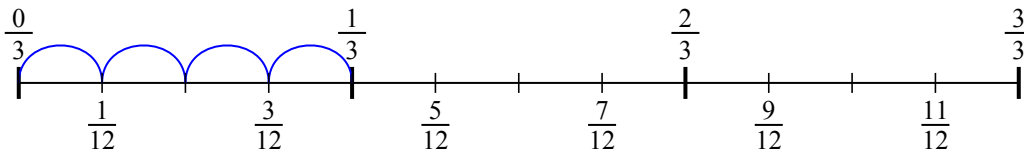
4) $\frac{1}{5} : 6$



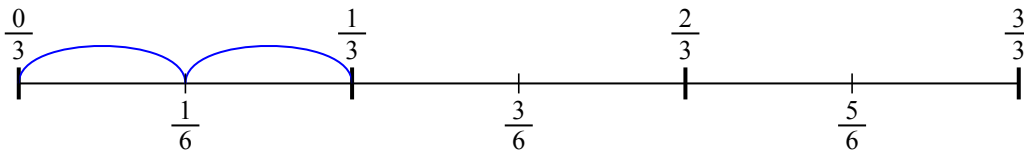
5) $\frac{1}{7} : 3$



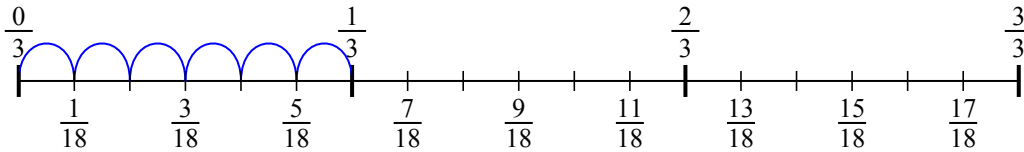
6) $\frac{1}{3} : 4$



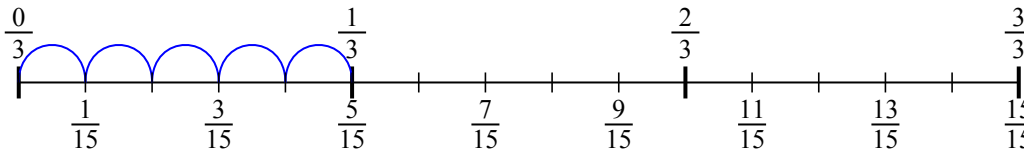
7) $\frac{1}{3} : 2$



8) $\frac{1}{3} : 6$



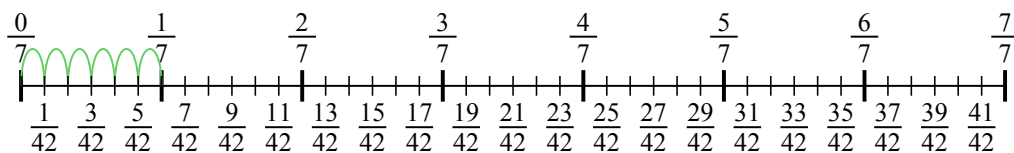
9) $\frac{1}{3} : 5$

**Risposte**

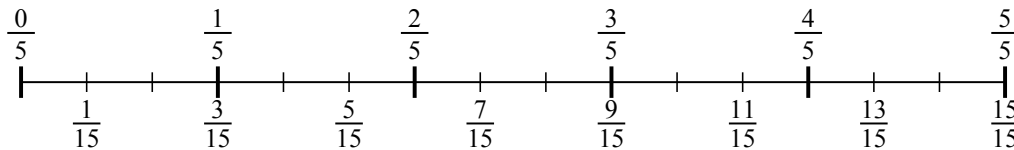
1. $\frac{1}{42}$
2. $\frac{1}{15}$
3. $\frac{1}{30}$
4. $\frac{1}{30}$
5. $\frac{1}{21}$
6. $\frac{1}{12}$
7. $\frac{1}{6}$
8. $\frac{1}{18}$
9. $\frac{1}{15}$



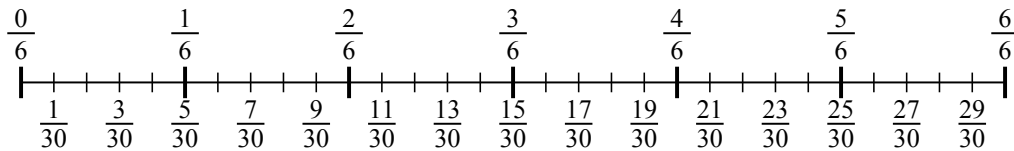
1) $\frac{1}{7} : 6$



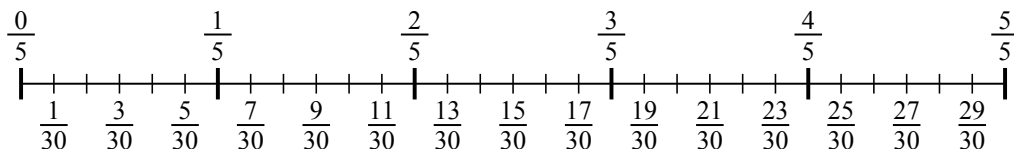
2) $\frac{1}{5} : 3$



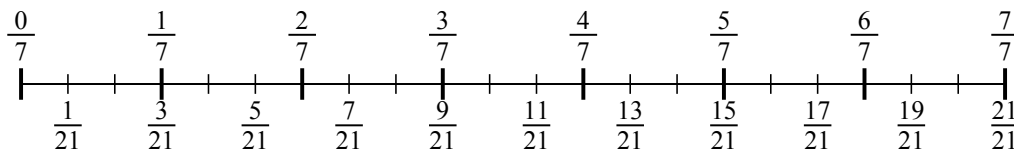
3) $\frac{1}{6} : 5$



4) $\frac{1}{5} : 6$



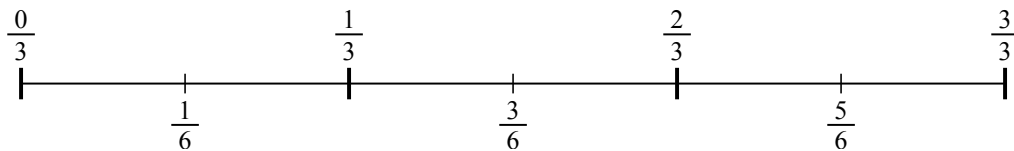
5) $\frac{1}{7} : 3$



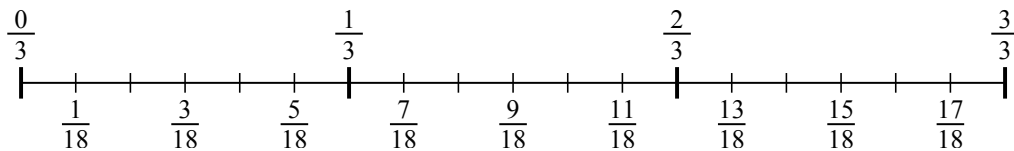
6) $\frac{1}{3} : 4$



7) $\frac{1}{3} : 2$



8) $\frac{1}{3} : 6$



9) $\frac{1}{3} : 5$

