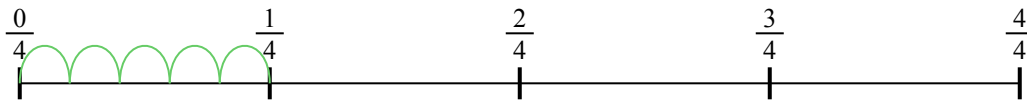




Usa la linea numerata per risolvere ogni problema. Il primo è un esempio.


Risposte

1) $\frac{1}{4} : 5$




1. _____

2) $\frac{1}{7} : 6$




2. _____

3) $\frac{1}{3} : 2$




3. _____

4) $\frac{1}{5} : 6$



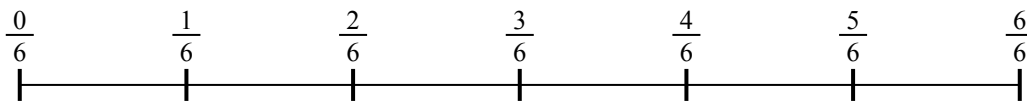
4. _____

5) $\frac{1}{7} : 2$



5. _____

6) $\frac{1}{6} : 5$




6. _____

7) $\frac{1}{3} : 3$



7. _____

8) $\frac{1}{7} : 2$



8. _____

9) $\frac{1}{3} : 3$

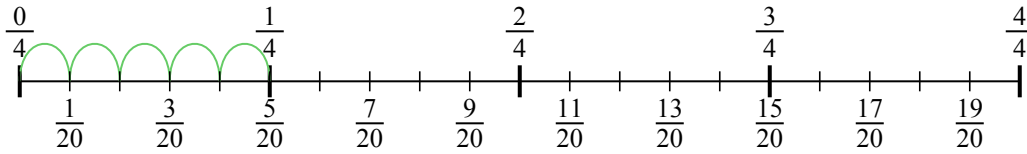


9. _____

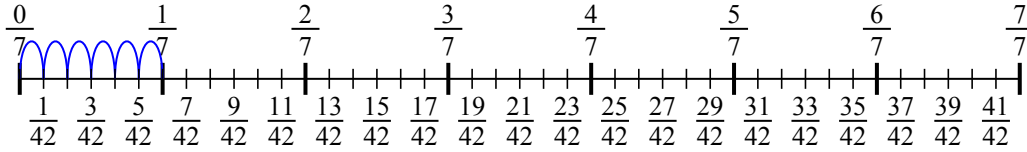


Usa la linea numerata per risolvere ogni problema. Il primo è un esempio.

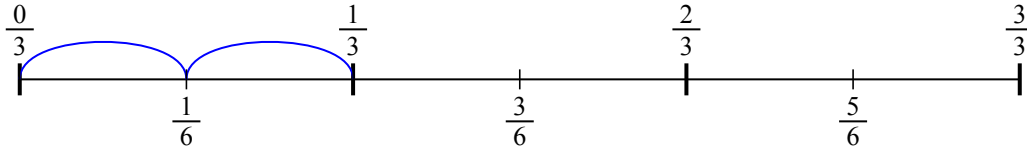
1) $\frac{1}{4} : 5$



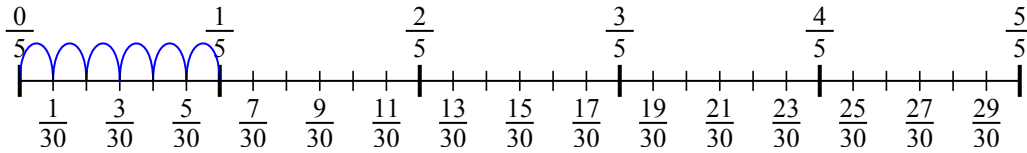
2) $\frac{1}{7} : 6$



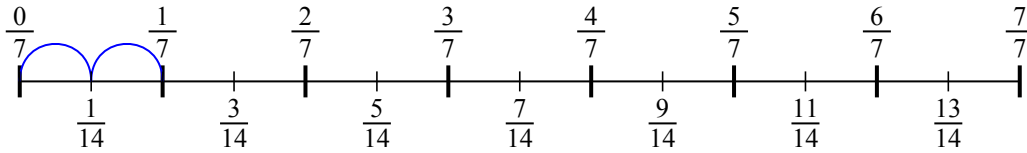
3) $\frac{1}{3} : 2$



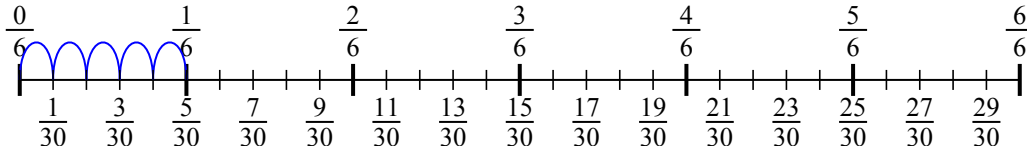
4) $\frac{1}{5} : 6$



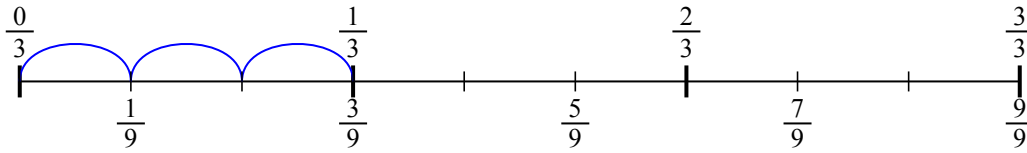
5) $\frac{1}{7} : 2$



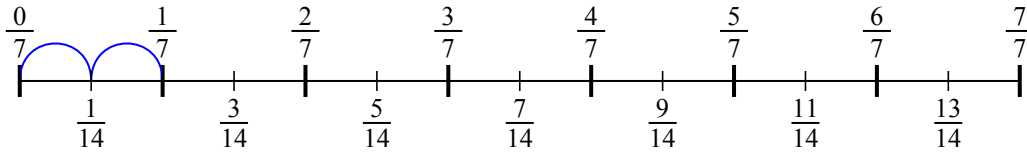
6) $\frac{1}{6} : 5$



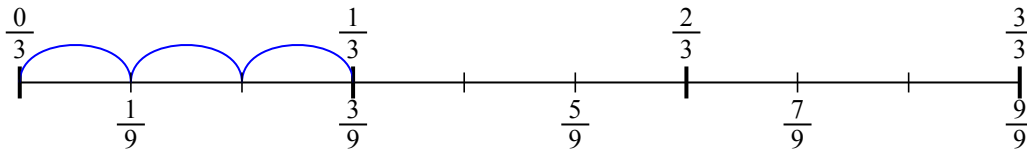
7) $\frac{1}{3} : 3$



8) $\frac{1}{7} : 2$



9) $\frac{1}{3} : 3$

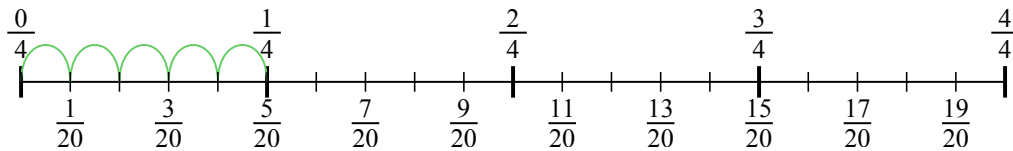


Risposte

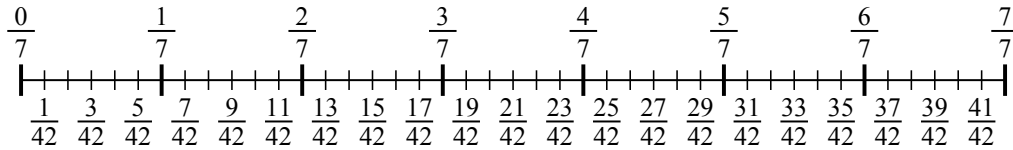
1. $\frac{1}{20}$
2. $\frac{1}{42}$
3. $\frac{1}{6}$
4. $\frac{1}{30}$
5. $\frac{1}{14}$
6. $\frac{1}{30}$
7. $\frac{1}{9}$
8. $\frac{1}{14}$
9. $\frac{1}{9}$



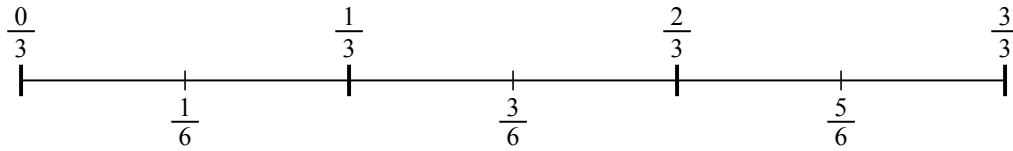
1) $\frac{1}{4} : 5$



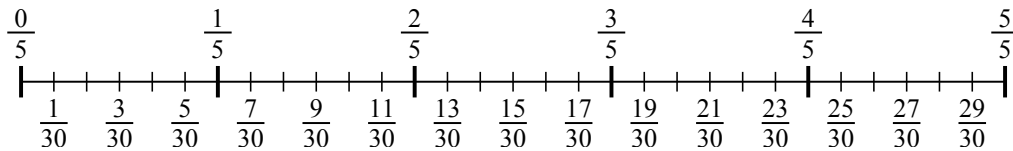
2) $\frac{1}{7} : 6$



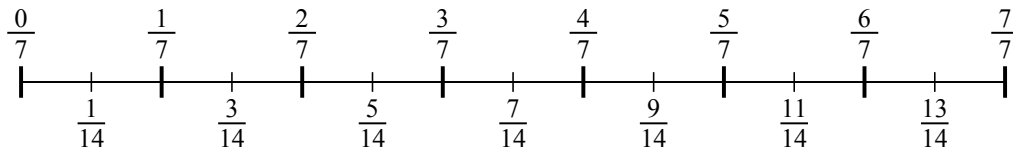
3) $\frac{1}{3} : 2$



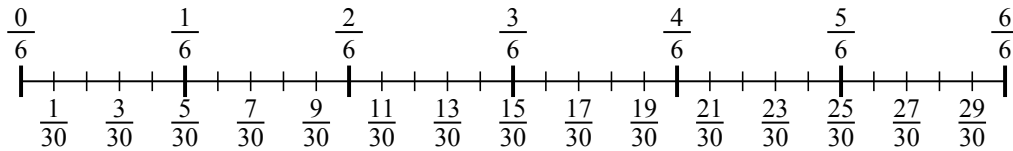
4) $\frac{1}{5} : 6$



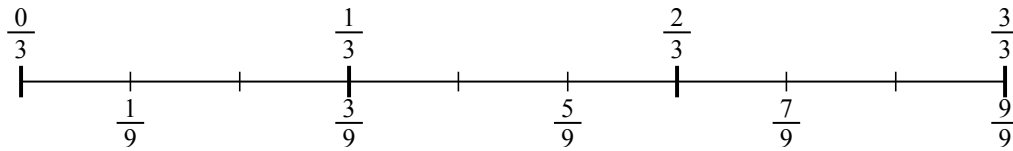
5) $\frac{1}{7} : 2$



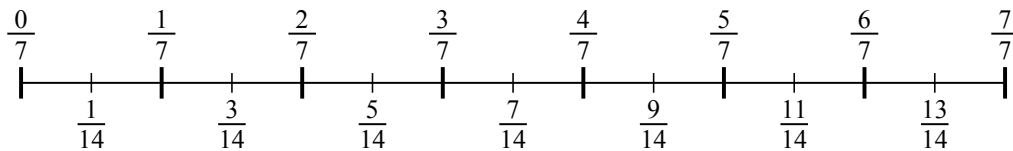
6) $\frac{1}{6} : 5$



7) $\frac{1}{3} : 3$



8) $\frac{1}{7} : 2$



9) $\frac{1}{3} : 3$

