




Usa la linea numerata per risolvere ogni problema. Il primo è un esempio.


**Risposte**

1)  $\frac{1}{7} : 3$



1. \_\_\_\_\_

2)  $\frac{1}{7} : 5$



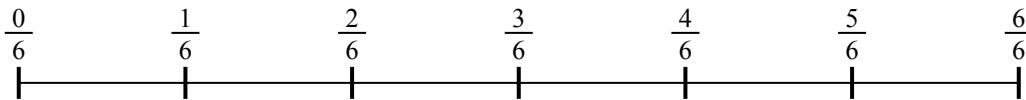
2. \_\_\_\_\_

3)  $\frac{1}{7} : 2$



3. \_\_\_\_\_

4)  $\frac{1}{6} : 2$



4. \_\_\_\_\_

5)  $\frac{1}{7} : 2$



5. \_\_\_\_\_

6)  $\frac{1}{7} : 6$



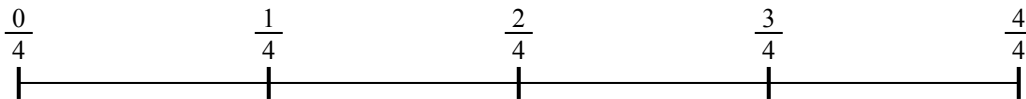
6. \_\_\_\_\_

7)  $\frac{1}{7} : 4$



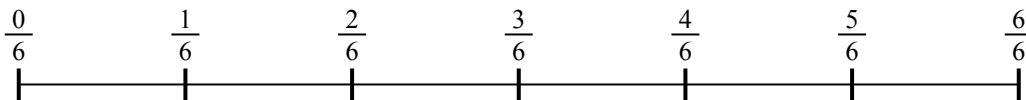
7. \_\_\_\_\_

8)  $\frac{1}{4} : 2$



8. \_\_\_\_\_

9)  $\frac{1}{6} : 2$

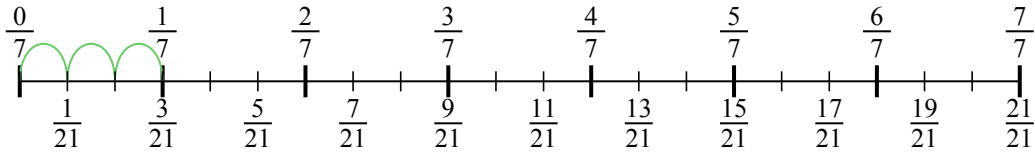


9. \_\_\_\_\_

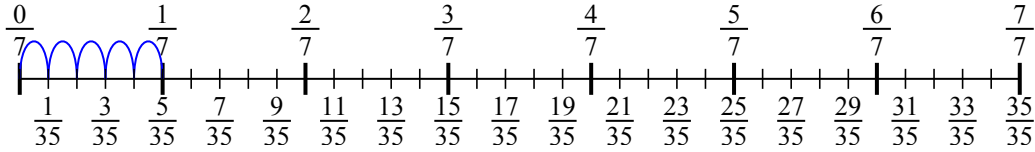


Usa la linea numerata per risolvere ogni problema. Il primo è un esempio.

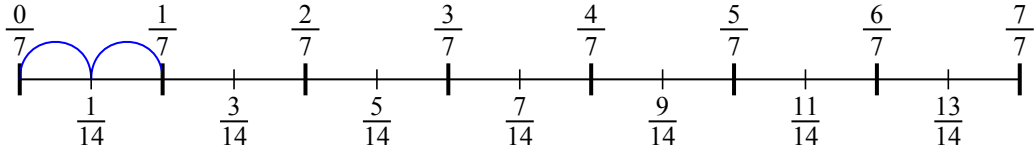
1)  $\frac{1}{7} : 3$



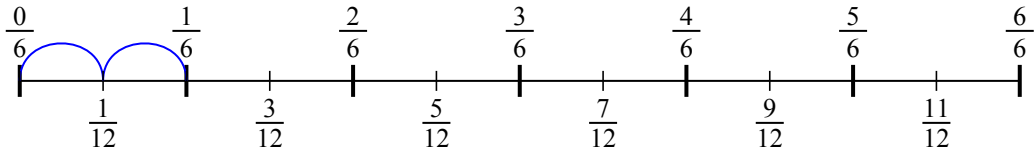
2)  $\frac{1}{7} : 5$



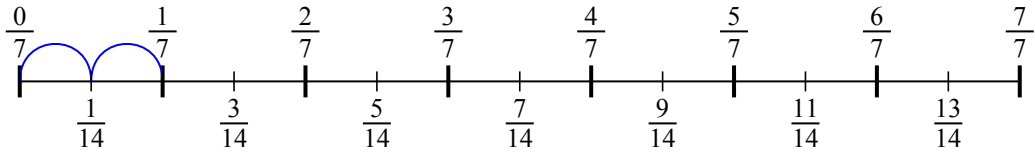
3)  $\frac{1}{7} : 2$



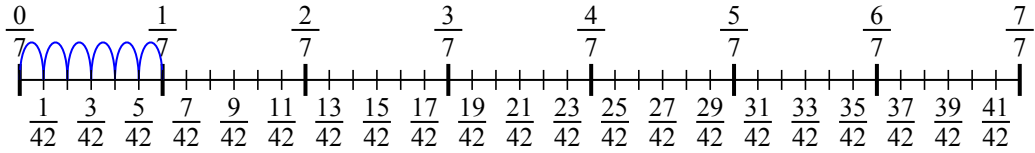
4)  $\frac{1}{6} : 2$



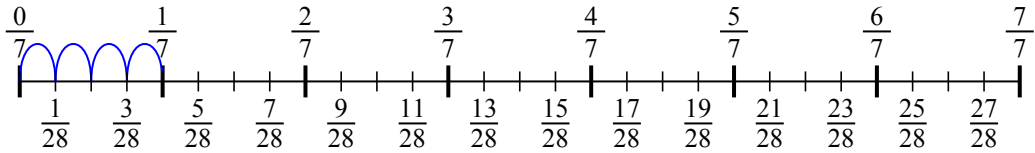
5)  $\frac{1}{7} : 2$



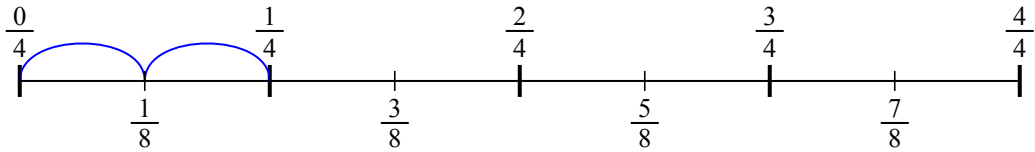
6)  $\frac{1}{7} : 6$



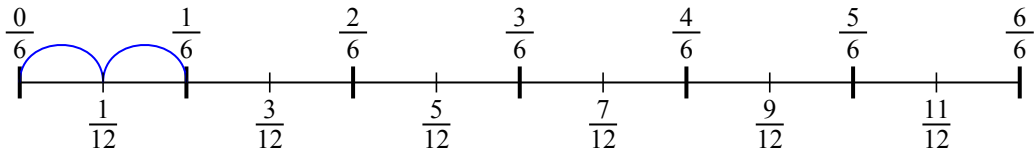
7)  $\frac{1}{7} : 4$



8)  $\frac{1}{4} : 2$



9)  $\frac{1}{6} : 2$

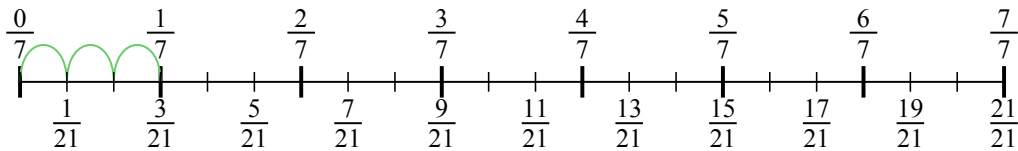


**Risposte**

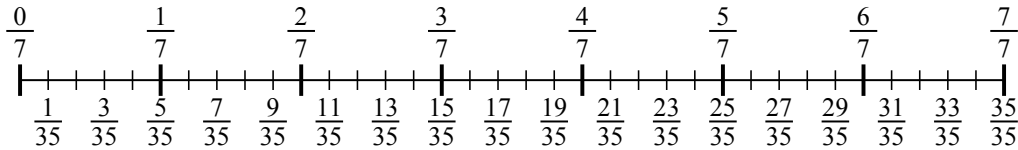
1.  $\frac{1}{21}$
2.  $\frac{1}{35}$
3.  $\frac{1}{14}$
4.  $\frac{1}{12}$
5.  $\frac{1}{14}$
6.  $\frac{1}{42}$
7.  $\frac{1}{28}$
8.  $\frac{1}{8}$
9.  $\frac{1}{12}$



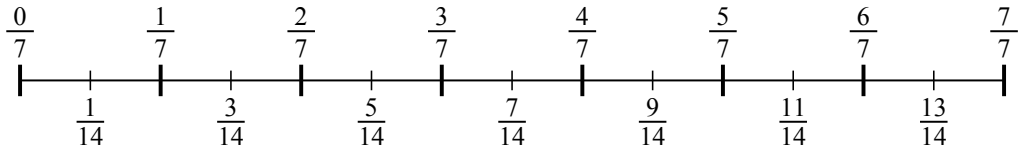
1)  $\frac{1}{7} : 3$



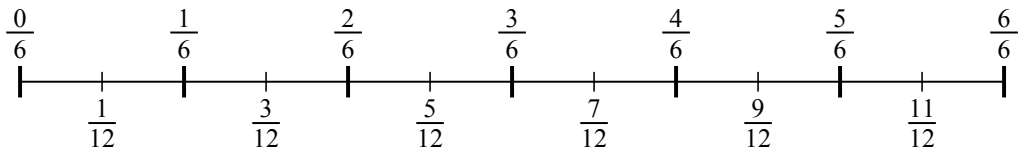
2)  $\frac{1}{7} : 5$



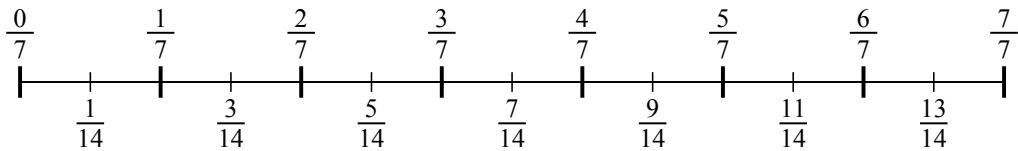
3)  $\frac{1}{7} : 2$



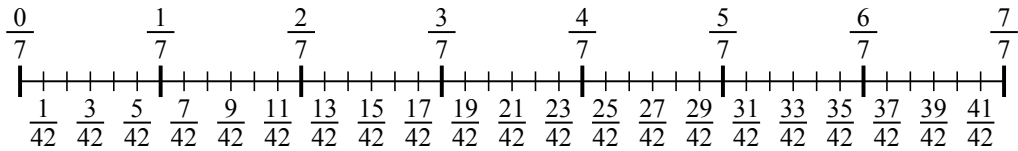
4)  $\frac{1}{6} : 2$



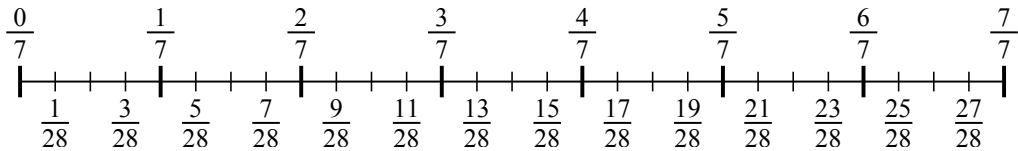
5)  $\frac{1}{7} : 2$



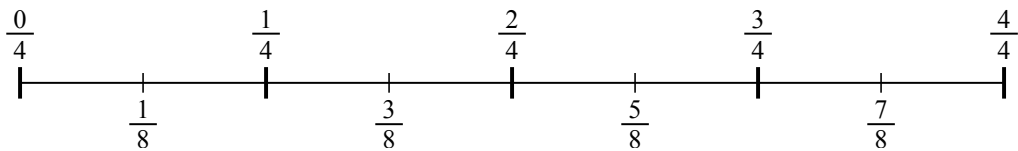
6)  $\frac{1}{7} : 6$



7)  $\frac{1}{7} : 4$



8)  $\frac{1}{4} : 2$



9)  $\frac{1}{6} : 2$

