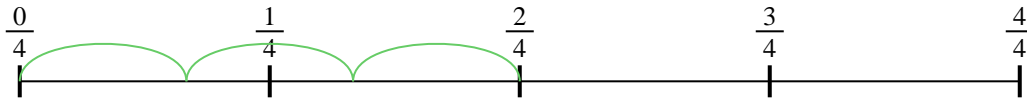




Usa la linea numerata per risolvere ogni problema. Il primo è un esempio.

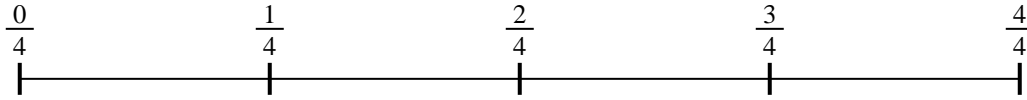
Risposte

1) $\frac{2}{4} : 3$



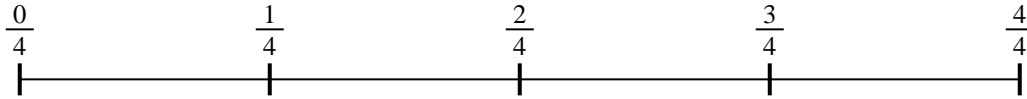
1. _____

2) $\frac{3}{4} : 3$




2. _____

3) $\frac{3}{4} : 2$



3. _____

4) $\frac{2}{5} : 2$



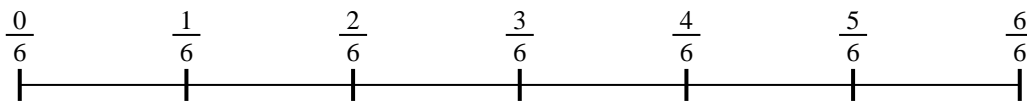
4. _____

5) $\frac{6}{7} : 4$



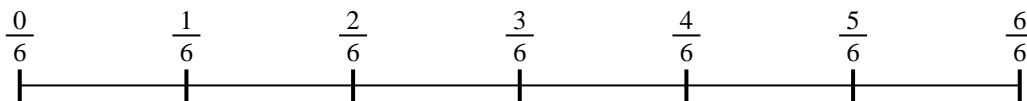
5. _____

6) $\frac{4}{6} : 3$



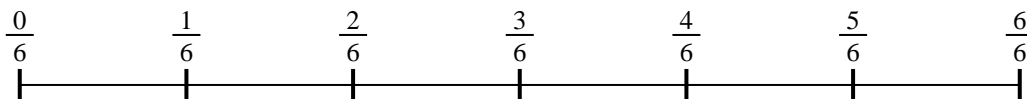
6. _____

7) $\frac{4}{6} : 6$



7. _____

8) $\frac{3}{6} : 4$



8. _____

9) $\frac{4}{7} : 4$

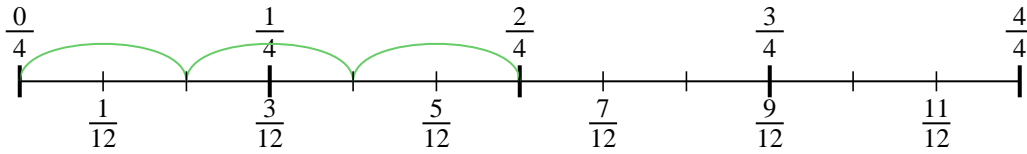


9. _____

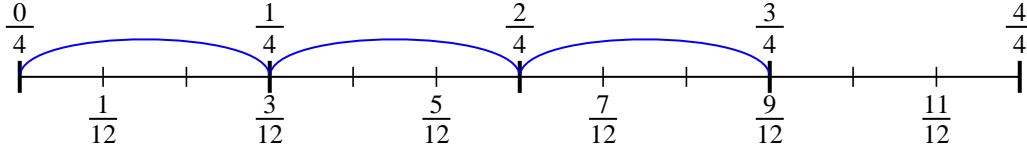


Usa la linea numerata per risolvere ogni problema. Il primo è un esempio.

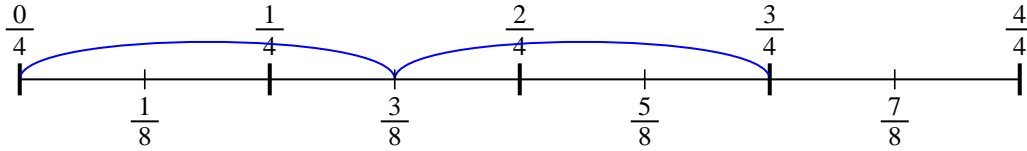
1) $\frac{2}{4} : 3$



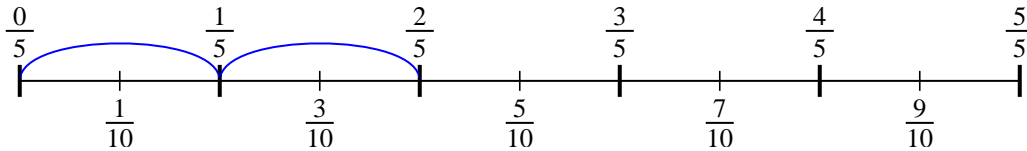
2) $\frac{3}{4} : 3$



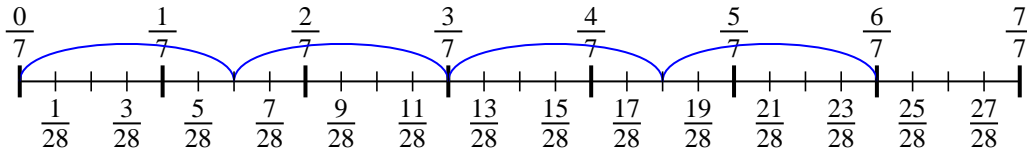
3) $\frac{3}{4} : 2$



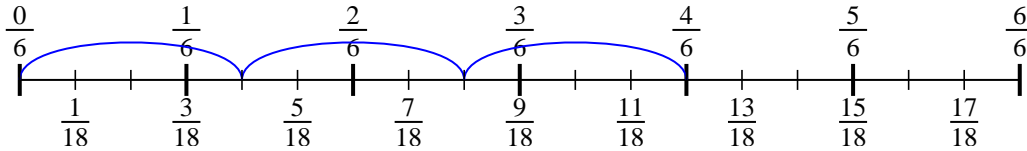
4) $\frac{2}{5} : 2$



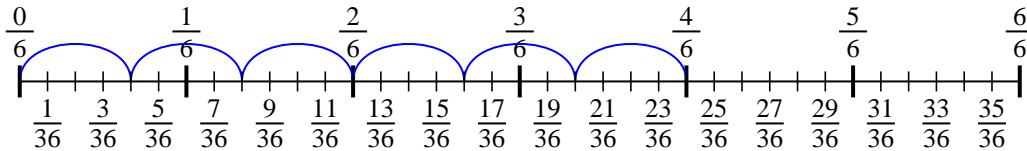
5) $\frac{6}{7} : 4$



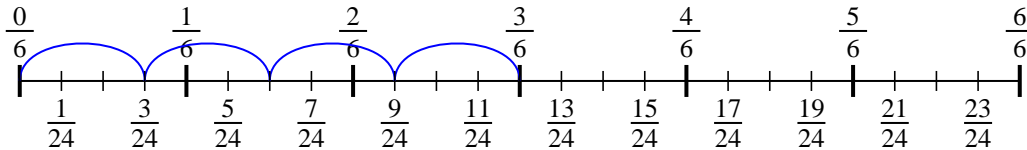
6) $\frac{4}{6} : 3$



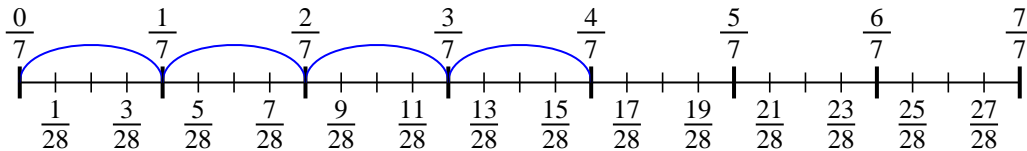
7) $\frac{4}{6} : 6$



8) $\frac{3}{6} : 4$



9) $\frac{4}{7} : 4$

**Risposte**

1. $\frac{2}{12}$

2. $\frac{3}{12}$

3. $\frac{3}{8}$

4. $\frac{2}{10}$

5. $\frac{6}{28}$

6. $\frac{4}{18}$

7. $\frac{4}{36}$

8. $\frac{3}{24}$

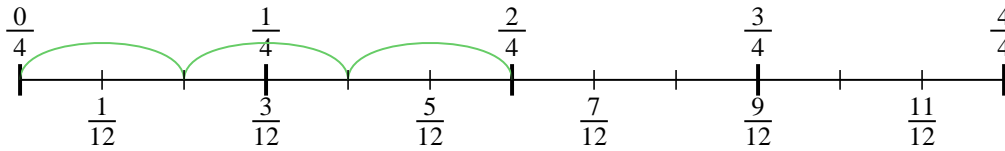
9. $\frac{4}{28}$



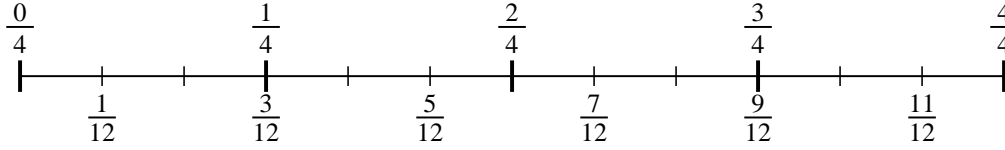
Usa la linea numerata per risolvere ogni problema. Il primo è un esempio.

Risposte

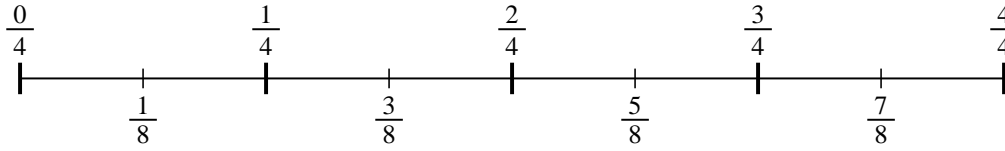
1) $\frac{2}{4} : 3$



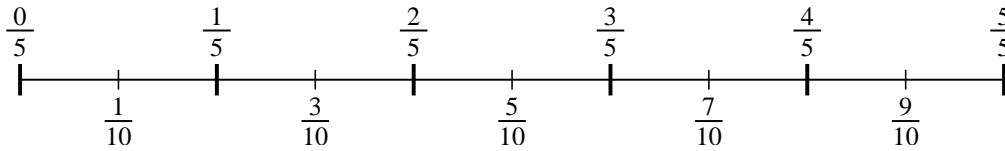
2) $\frac{3}{4} : 3$



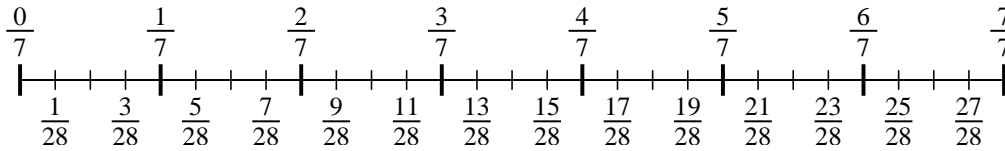
3) $\frac{3}{4} : 2$



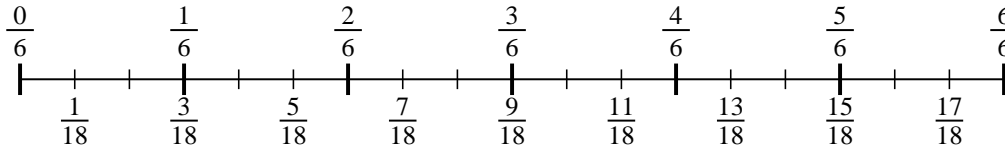
4) $\frac{2}{5} : 2$



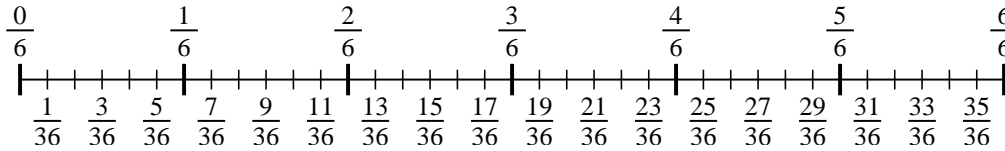
5) $\frac{6}{7} : 4$



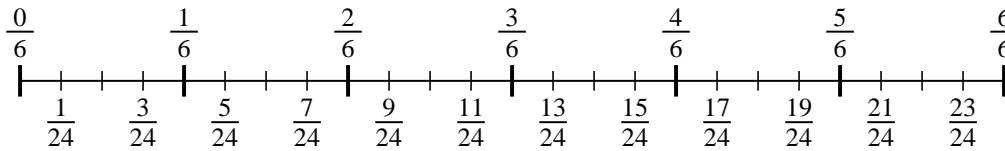
6) $\frac{4}{6} : 3$



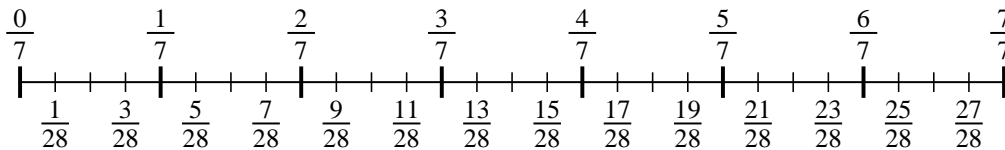
7) $\frac{4}{6} : 6$



8) $\frac{3}{6} : 4$



9) $\frac{4}{7} : 4$



1. _____
2. _____
3. _____
4. _____
5. _____
6. _____
7. _____
8. _____
9. _____