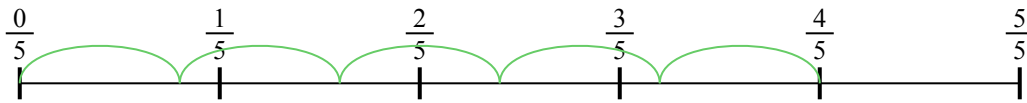





Usa la linea numerata per risolvere ogni problema. Il primo è un esempio.

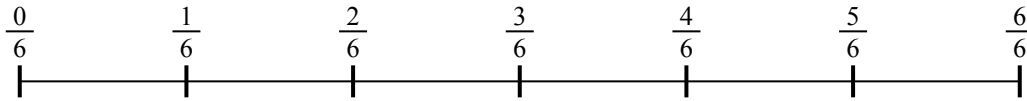
1)  $\frac{4}{5} : 5$



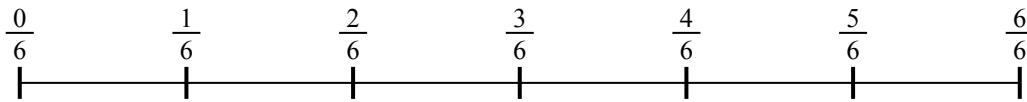
2)  $\frac{2}{5} : 5$



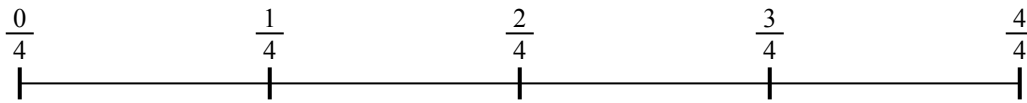
3)  $\frac{5}{6} : 4$




4)  $\frac{4}{6} : 4$



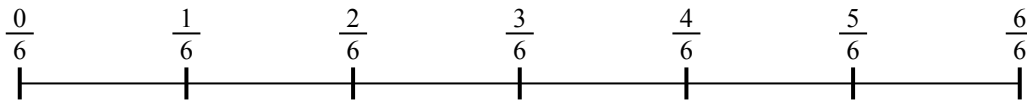
5)  $\frac{3}{4} : 4$



6)  $\frac{2}{3} : 2$




7)  $\frac{3}{6} : 3$



8)  $\frac{2}{5} : 3$



9)  $\frac{6}{7} : 2$



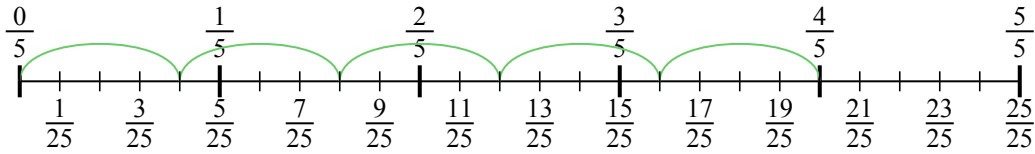
**Risposte**

1. \_\_\_\_\_
2. \_\_\_\_\_
3. \_\_\_\_\_
4. \_\_\_\_\_
5. \_\_\_\_\_
6. \_\_\_\_\_
7. \_\_\_\_\_
8. \_\_\_\_\_
9. \_\_\_\_\_

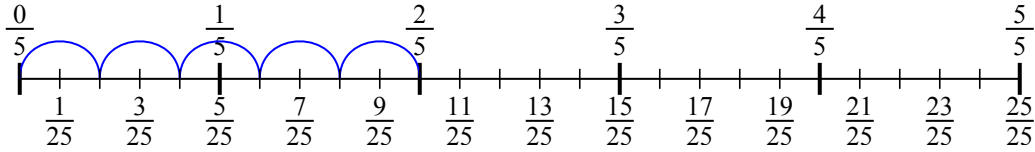


Usa la linea numerata per risolvere ogni problema. Il primo è un esempio.

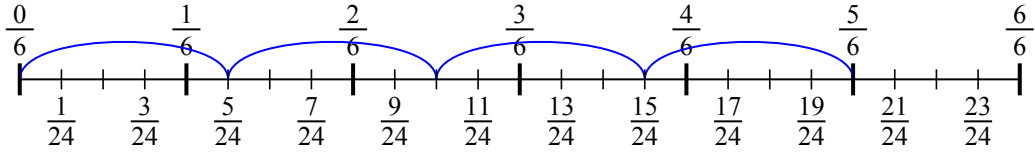
1)  $\frac{4}{5} : 5$



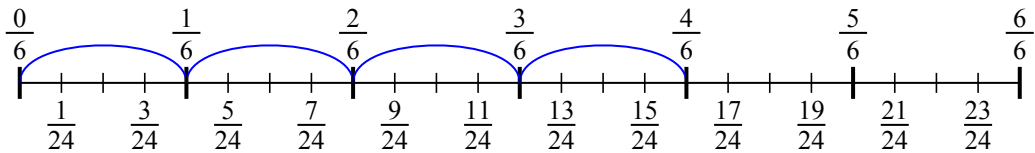
2)  $\frac{2}{5} : 5$



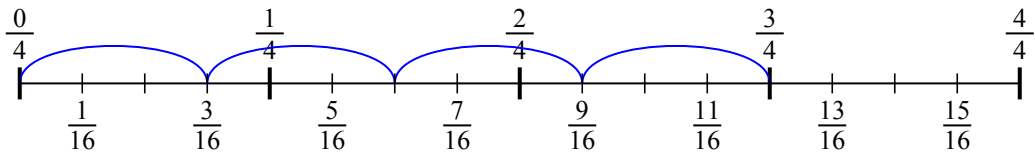
3)  $\frac{5}{6} : 4$



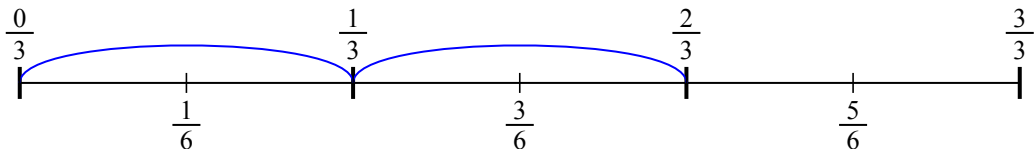
4)  $\frac{4}{6} : 4$



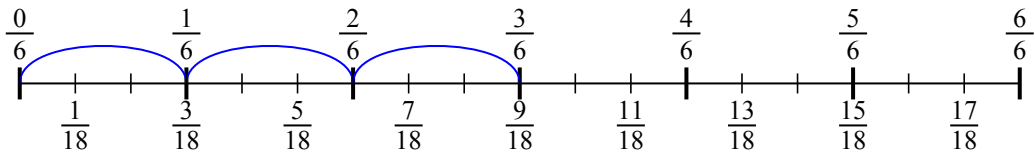
5)  $\frac{3}{4} : 4$



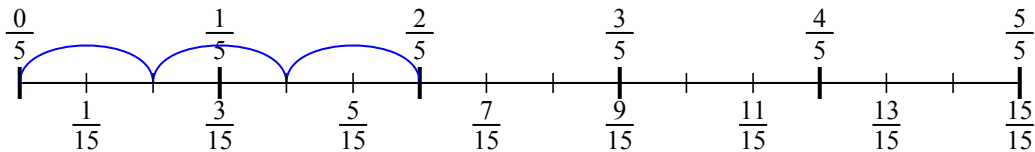
6)  $\frac{2}{3} : 2$



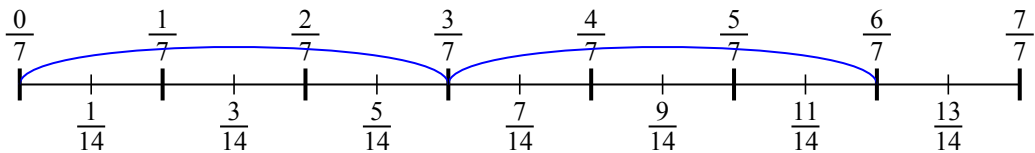
7)  $\frac{3}{6} : 3$



8)  $\frac{2}{5} : 3$



9)  $\frac{6}{7} : 2$

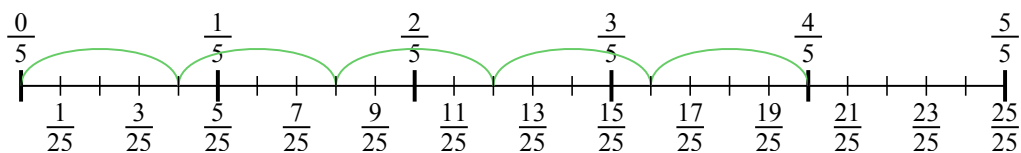


**Risposte**


1.  $\frac{4}{25}$
2.  $\frac{2}{25}$
3.  $\frac{5}{24}$
4.  $\frac{4}{24}$
5.  $\frac{3}{16}$
6.  $\frac{2}{6}$
7.  $\frac{3}{18}$
8.  $\frac{2}{15}$
9.  $\frac{6}{14}$



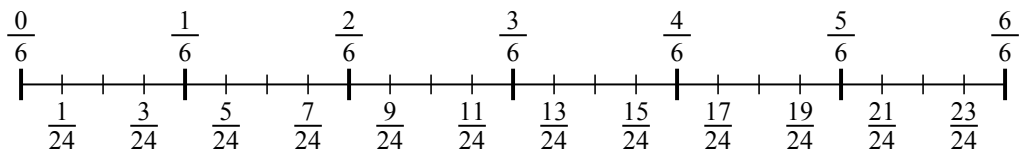
1)  $\frac{4}{5} : 5$



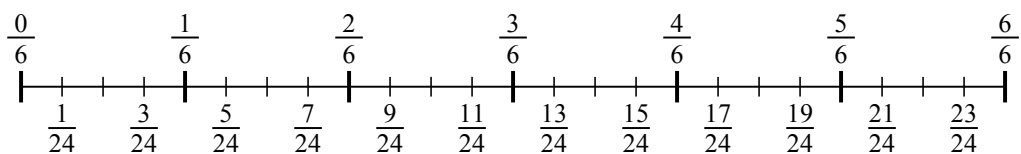
2)  $\frac{2}{5} : 5$



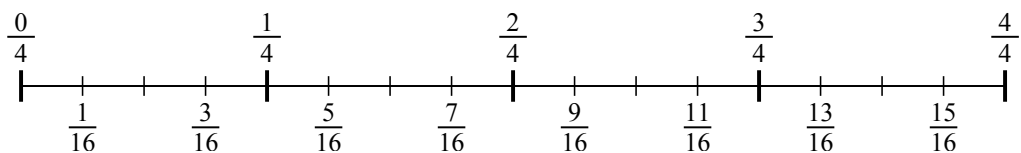
3)  $\frac{5}{6} : 4$



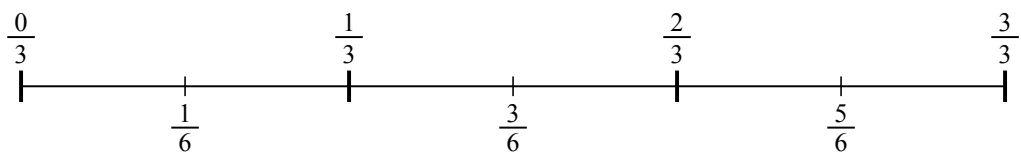
4)  $\frac{4}{6} : 4$



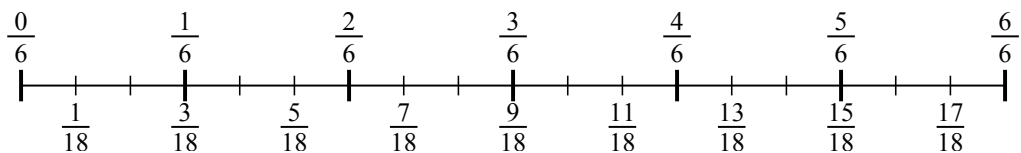
5)  $\frac{3}{4} : 4$



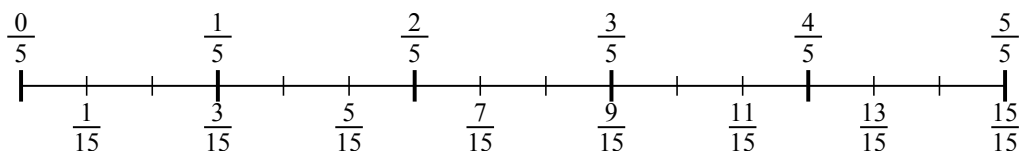
6)  $\frac{2}{3} : 2$



7)  $\frac{3}{6} : 3$



8)  $\frac{2}{5} : 3$



9)  $\frac{6}{7} : 2$

