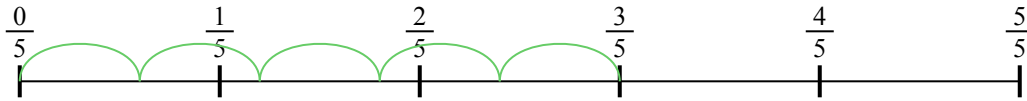





Usa la linea numerata per risolvere ogni problema. Il primo è un esempio.

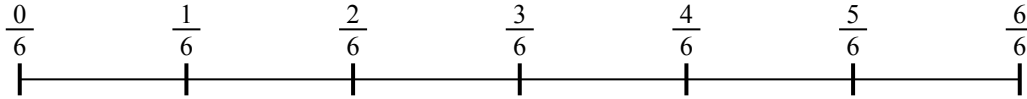
1)  $\frac{3}{5} : 5$



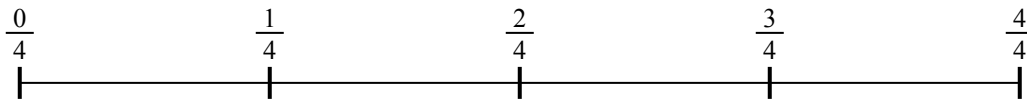
2)  $\frac{2}{3} : 5$



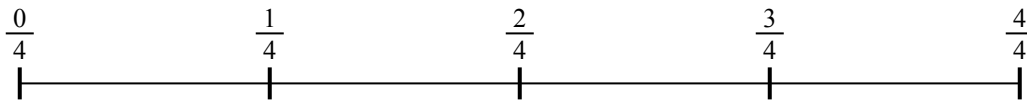
3)  $\frac{2}{6} : 3$



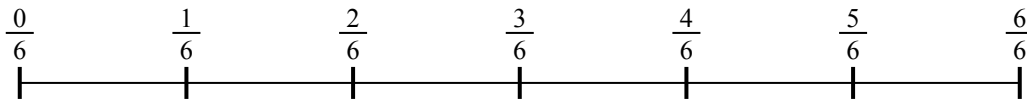
4)  $\frac{2}{4} : 2$



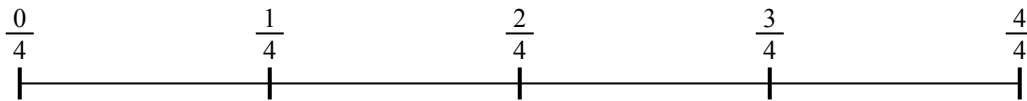
5)  $\frac{3}{4} : 2$



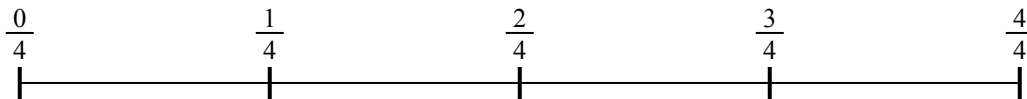
6)  $\frac{5}{6} : 3$



7)  $\frac{3}{4} : 3$



8)  $\frac{2}{4} : 4$



9)  $\frac{4}{5} : 6$



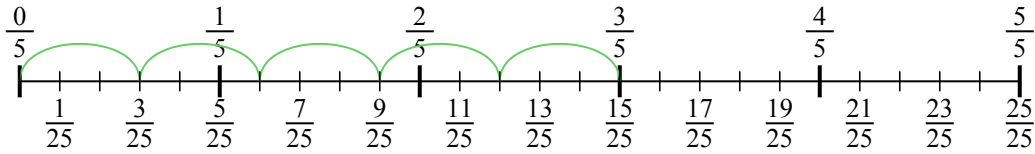
**Risposte**

- 1. \_\_\_\_\_
- 2. \_\_\_\_\_
- 3. \_\_\_\_\_
- 4. \_\_\_\_\_
- 5. \_\_\_\_\_
- 6. \_\_\_\_\_
- 7. \_\_\_\_\_
- 8. \_\_\_\_\_
- 9. \_\_\_\_\_

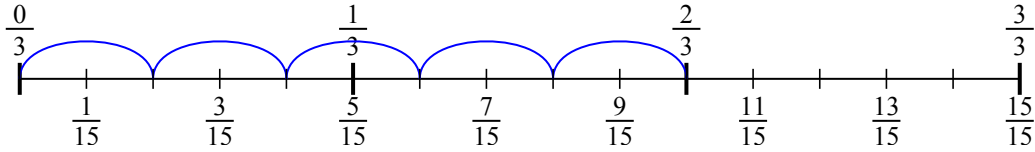


Usa la linea numerata per risolvere ogni problema. Il primo è un esempio.

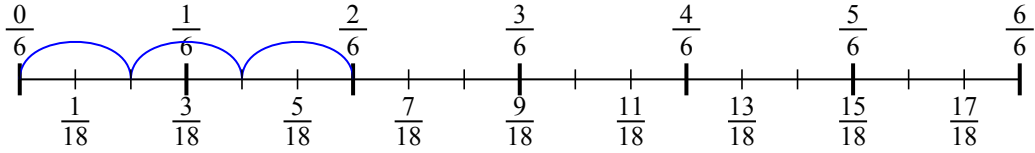
1)  $\frac{3}{5} : 5$



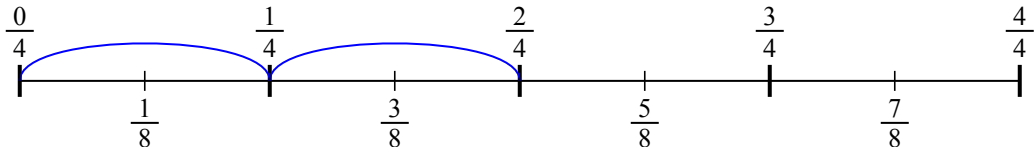
2)  $\frac{2}{3} : 5$



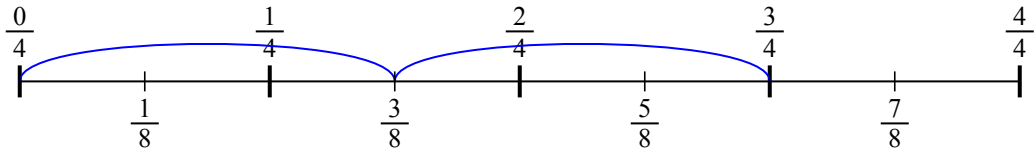
3)  $\frac{2}{6} : 3$



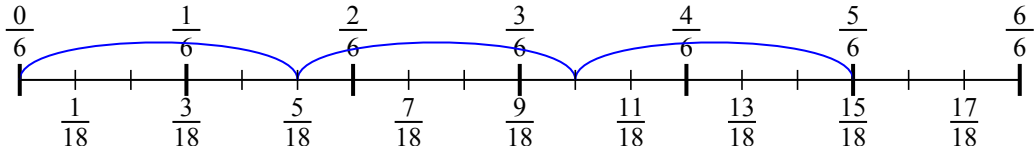
4)  $\frac{2}{4} : 2$



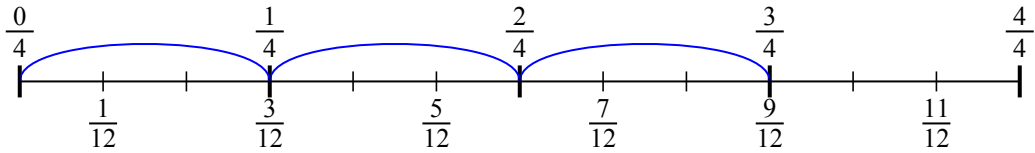
5)  $\frac{3}{4} : 2$



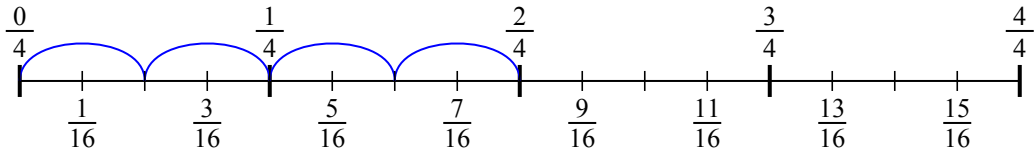
6)  $\frac{5}{6} : 3$



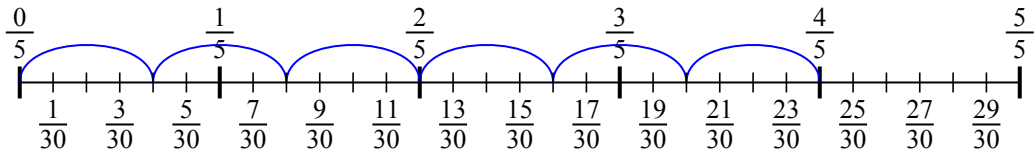
7)  $\frac{3}{4} : 3$



8)  $\frac{2}{4} : 4$



9)  $\frac{4}{5} : 6$

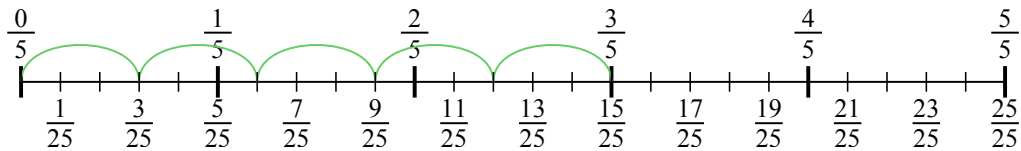


**Risposte**

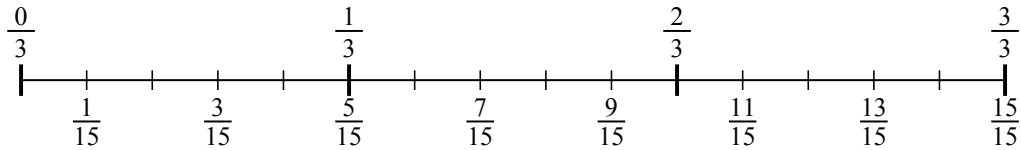
1.  $\frac{3}{25}$
2.  $\frac{2}{15}$
3.  $\frac{2}{18}$
4.  $\frac{2}{8}$
5.  $\frac{3}{8}$
6.  $\frac{5}{18}$
7.  $\frac{3}{12}$
8.  $\frac{2}{16}$
9.  $\frac{4}{30}$



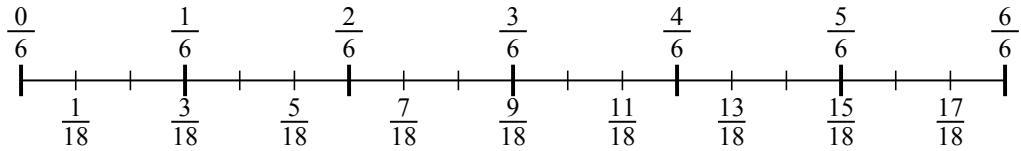
1)  $\frac{3}{5} : 5$



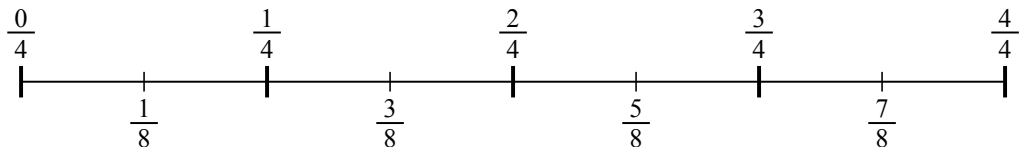
2)  $\frac{2}{3} : 5$



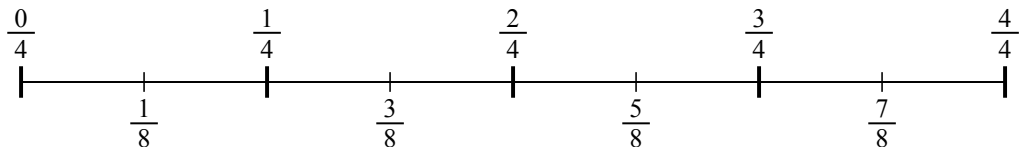
3)  $\frac{2}{6} : 3$



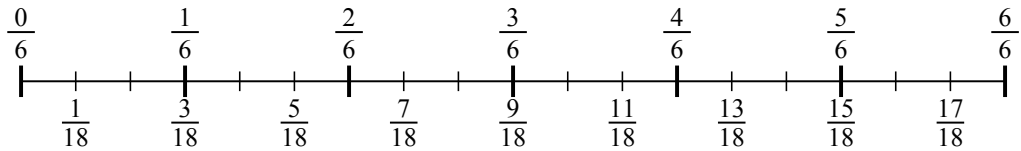
4)  $\frac{2}{4} : 2$



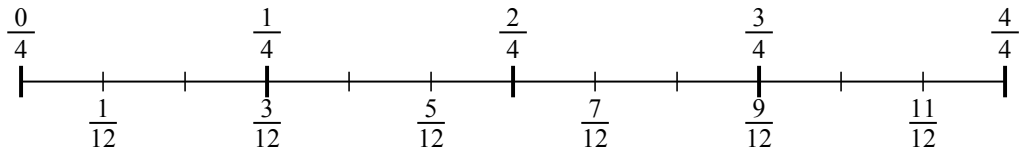
5)  $\frac{3}{4} : 2$



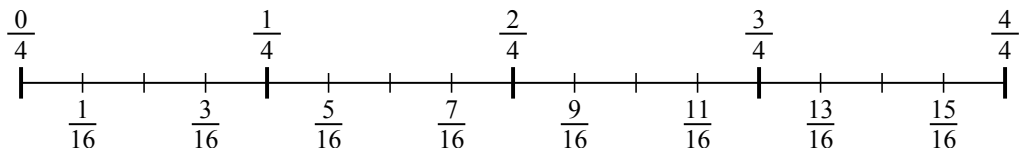
6)  $\frac{5}{6} : 3$



7)  $\frac{3}{4} : 3$



8)  $\frac{2}{4} : 4$



9)  $\frac{4}{5} : 6$

