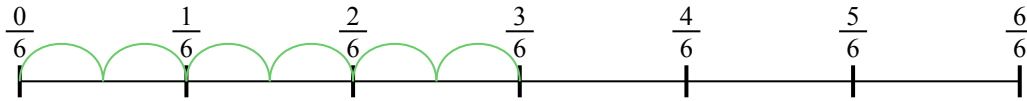


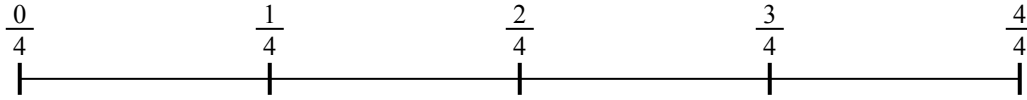


Usa la linea numerata per risolvere ogni problema. Il primo è un esempio.


1) $\frac{3}{6} : 6$



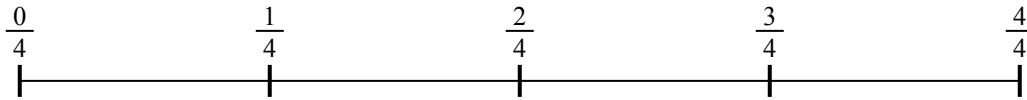
2) $\frac{3}{4} : 3$




3) $\frac{2}{3} : 5$



4) $\frac{3}{4} : 5$



5) $\frac{6}{7} : 6$



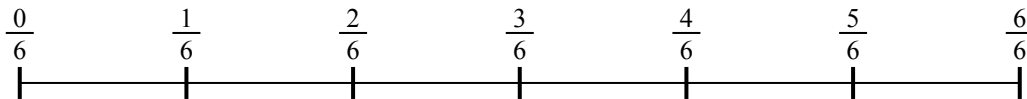
6) $\frac{2}{3} : 6$



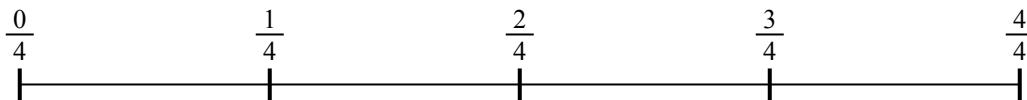
7) $\frac{2}{3} : 3$



8) $\frac{4}{6} : 5$



9) $\frac{3}{4} : 4$



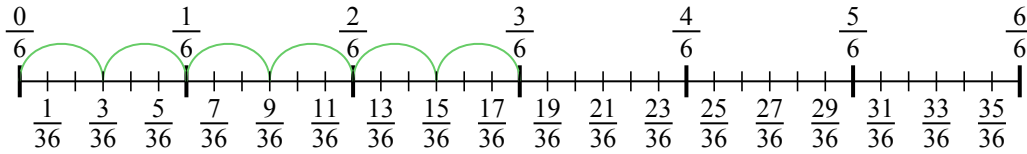
Risposte

1. _____
2. _____
3. _____
4. _____
5. _____
6. _____
7. _____
8. _____
9. _____

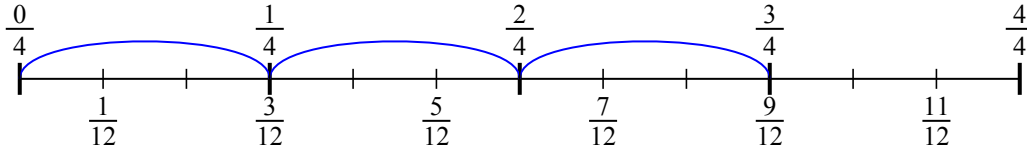


Usa la linea numerata per risolvere ogni problema. Il primo è un esempio.

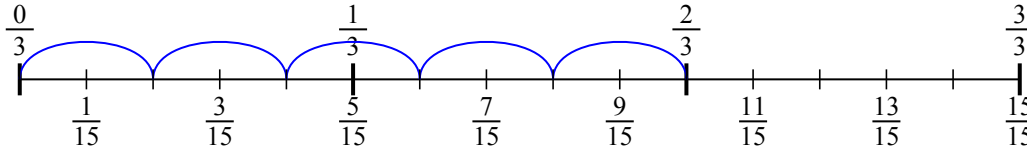
1) $\frac{3}{6} : 6$



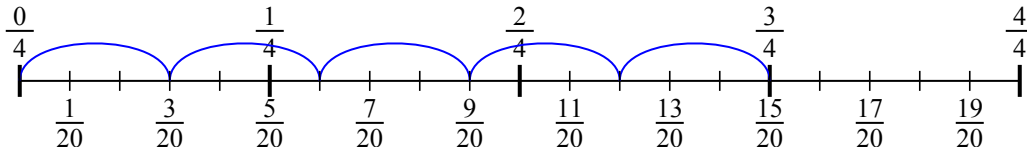
2) $\frac{3}{4} : 3$



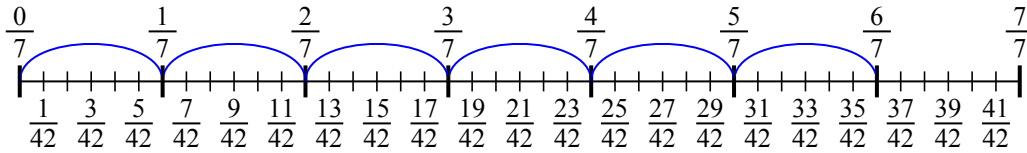
3) $\frac{2}{3} : 5$



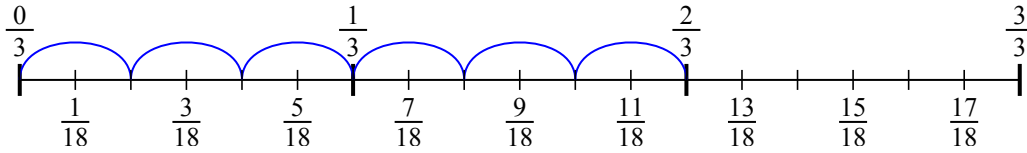
4) $\frac{3}{4} : 5$



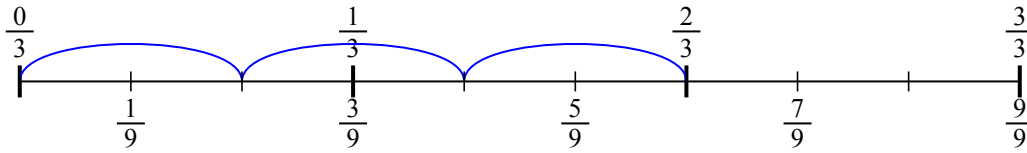
5) $\frac{6}{7} : 6$



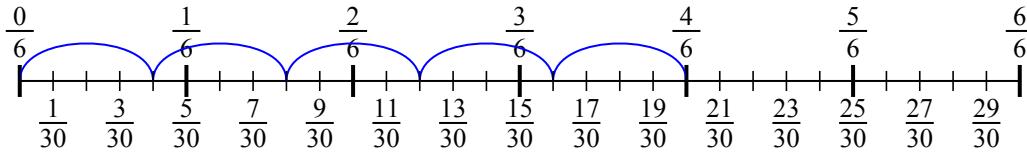
6) $\frac{2}{3} : 6$



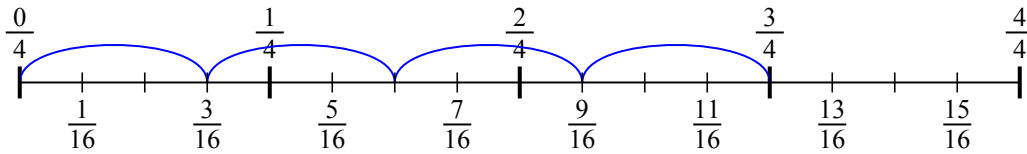
7) $\frac{2}{3} : 3$



8) $\frac{4}{6} : 5$



9) $\frac{3}{4} : 4$

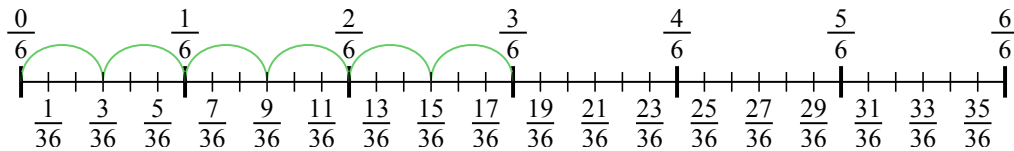


Risposte

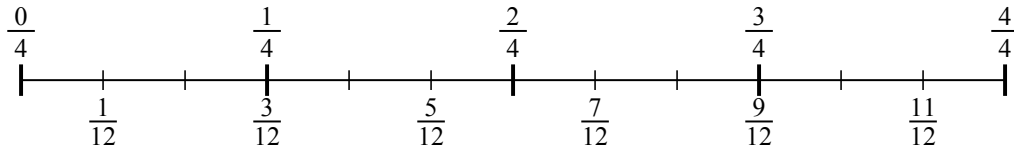
1. $\frac{3}{36}$
2. $\frac{3}{12}$
3. $\frac{2}{15}$
4. $\frac{3}{20}$
5. $\frac{6}{42}$
6. $\frac{2}{18}$
7. $\frac{2}{9}$
8. $\frac{4}{30}$
9. $\frac{3}{16}$



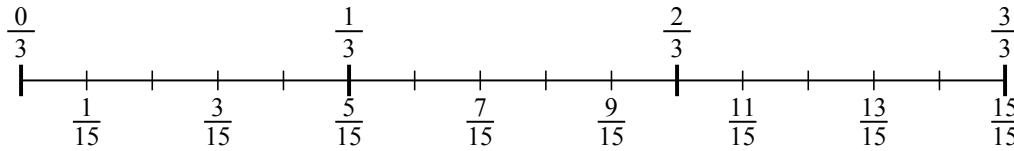
1) $\frac{3}{6} : 6$



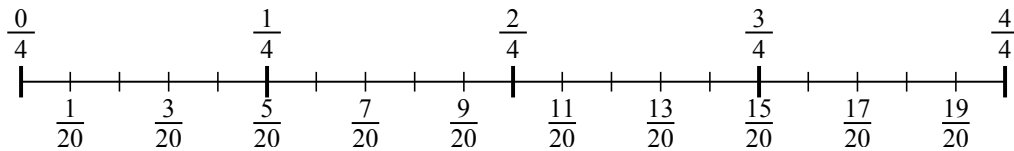
2) $\frac{3}{4} : 3$



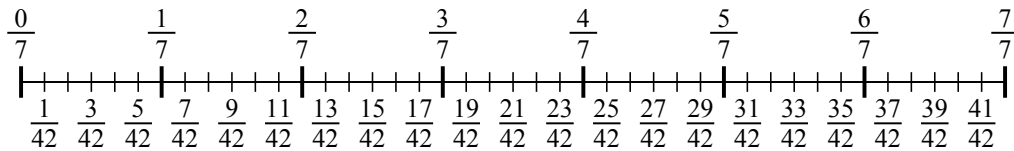
3) $\frac{2}{3} : 5$



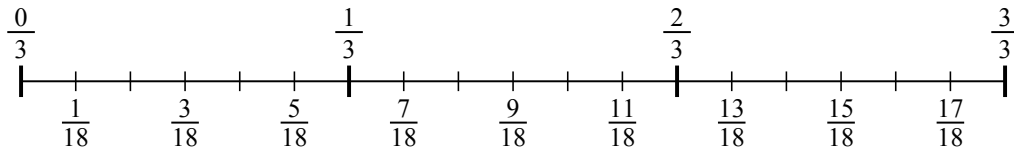
4) $\frac{3}{4} : 5$



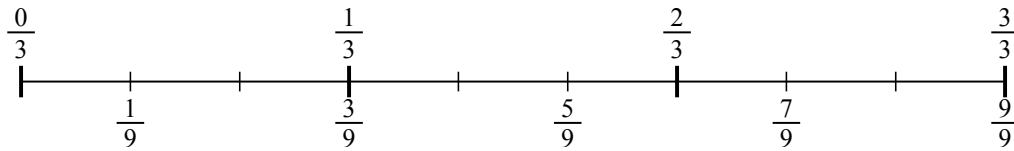
5) $\frac{6}{7} : 6$



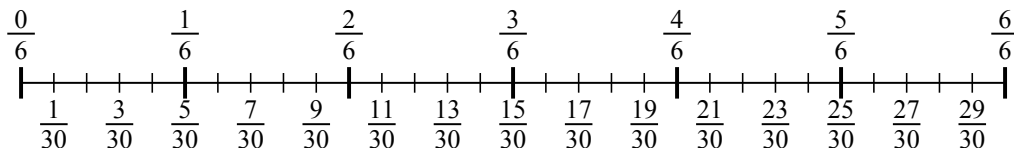
6) $\frac{2}{3} : 6$



7) $\frac{2}{3} : 3$



8) $\frac{4}{6} : 5$



9) $\frac{3}{4} : 4$

