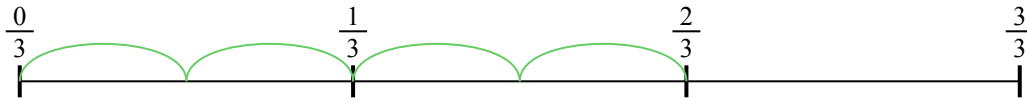





Usa la linea numerata per risolvere ogni problema. Il primo è un esempio.

1) $\frac{2}{3} : 4$




2) $\frac{5}{7} : 6$



3) $\frac{2}{3} : 6$



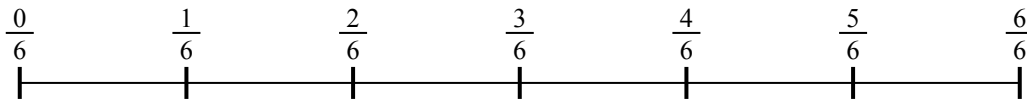
4) $\frac{4}{5} : 4$



5) $\frac{4}{7} : 2$




6) $\frac{4}{6} : 5$



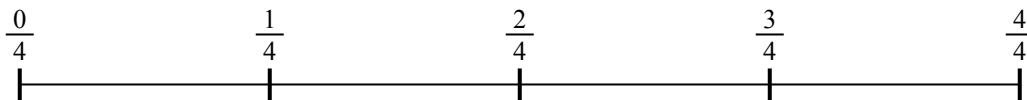
7) $\frac{2}{7} : 3$



8) $\frac{2}{5} : 2$



9) $\frac{3}{4} : 5$

**Risposte**

1. _____

2. _____

3. _____

4. _____

5. _____

6. _____

7. _____

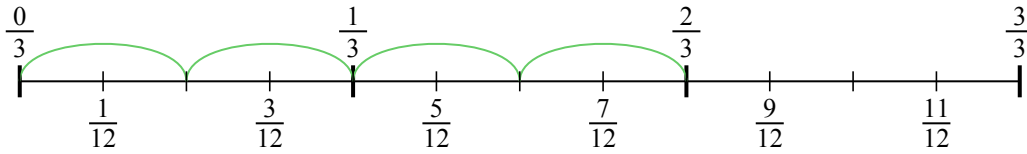
8. _____

9. _____

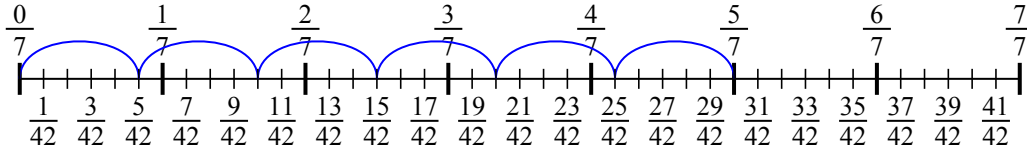


Usa la linea numerata per risolvere ogni problema. Il primo è un esempio.

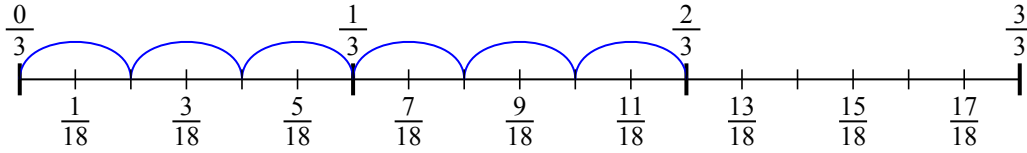
1) $\frac{2}{3} : 4$



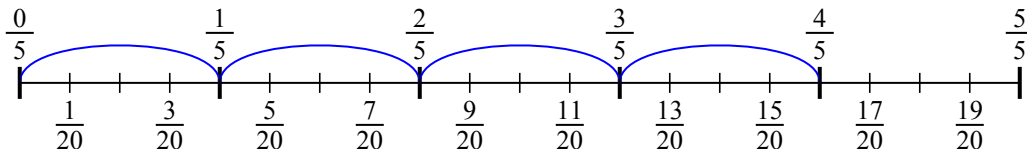
2) $\frac{5}{7} : 6$



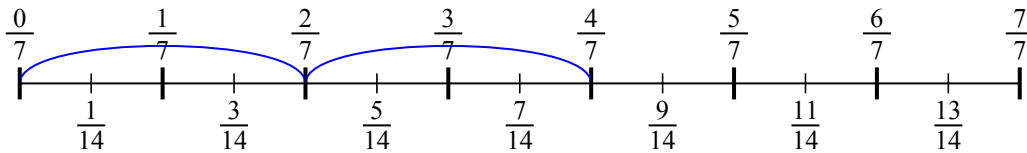
3) $\frac{2}{3} : 6$



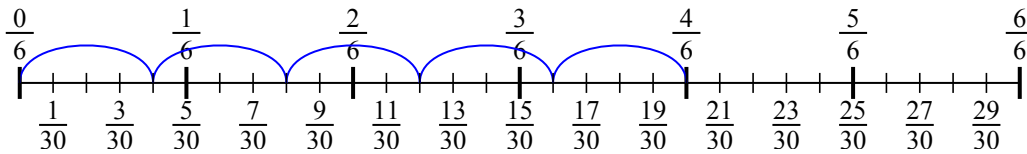
4) $\frac{4}{5} : 4$



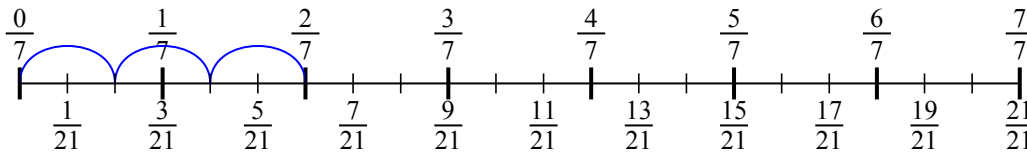
5) $\frac{4}{7} : 2$



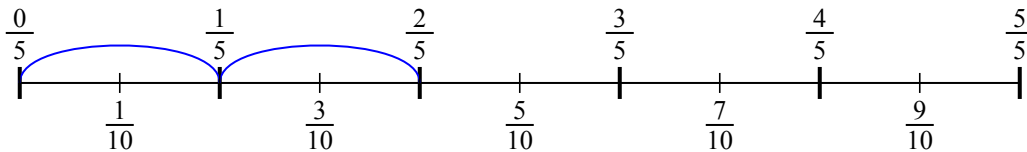
6) $\frac{4}{6} : 5$



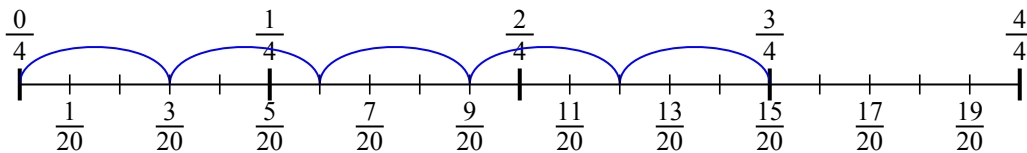
7) $\frac{2}{7} : 3$



8) $\frac{2}{5} : 2$



9) $\frac{3}{4} : 5$

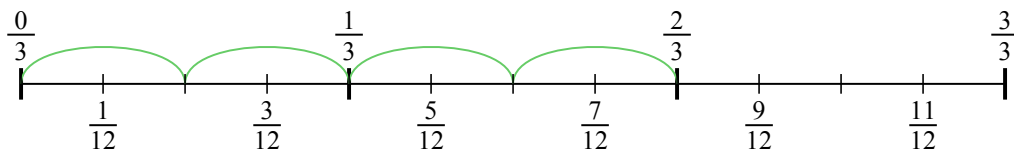


Risposte

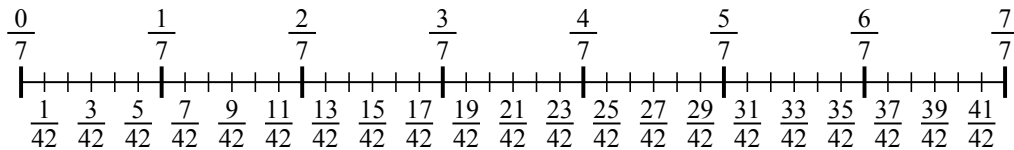
1. $\frac{2}{12}$
2. $\frac{5}{42}$
3. $\frac{2}{18}$
4. $\frac{4}{20}$
5. $\frac{4}{14}$
6. $\frac{4}{30}$
7. $\frac{2}{21}$
8. $\frac{2}{10}$
9. $\frac{3}{20}$



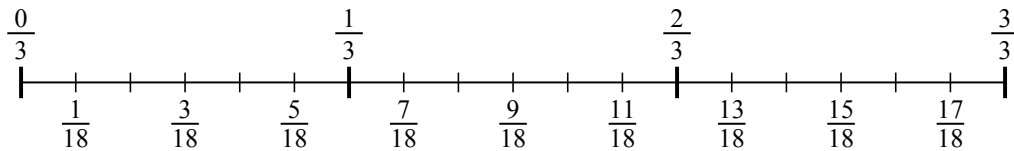
1) $\frac{2}{3} : 4$



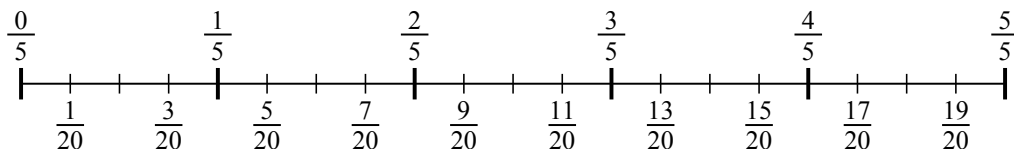
2) $\frac{5}{7} : 6$



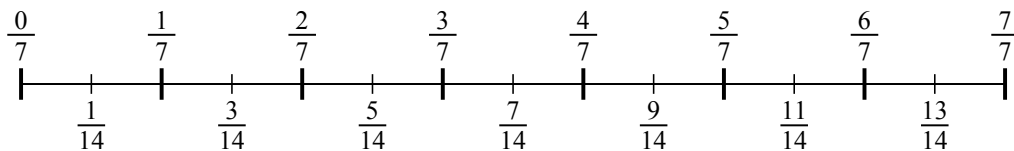
3) $\frac{2}{3} : 6$



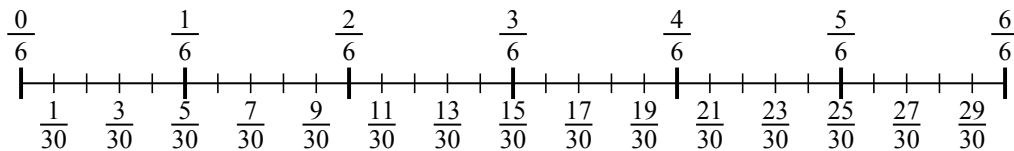
4) $\frac{4}{5} : 4$



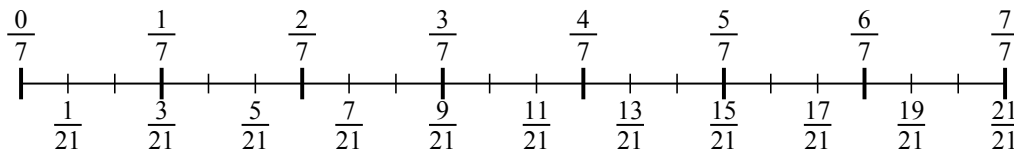
5) $\frac{4}{7} : 2$



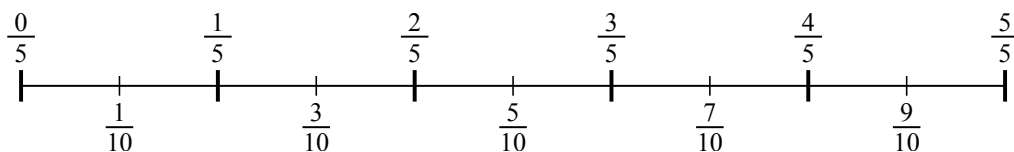
6) $\frac{4}{6} : 5$



7) $\frac{2}{7} : 3$



8) $\frac{2}{5} : 2$



9) $\frac{3}{4} : 5$

