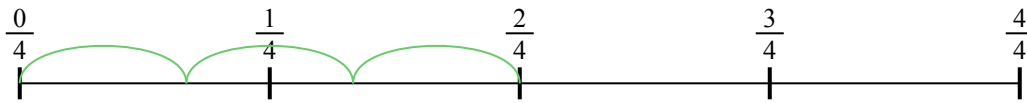




Usa la linea numerata per risolvere ogni problema. Il primo è un esempio.


**Risposte**

1)  $\frac{2}{4} : 3$



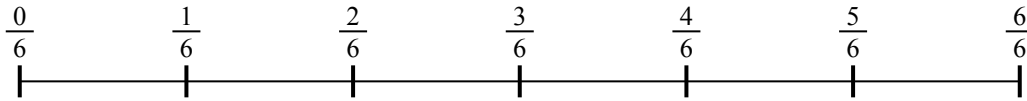
1. \_\_\_\_\_

2)  $\frac{4}{5} : 4$



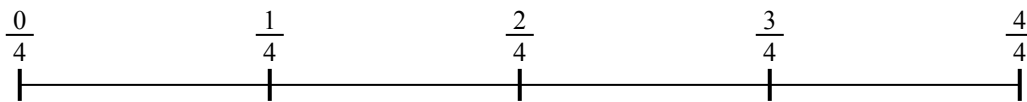
2. \_\_\_\_\_

3)  $\frac{2}{6} : 2$



3. \_\_\_\_\_

4)  $\frac{2}{4} : 5$



4. \_\_\_\_\_

5)  $\frac{4}{5} : 6$



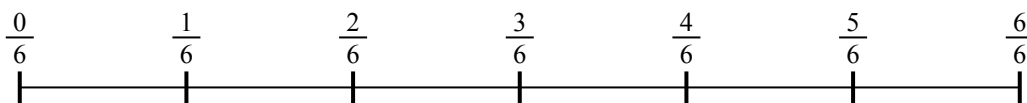
5. \_\_\_\_\_

6)  $\frac{3}{5} : 6$



6. \_\_\_\_\_

7)  $\frac{2}{6} : 4$



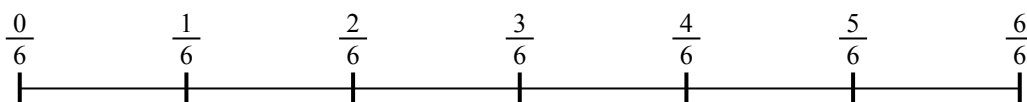
7. \_\_\_\_\_

8)  $\frac{2}{3} : 6$



8. \_\_\_\_\_

9)  $\frac{4}{6} : 5$

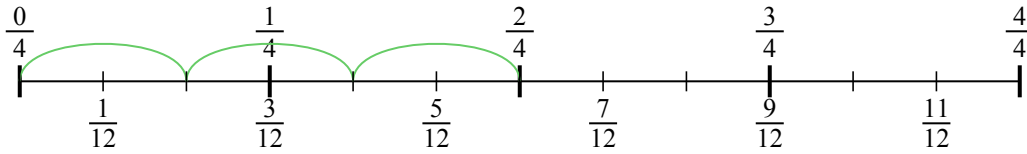


9. \_\_\_\_\_

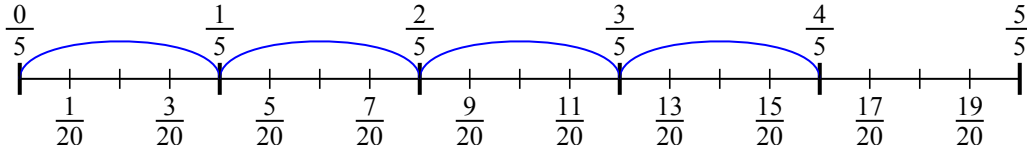


Usa la linea numerata per risolvere ogni problema. Il primo è un esempio.

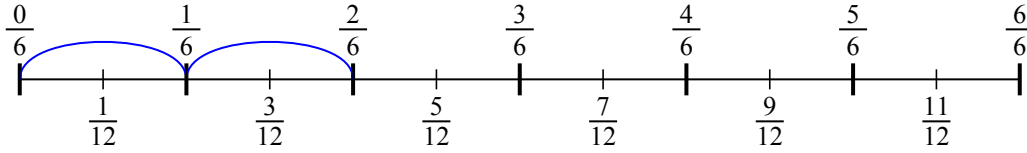
1)  $\frac{2}{4} : 3$



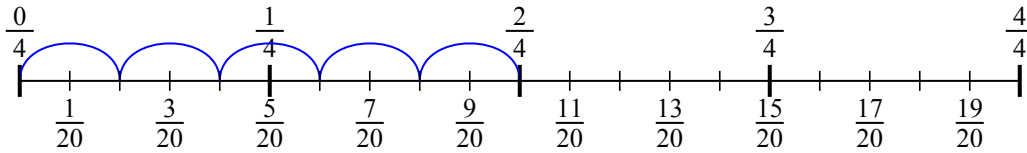
2)  $\frac{4}{5} : 4$



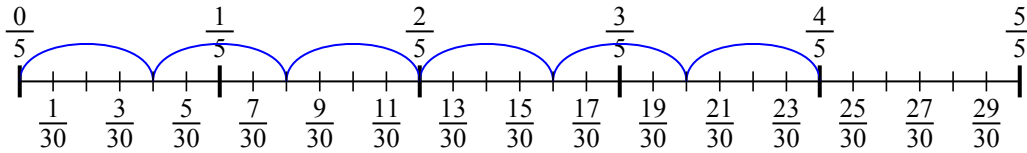
3)  $\frac{2}{6} : 2$



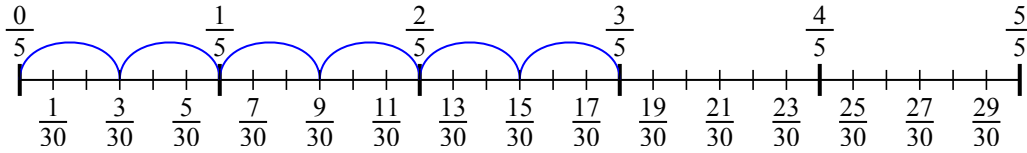
4)  $\frac{2}{4} : 5$



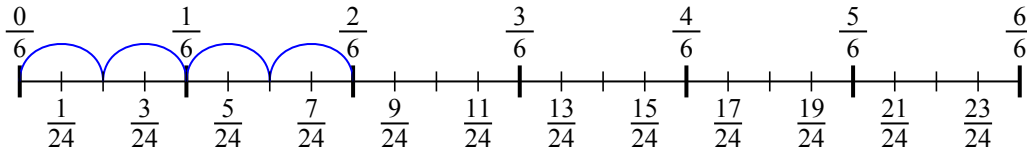
5)  $\frac{4}{5} : 6$



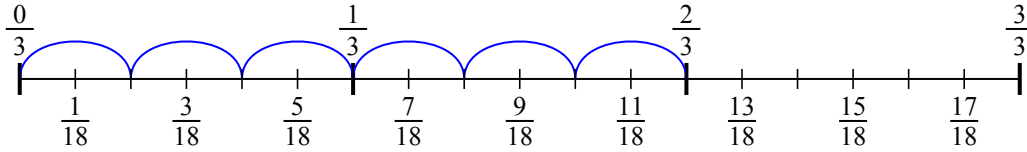
6)  $\frac{3}{5} : 6$



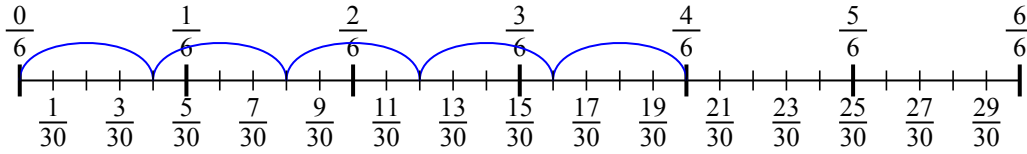
7)  $\frac{2}{6} : 4$



8)  $\frac{2}{3} : 6$



9)  $\frac{4}{6} : 5$

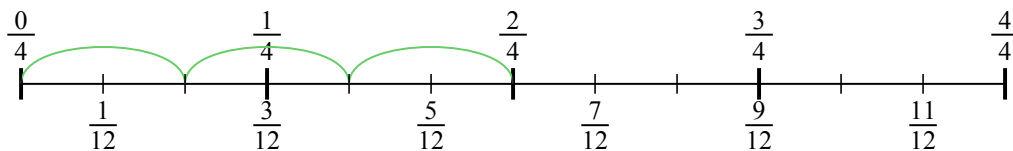


**Risposte**

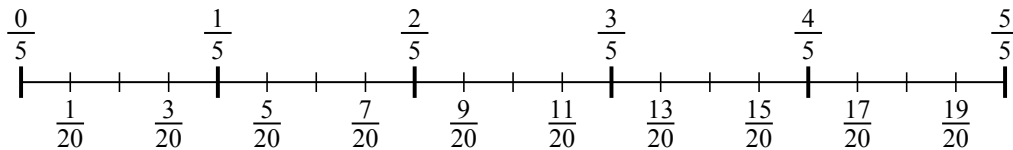
1.  $\frac{2}{12}$
2.  $\frac{4}{20}$
3.  $\frac{2}{12}$
4.  $\frac{2}{20}$
5.  $\frac{4}{30}$
6.  $\frac{3}{30}$
7.  $\frac{2}{24}$
8.  $\frac{2}{18}$
9.  $\frac{4}{30}$



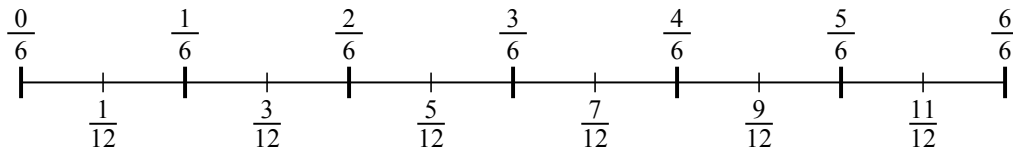
1)  $\frac{2}{4} : 3$



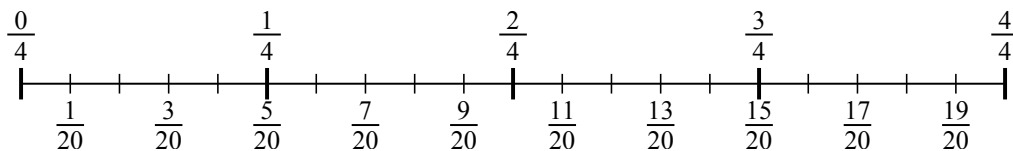
2)  $\frac{4}{5} : 4$



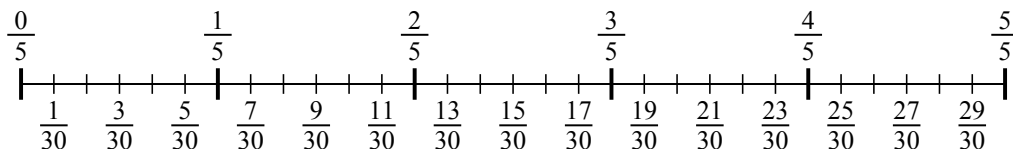
3)  $\frac{2}{6} : 2$



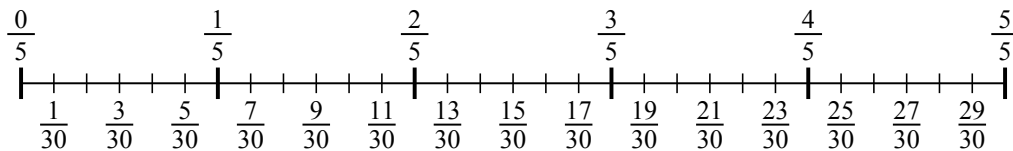
4)  $\frac{2}{4} : 5$



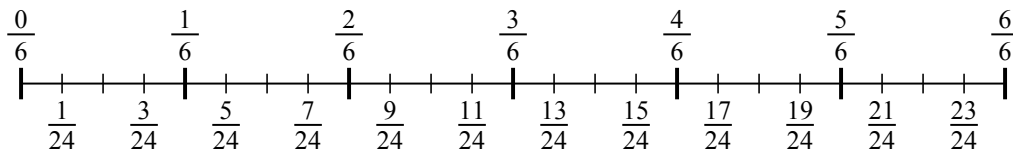
5)  $\frac{4}{5} : 6$



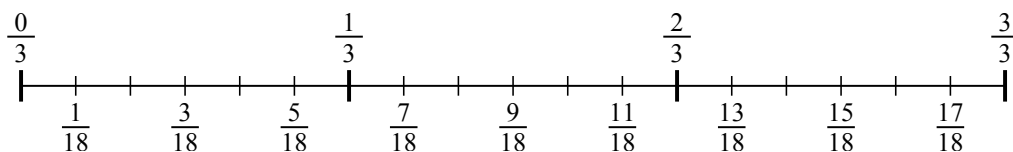
6)  $\frac{3}{5} : 6$



7)  $\frac{2}{6} : 4$



8)  $\frac{2}{3} : 6$



9)  $\frac{4}{6} : 5$

