




Usa la linea numerata per risolvere ogni problema. Il primo è un esempio.


Risposte

1) $\frac{2}{5} : 3$



1. _____

2) $\frac{2}{5} : 4$




2. _____

3) $\frac{2}{7} : 5$



3. _____

4) $\frac{3}{5} : 6$



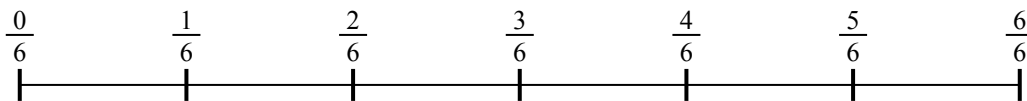
4. _____

5) $\frac{4}{5} : 3$




5. _____

6) $\frac{5}{6} : 4$



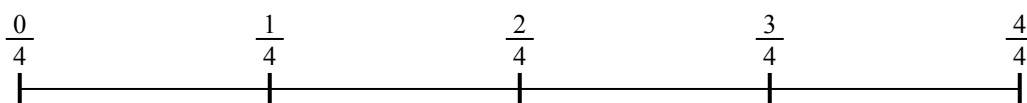
6. _____

7) $\frac{5}{7} : 6$



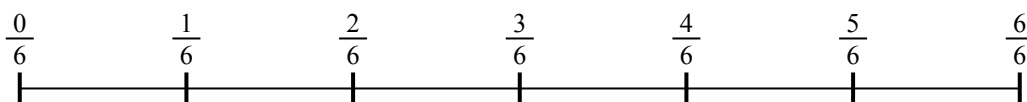
7. _____

8) $\frac{3}{4} : 4$



8. _____

9) $\frac{4}{6} : 5$

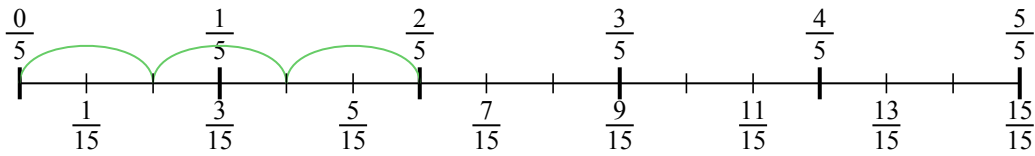


9. _____

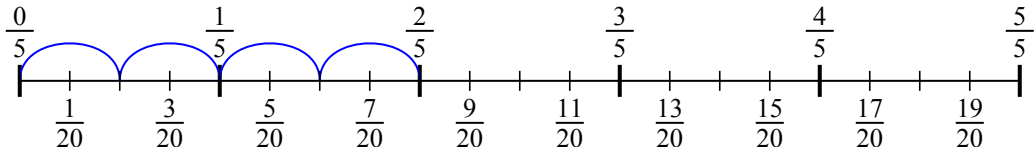


Usa la linea numerata per risolvere ogni problema. Il primo è un esempio.

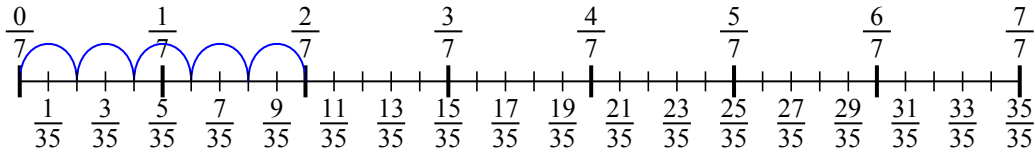
1) $\frac{2}{5} : 3$



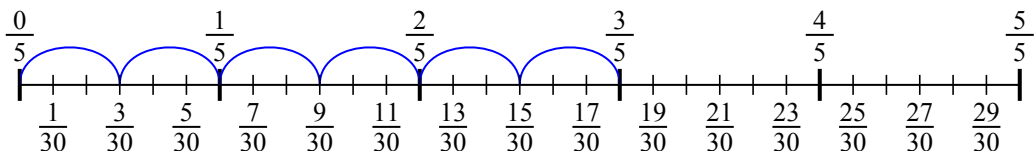
2) $\frac{2}{5} : 4$



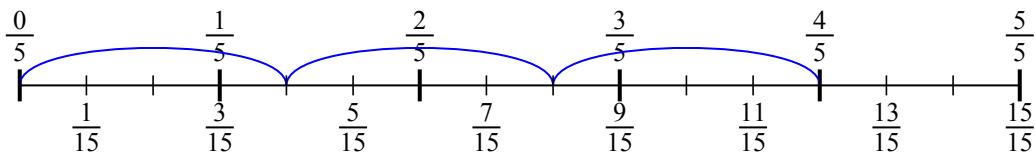
3) $\frac{2}{7} : 5$



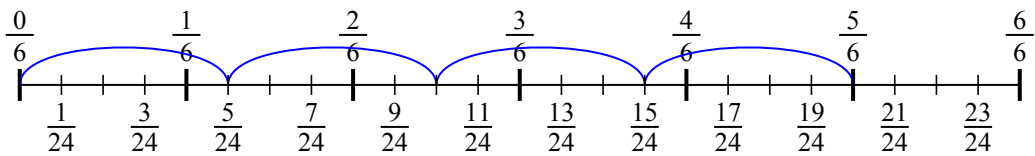
4) $\frac{3}{5} : 6$



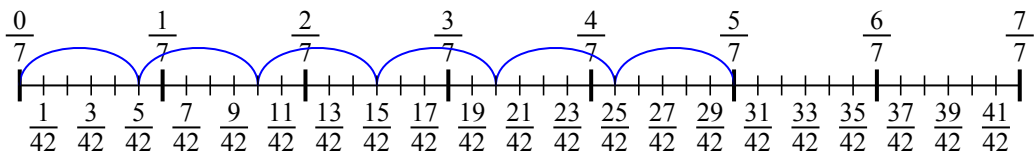
5) $\frac{4}{5} : 3$



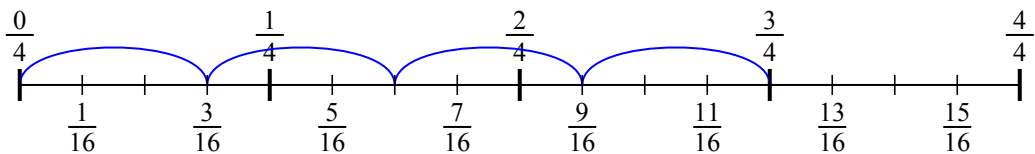
6) $\frac{5}{6} : 4$



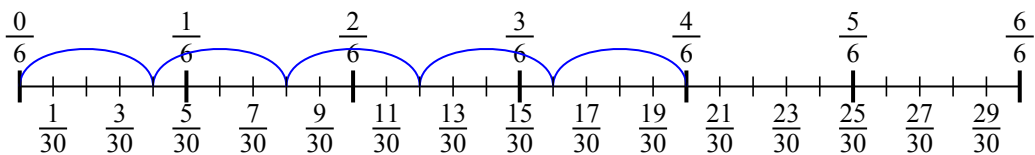
7) $\frac{5}{7} : 6$



8) $\frac{3}{4} : 4$



9) $\frac{4}{6} : 5$

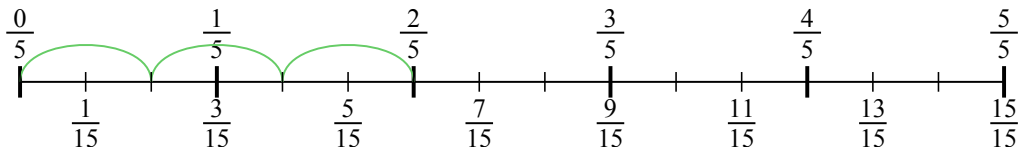


Risposte

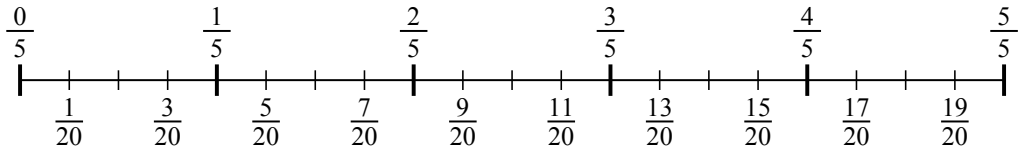
1. $\frac{2}{15}$
2. $\frac{2}{20}$
3. $\frac{2}{35}$
4. $\frac{3}{30}$
5. $\frac{4}{15}$
6. $\frac{5}{24}$
7. $\frac{5}{42}$
8. $\frac{3}{16}$
9. $\frac{4}{30}$



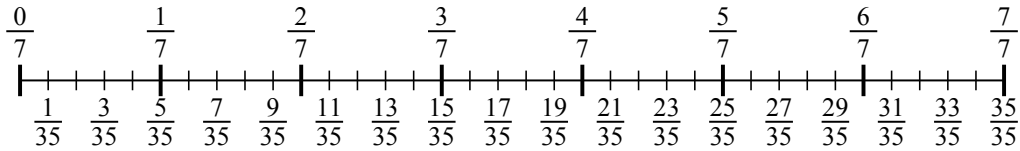
1) $\frac{2}{5} : 3$



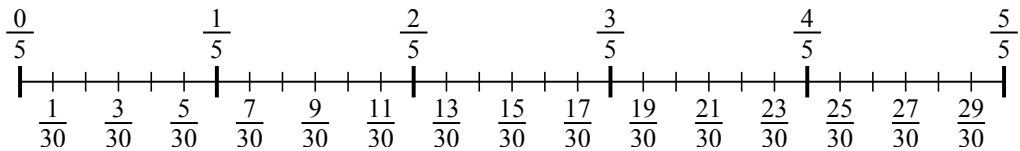
2) $\frac{2}{5} : 4$



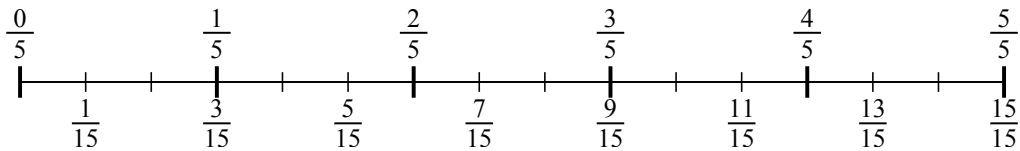
3) $\frac{2}{7} : 5$



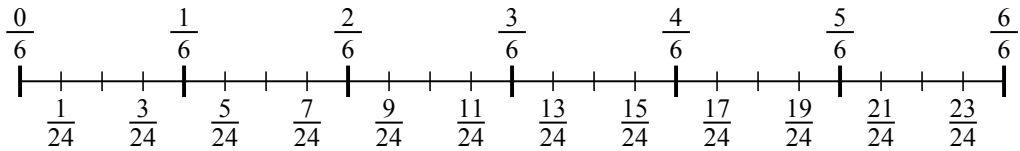
4) $\frac{3}{5} : 6$



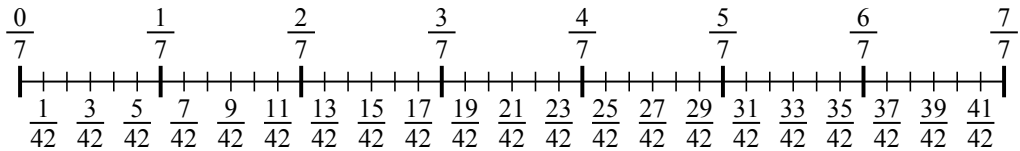
5) $\frac{4}{5} : 3$



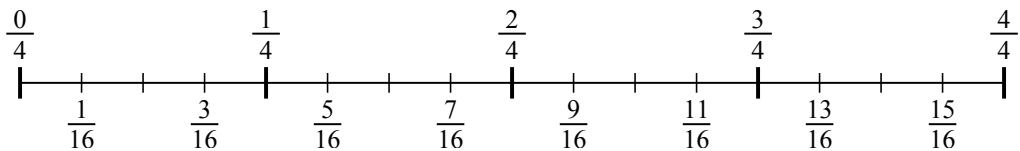
6) $\frac{5}{6} : 4$



7) $\frac{5}{7} : 6$



8) $\frac{3}{4} : 4$



9) $\frac{4}{6} : 5$

