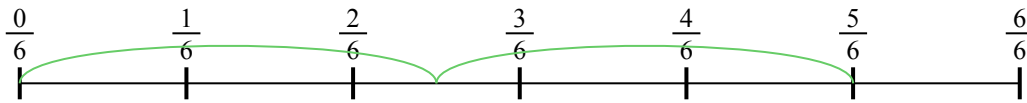




Usa la linea numerata per risolvere ogni problema. Il primo è un esempio.

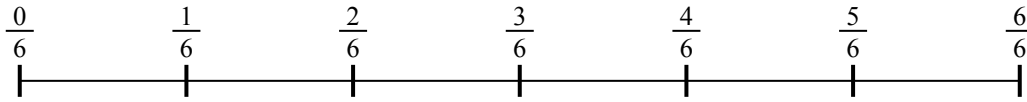
Risposte

1) $\frac{5}{6} : 2$



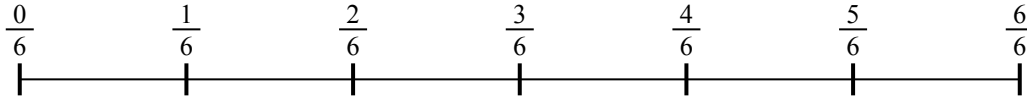
1. _____

2) $\frac{3}{6} : 2$



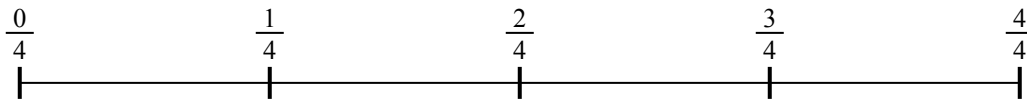
2. _____

3) $\frac{4}{6} : 5$



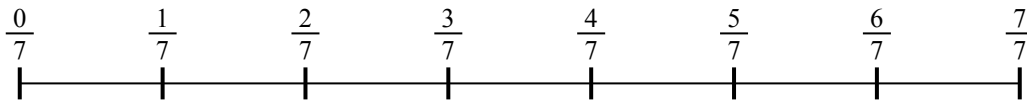
3. _____

4) $\frac{2}{4} : 6$




4. _____

5) $\frac{4}{7} : 4$



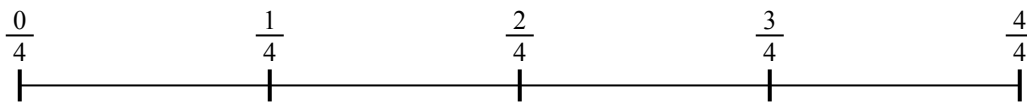
5. _____

6) $\frac{4}{5} : 3$



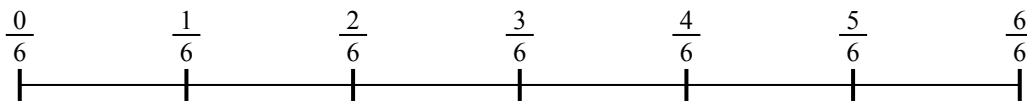
6. _____

7) $\frac{3}{4} : 5$



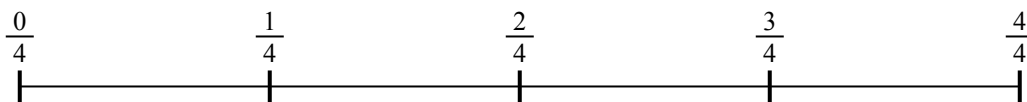
7. _____

8) $\frac{5}{6} : 6$



8. _____

9) $\frac{3}{4} : 4$

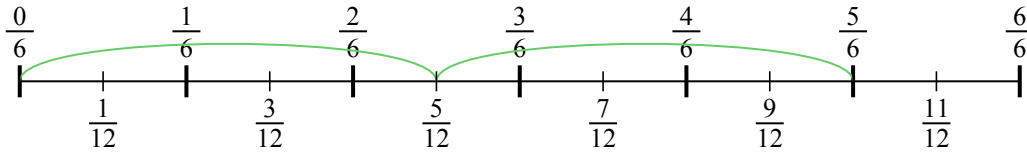


9. _____

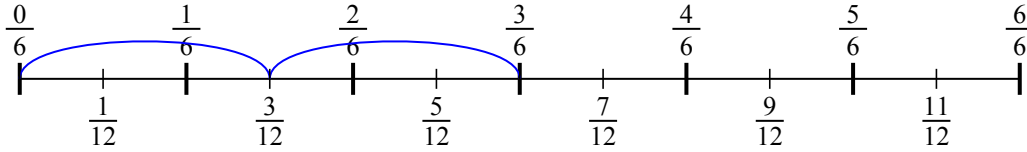


Usa la linea numerata per risolvere ogni problema. Il primo è un esempio.

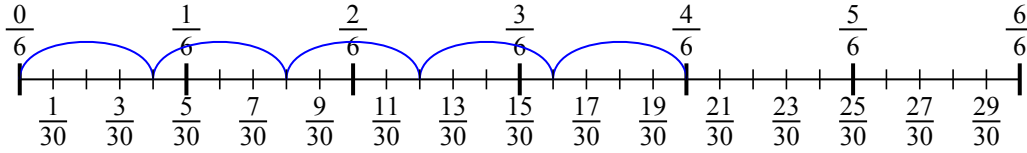
1) $\frac{5}{6} : 2$



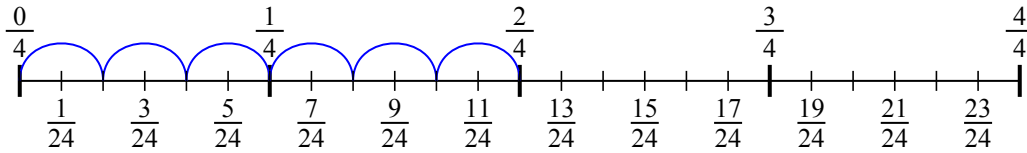
2) $\frac{3}{6} : 2$



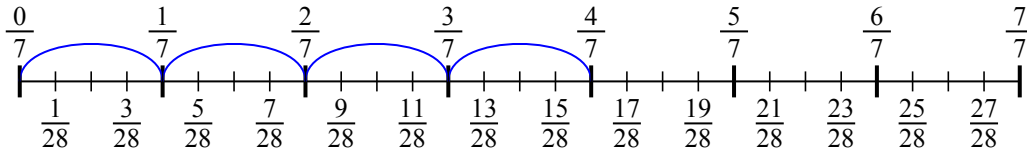
3) $\frac{4}{6} : 5$



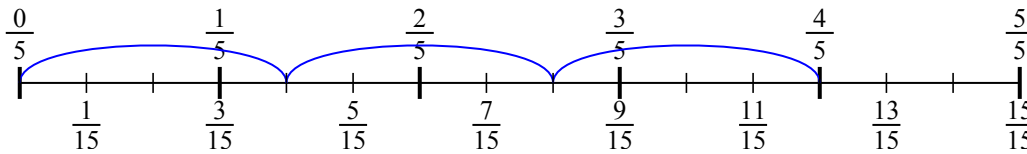
4) $\frac{2}{4} : 6$



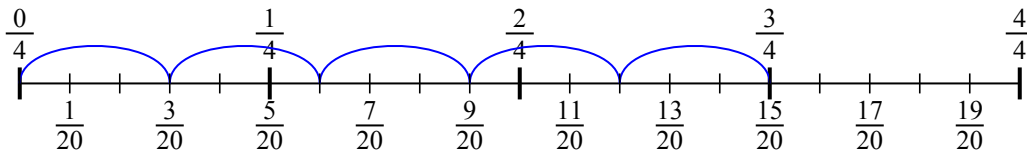
5) $\frac{4}{7} : 4$



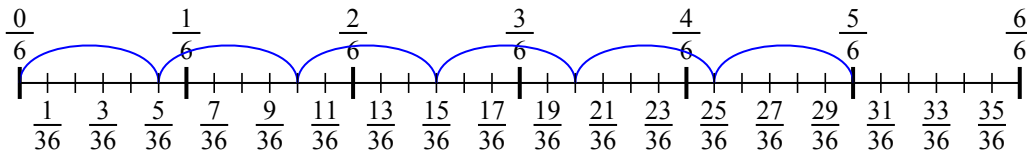
6) $\frac{4}{5} : 3$



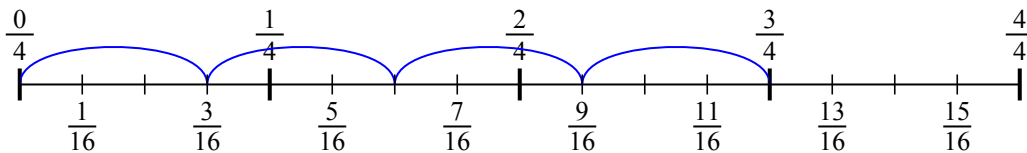
7) $\frac{3}{4} : 5$



8) $\frac{5}{6} : 6$



9) $\frac{3}{4} : 4$



Risposte

1. $\frac{5}{12}$
2. $\frac{3}{12}$
3. $\frac{4}{30}$
4. $\frac{2}{24}$
5. $\frac{4}{28}$
6. $\frac{4}{15}$
7. $\frac{3}{20}$
8. $\frac{5}{36}$
9. $\frac{3}{16}$

