




Usa la linea numerata per risolvere ogni problema. Il primo è un esempio.


**Risposte**

1)  $\frac{6}{7} : 2$




1. \_\_\_\_\_

2)  $\frac{4}{5} : 5$



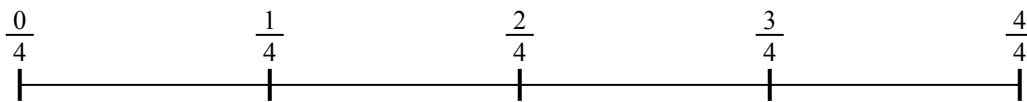
2. \_\_\_\_\_

3)  $\frac{3}{5} : 4$




3. \_\_\_\_\_

4)  $\frac{2}{4} : 3$




4. \_\_\_\_\_

5)  $\frac{4}{7} : 4$



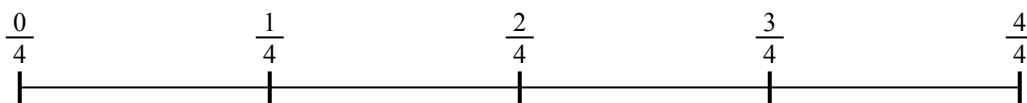
5. \_\_\_\_\_

6)  $\frac{5}{7} : 6$




6. \_\_\_\_\_

7)  $\frac{3}{4} : 5$



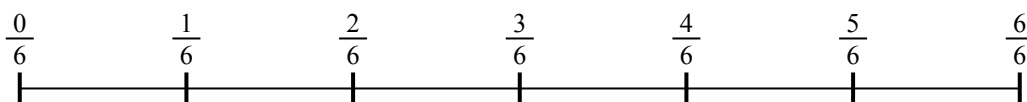
7. \_\_\_\_\_

8)  $\frac{3}{7} : 3$



8. \_\_\_\_\_

9)  $\frac{4}{6} : 2$

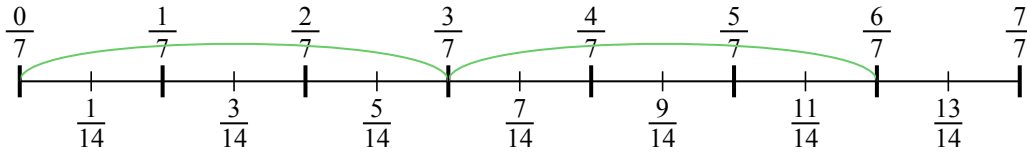


9. \_\_\_\_\_

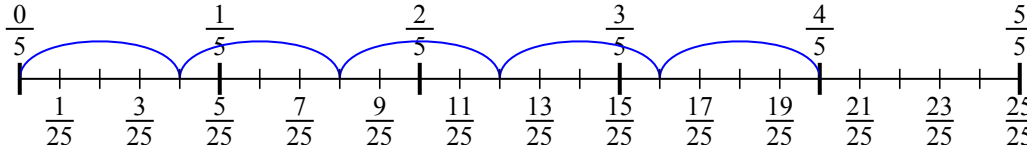


Usa la linea numerata per risolvere ogni problema. Il primo è un esempio.

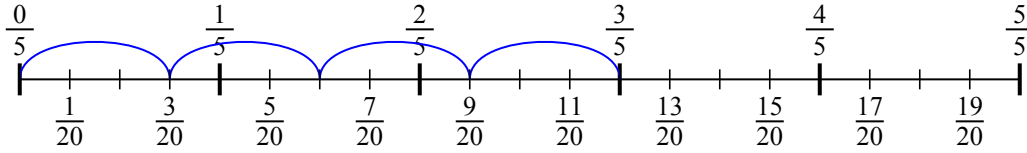
1)  $\frac{6}{7} : 2$



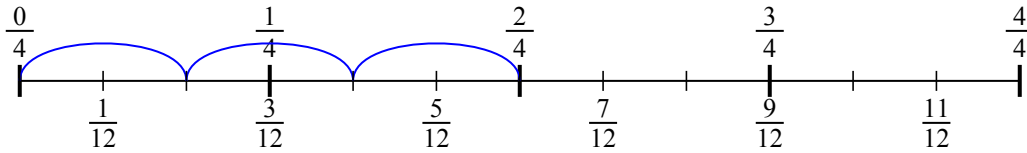
2)  $\frac{4}{5} : 5$



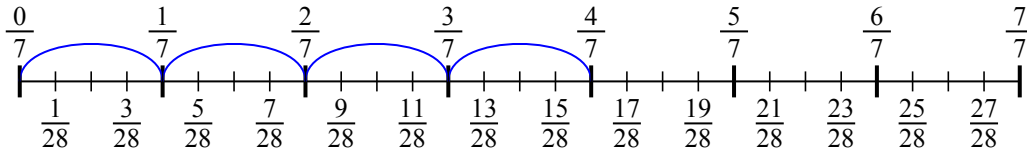
3)  $\frac{3}{5} : 4$



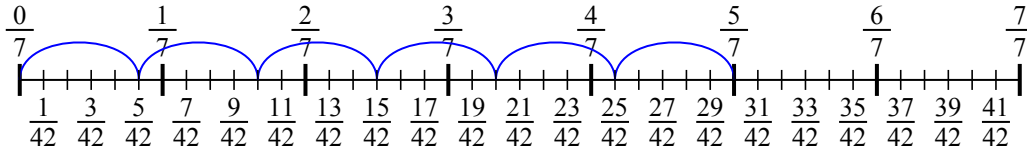
4)  $\frac{2}{4} : 3$



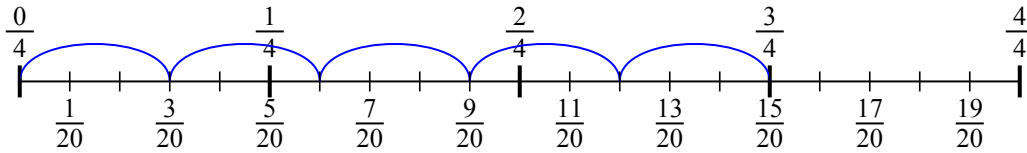
5)  $\frac{4}{7} : 4$



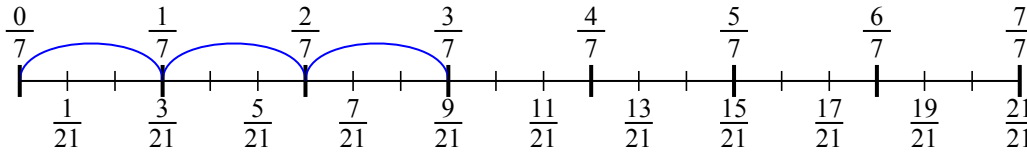
6)  $\frac{5}{7} : 6$



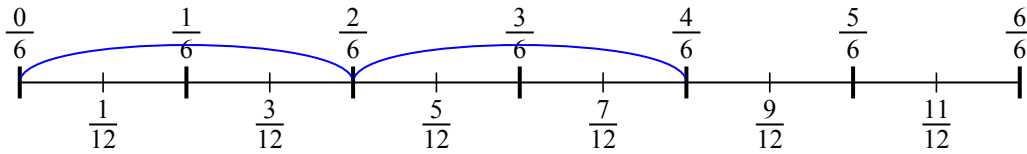
7)  $\frac{3}{4} : 5$



8)  $\frac{3}{7} : 3$



9)  $\frac{4}{6} : 2$

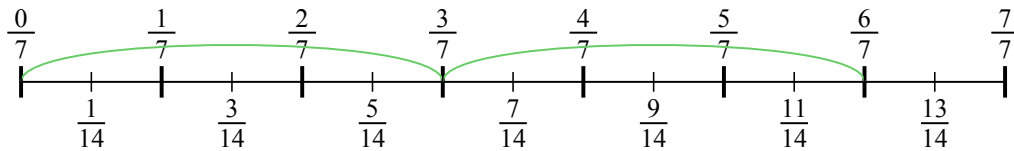


**Risposte**

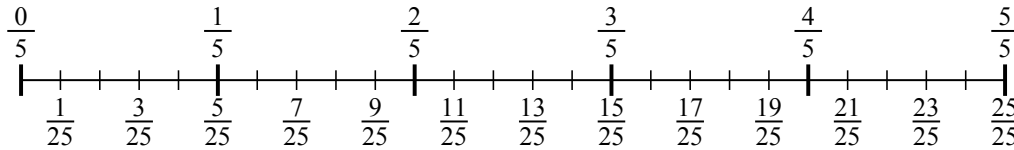
1.  $\frac{6}{14}$
2.  $\frac{4}{25}$
3.  $\frac{3}{20}$
4.  $\frac{2}{12}$
5.  $\frac{4}{28}$
6.  $\frac{5}{42}$
7.  $\frac{3}{20}$
8.  $\frac{3}{21}$
9.  $\frac{4}{12}$



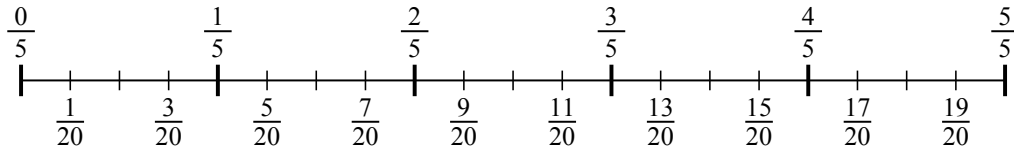
1)  $\frac{6}{7} : 2$



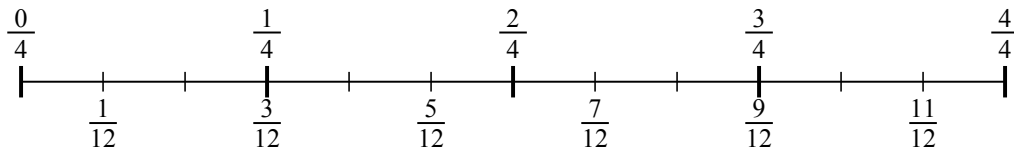
2)  $\frac{4}{5} : 5$



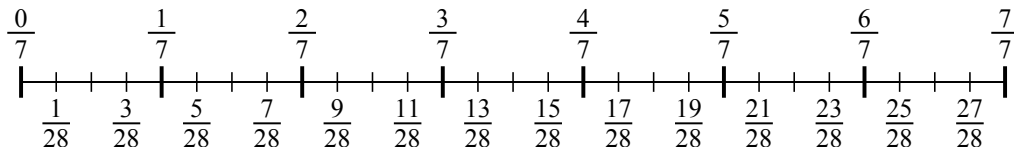
3)  $\frac{3}{5} : 4$



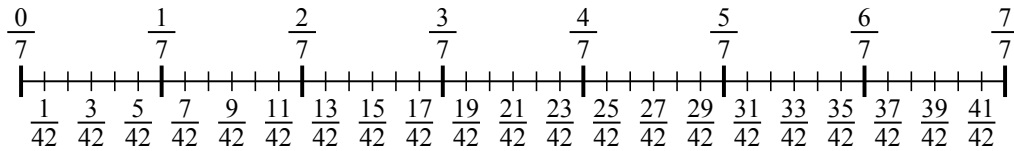
4)  $\frac{2}{4} : 3$



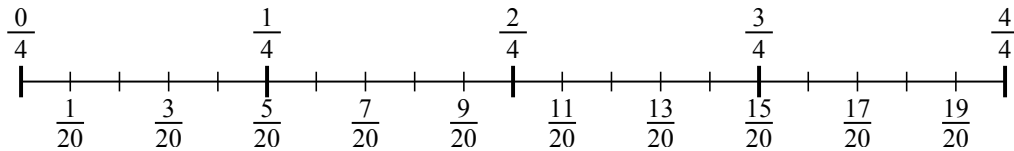
5)  $\frac{4}{7} : 4$



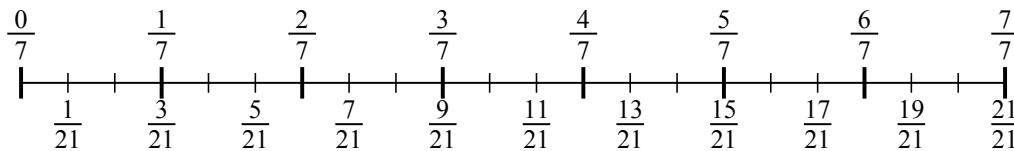
6)  $\frac{5}{7} : 6$



7)  $\frac{3}{4} : 5$



8)  $\frac{3}{7} : 3$



9)  $\frac{4}{6} : 2$

