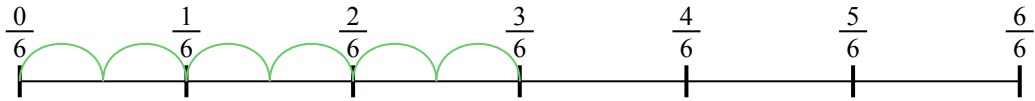




Usa la linea numerata per risolvere ogni problema. Il primo è un esempio.

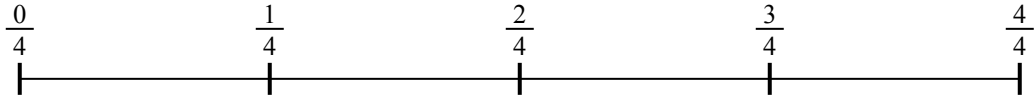
**Risposte**

1)  $\frac{3}{6} : 6$



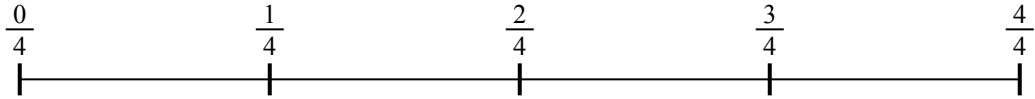
1. \_\_\_\_\_

2)  $\frac{3}{4} : 5$




2. \_\_\_\_\_

3)  $\frac{2}{4} : 3$



3. \_\_\_\_\_

4)  $\frac{3}{5} : 4$




4. \_\_\_\_\_

5)  $\frac{5}{7} : 3$



5. \_\_\_\_\_

6)  $\frac{2}{7} : 2$




6. \_\_\_\_\_

7)  $\frac{3}{5} : 3$



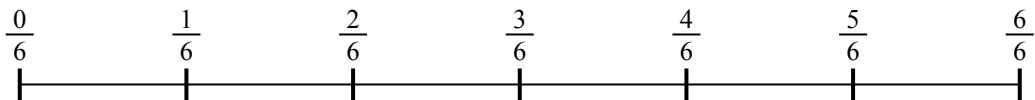
7. \_\_\_\_\_

8)  $\frac{4}{7} : 2$



8. \_\_\_\_\_

9)  $\frac{4}{6} : 4$

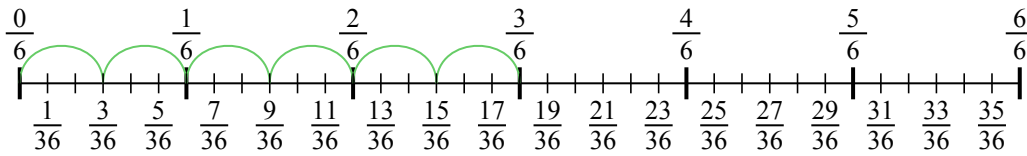


9. \_\_\_\_\_

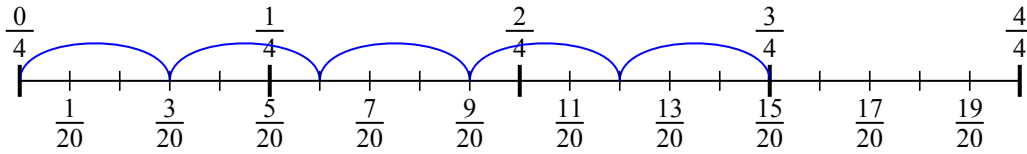


Usa la linea numerata per risolvere ogni problema. Il primo è un esempio.

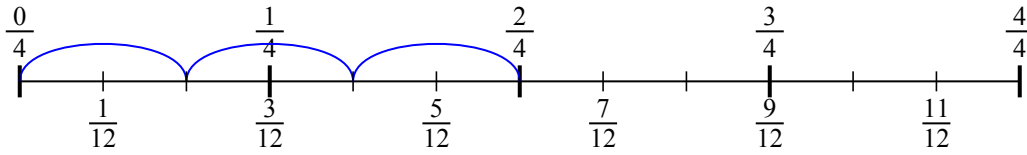
1)  $\frac{3}{6} : 6$



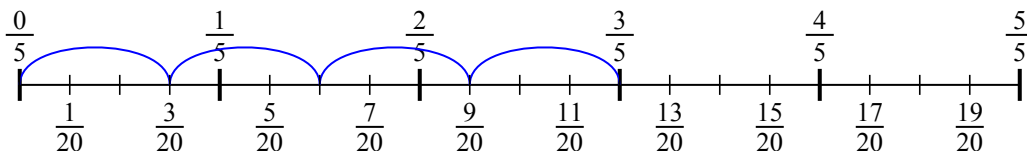
2)  $\frac{3}{4} : 5$



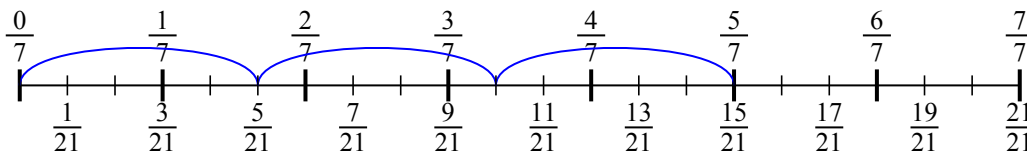
3)  $\frac{2}{4} : 3$



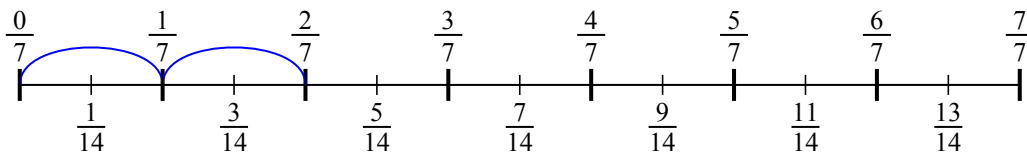
4)  $\frac{3}{5} : 4$



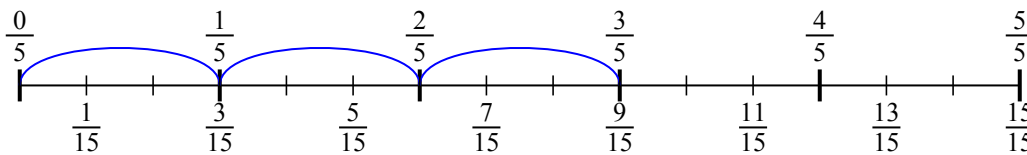
5)  $\frac{5}{7} : 3$



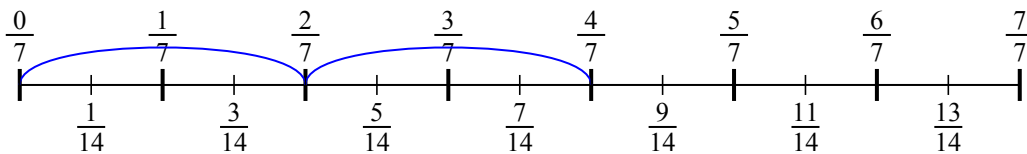
6)  $\frac{2}{7} : 2$



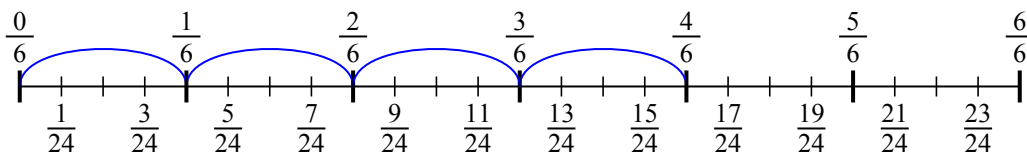
7)  $\frac{3}{5} : 3$



8)  $\frac{4}{7} : 2$



9)  $\frac{4}{6} : 4$

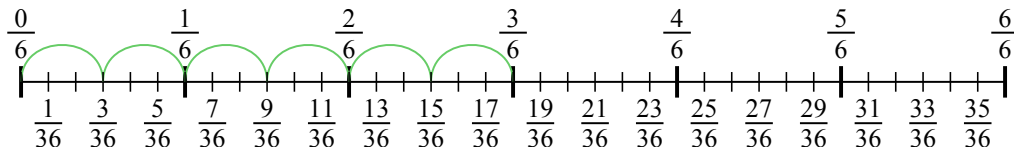


**Risposte**

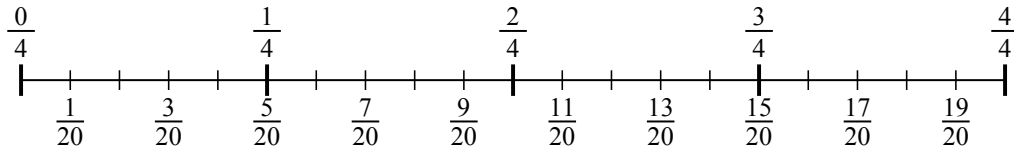
1.  $\frac{3}{36}$
2.  $\frac{3}{20}$
3.  $\frac{2}{12}$
4.  $\frac{3}{20}$
5.  $\frac{5}{21}$
6.  $\frac{2}{14}$
7.  $\frac{3}{15}$
8.  $\frac{4}{14}$
9.  $\frac{4}{24}$



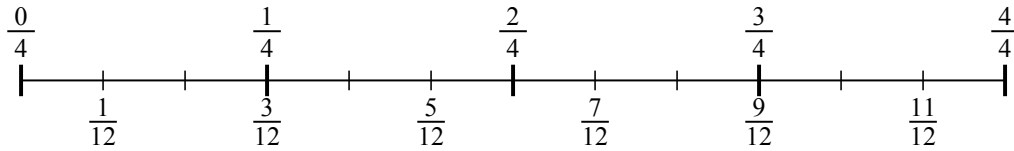
1)  $\frac{3}{6} : 6$



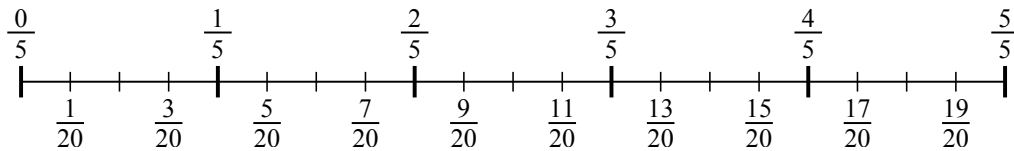
2)  $\frac{3}{4} : 5$



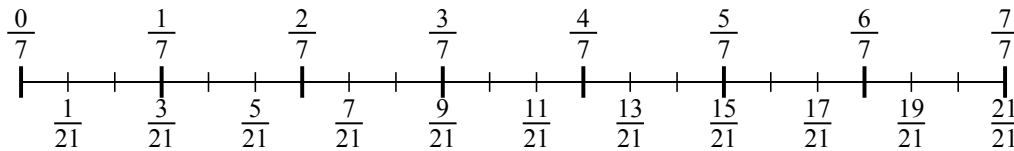
3)  $\frac{2}{4} : 3$



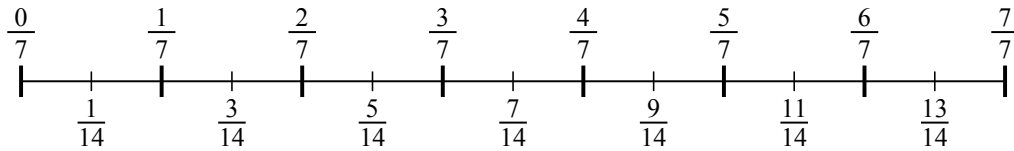
4)  $\frac{3}{5} : 4$



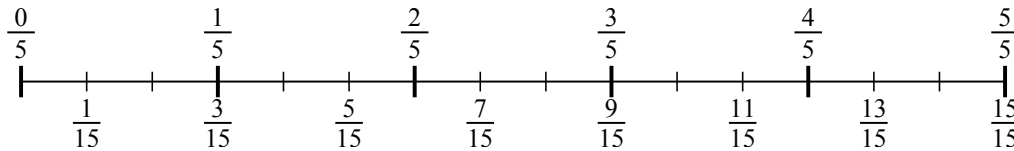
5)  $\frac{5}{7} : 3$



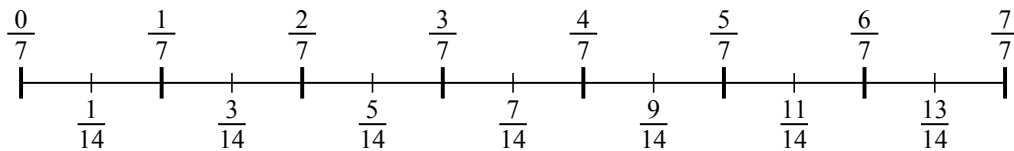
6)  $\frac{2}{7} : 2$



7)  $\frac{3}{5} : 3$



8)  $\frac{4}{7} : 2$



9)  $\frac{4}{6} : 4$

