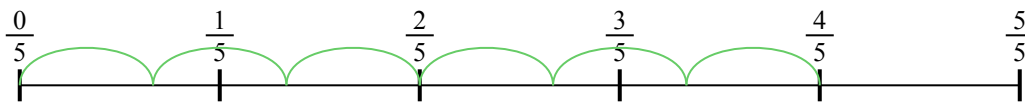


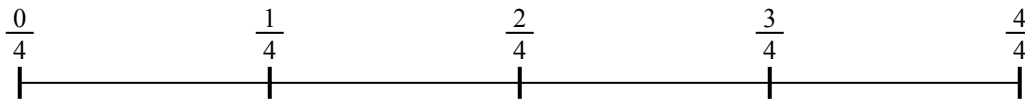


Usa la linea numerata per risolvere ogni problema. Il primo è un esempio.

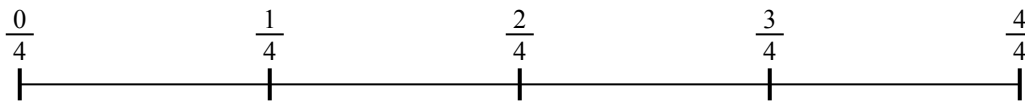
1) $\frac{4}{5} : 6$




2) $\frac{3}{4} : 2$




3) $\frac{2}{4} : 6$



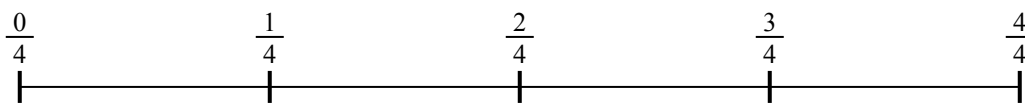
4) $\frac{3}{5} : 5$



5) $\frac{2}{5} : 4$




6) $\frac{3}{4} : 3$



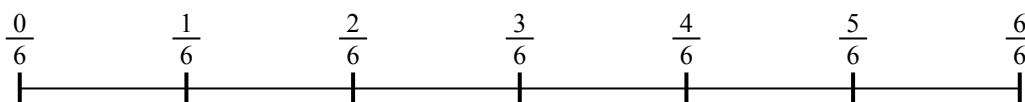
7) $\frac{2}{3} : 2$



8) $\frac{4}{5} : 5$



9) $\frac{3}{6} : 4$



Risposte

1. _____

2. _____

3. _____

4. _____

5. _____

6. _____

7. _____

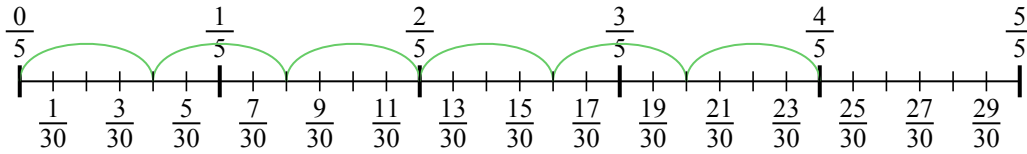
8. _____

9. _____

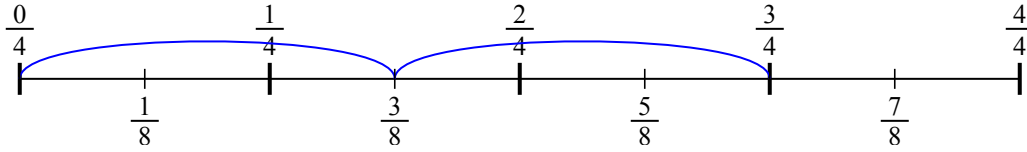


Usa la linea numerata per risolvere ogni problema. Il primo è un esempio.

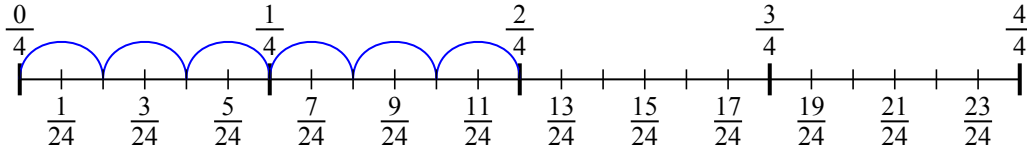
1) $\frac{4}{5} : 6$



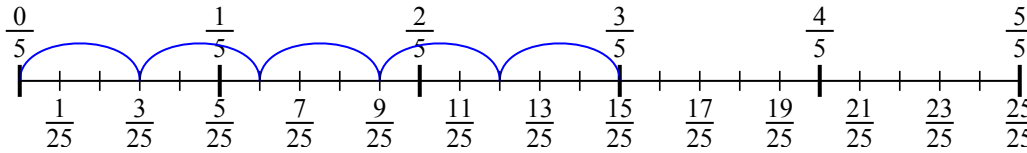
2) $\frac{3}{4} : 2$



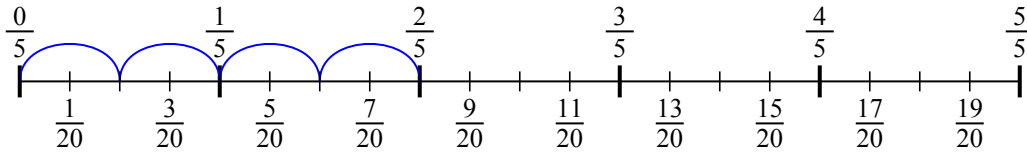
3) $\frac{2}{4} : 6$



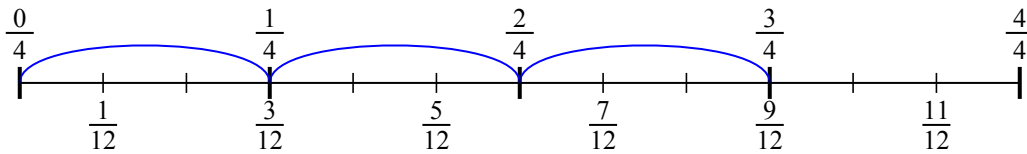
4) $\frac{3}{5} : 5$



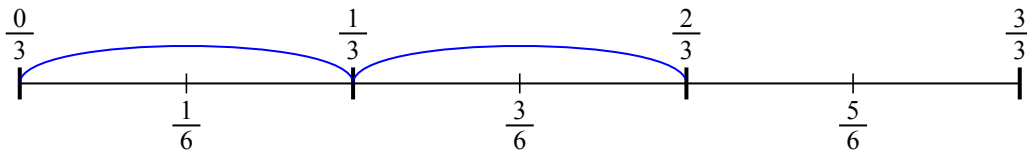
5) $\frac{2}{5} : 4$



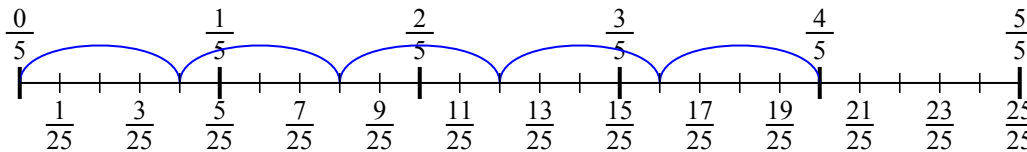
6) $\frac{3}{4} : 3$



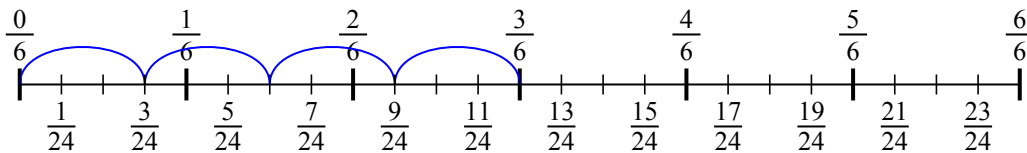
7) $\frac{2}{3} : 2$



8) $\frac{4}{5} : 5$



9) $\frac{3}{6} : 4$

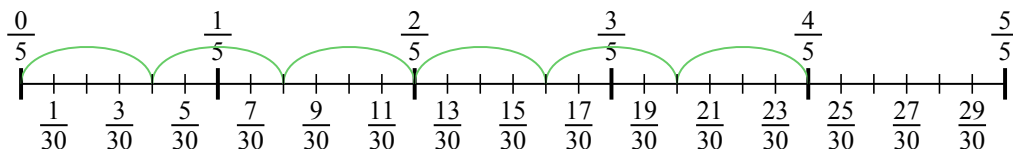


Risposte

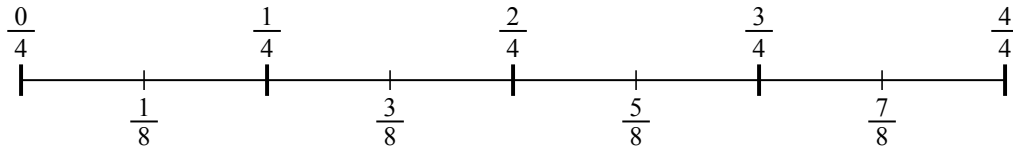
1. $\frac{4}{30}$
2. $\frac{3}{8}$
3. $\frac{2}{24}$
4. $\frac{3}{25}$
5. $\frac{2}{20}$
6. $\frac{3}{12}$
7. $\frac{2}{6}$
8. $\frac{4}{25}$
9. $\frac{3}{24}$



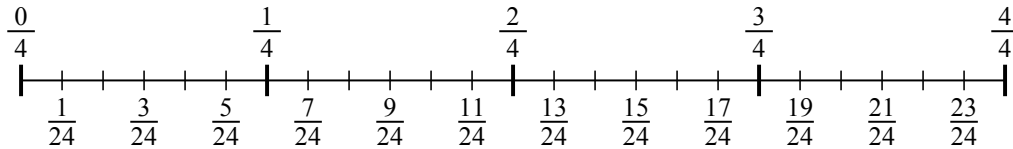
1) $\frac{4}{5} : 6$



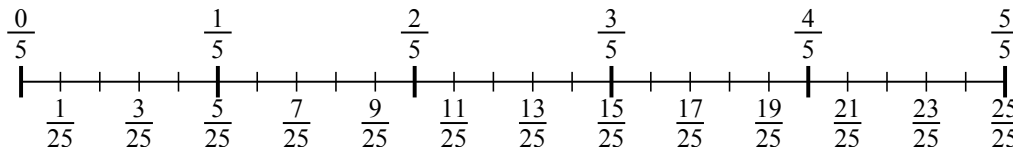
2) $\frac{3}{4} : 2$



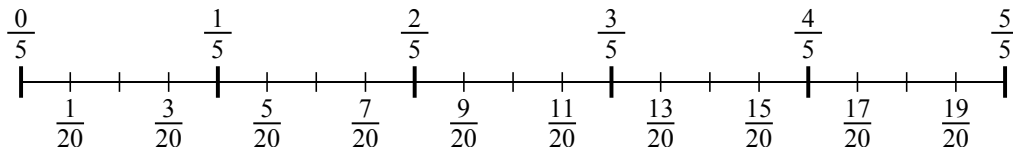
3) $\frac{2}{4} : 6$



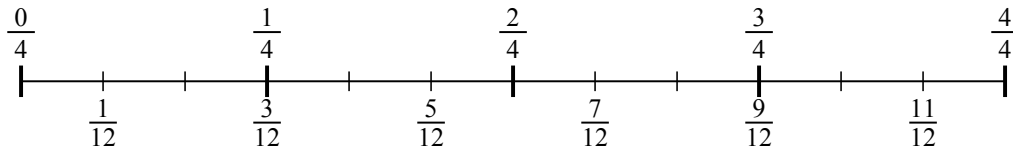
4) $\frac{3}{5} : 5$



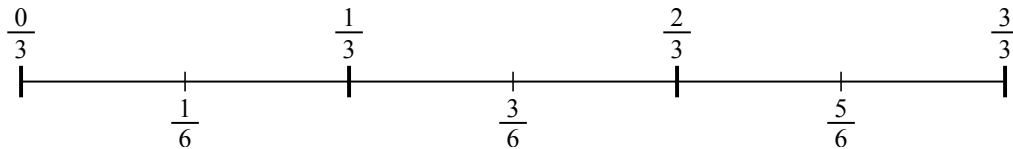
5) $\frac{2}{5} : 4$



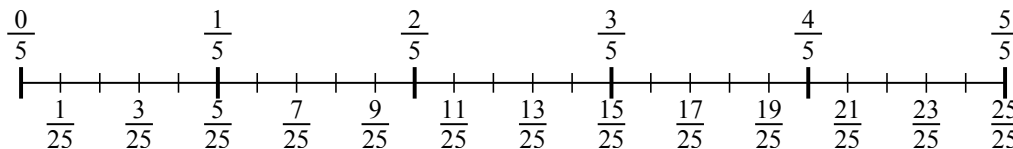
6) $\frac{3}{4} : 3$



7) $\frac{2}{3} : 2$



8) $\frac{4}{5} : 5$



9) $\frac{3}{6} : 4$

