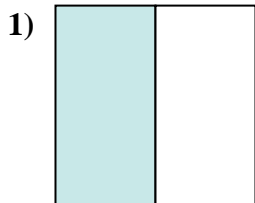
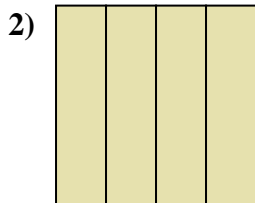




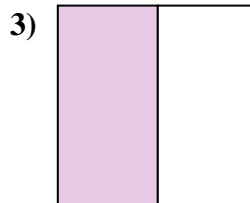
Determina quale lettera descrive la parte colorata.



- A. quattro quarti
- B. due mezzi
- C. un mezzo




- A. tre quarti
- B. quattro quarti
- C. un mezzo



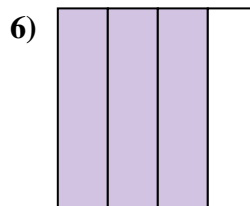
- A. due mezzi
- B. quattro quarti
- C. un mezzo



- A. due mezzi
- B. un quarto
- C. un mezzo



- A. due quarti
- B. due mezzi
- C. tre quarti



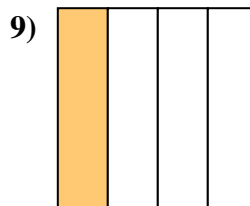
- A. due mezzi
- B. tre quarti
- C. due quarti



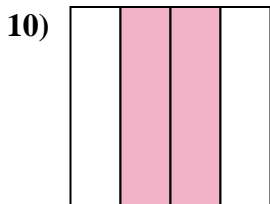
- A. un quarto
- B. tre quarti
- C. quattro quarti



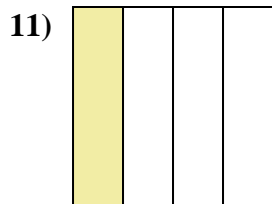
- A. due quarti
- B. un quarto
- C. quattro quarti



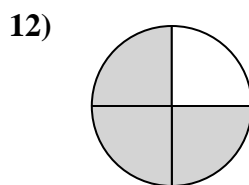
- A. due quarti
- B. un quarto
- C. due mezzi



- A. tre quarti
- B. due quarti
- C. quattro quarti



- A. tre quarti
- B. un quarto
- C. due mezzi



- A. un mezzo
- B. due quarti
- C. tre quarti

Risposte

1. _____

2. _____

3. _____

4. _____

5. _____

6. _____

7. _____

8. _____

9. _____

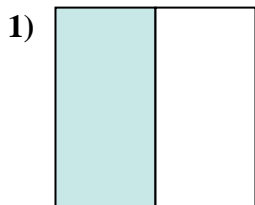
10. _____

11. _____

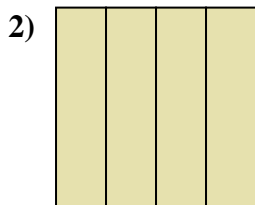
12. _____



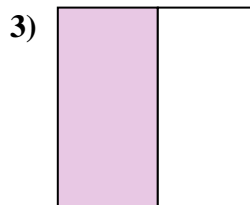
Determina quale lettera descrive la parte colorata.



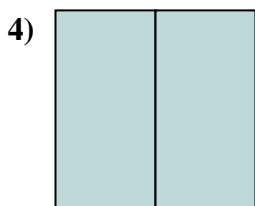
- A. quattro quarti
- B. due mezzi
- C. un mezzo



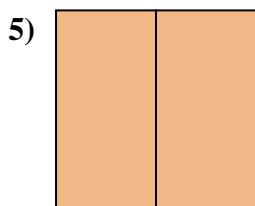
- A. tre quarti
- B. quattro quarti
- C. un mezzo



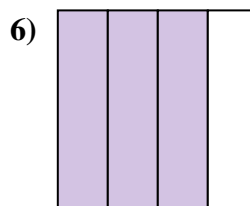
- A. due mezzi
- B. quattro quarti
- C. un mezzo



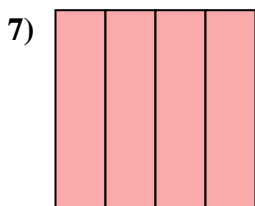
- A. due mezzi
- B. un quarto
- C. un mezzo



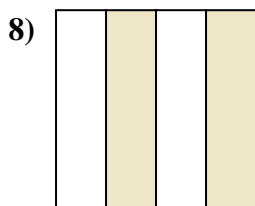
- A. due quarti
- B. due mezzi
- C. tre quarti



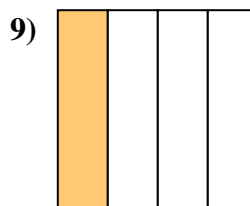
- A. due mezzi
- B. tre quarti
- C. due quarti



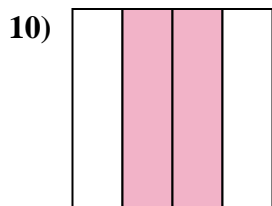
- A. un quarto
- B. tre quarti
- C. quattro quarti



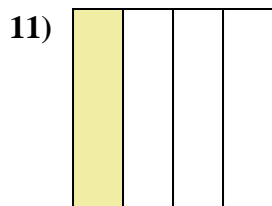
- A. due quarti
- B. un quarto
- C. quattro quarti



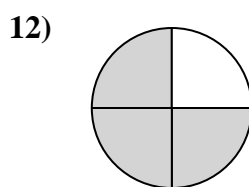
- A. due quarti
- B. un quarto
- C. due mezzi



- A. tre quarti
- B. due quarti
- C. quattro quarti



- A. tre quarti
- B. un quarto
- C. due mezzi



- A. un mezzo
- B. due quarti
- C. tre quarti

Risposte

1. **C**

2. **B**

3. **C**

4. **A**

5. **B**

6. **B**

7. **C**

8. **A**

9. **B**

10. **B**

11. **B**

12. **C**