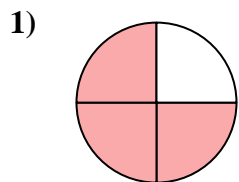
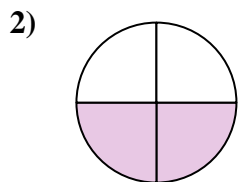




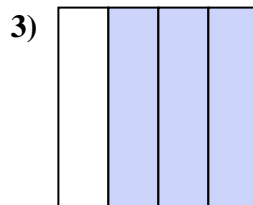
Determina quale lettera descrive la parte colorata.



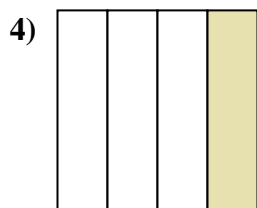
- A. un quarto
- B. due mezzi
- C. tre quarti



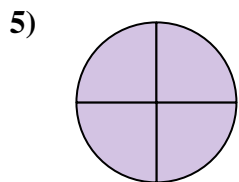
- A. due quarti
- B. un quarto
- C. tre quarti



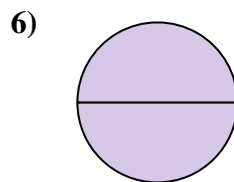
- A. un mezzo
- B. quattro quarti
- C. tre quarti




- A. un quarto
- B. un mezzo
- C. tre quarti




- A. quattro quarti
- B. un mezzo
- C. un quarto



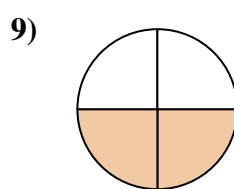
- A. due quarti
- B. tre quarti
- C. due mezzi



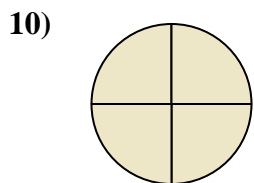
- A. due mezzi
- B. due quarti
- C. tre quarti



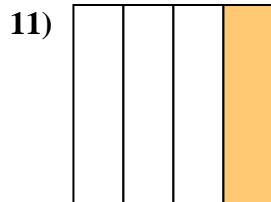
- A. due mezzi
- B. tre quarti
- C. un mezzo



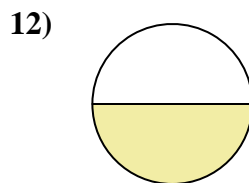
- A. un quarto
- B. due mezzi
- C. due quarti



- A. quattro quarti
- B. tre quarti
- C. un quarto



- A. due quarti
- B. tre quarti
- C. un quarto



- A. un quarto
- B. due mezzi
- C. un mezzo

Risposte

1. _____

2. _____

3. _____

4. _____

5. _____

6. _____

7. _____

8. _____

9. _____

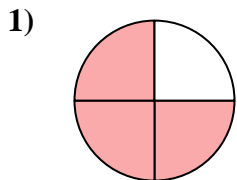
10. _____

11. _____

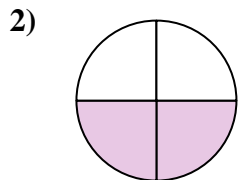
12. _____



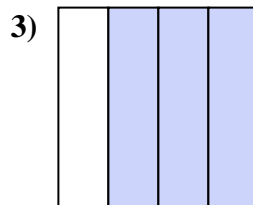
Determina quale lettera descrive la parte colorata.



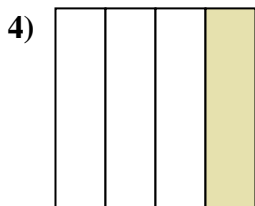
- A. un quarto
- B. due mezzi
- C. tre quarti



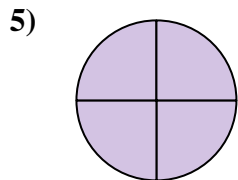
- A. due quarti
- B. un quarto
- C. tre quarti



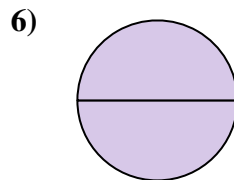
- A. un mezzo
- B. quattro quarti
- C. tre quarti




- A. un quarto
- B. un mezzo
- C. tre quarti



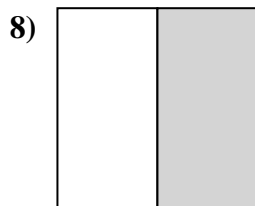
- A. quattro quarti
- B. un mezzo
- C. un quarto



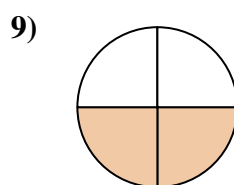
- A. due quarti
- B. tre quarti
- C. due mezzi



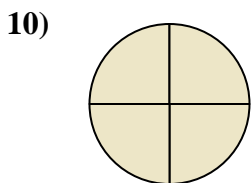
- A. due mezzi
- B. due quarti
- C. tre quarti



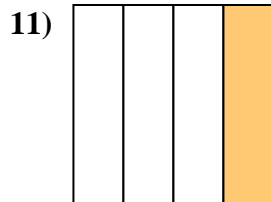
- A. due mezzi
- B. tre quarti
- C. un mezzo



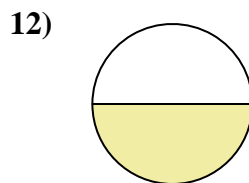
- A. un quarto
- B. due mezzi
- C. due quarti



- A. quattro quarti
- B. tre quarti
- C. un quarto



- A. due quarti
- B. tre quarti
- C. un quarto



- A. un quarto
- B. due mezzi
- C. un mezzo

Risposte

1. **C**

2. **A**

3. **C**

4. **A**

5. **A**

6. **C**

7. **A**

8. **C**

9. **C**

10. **A**

11. **C**

12. **C**