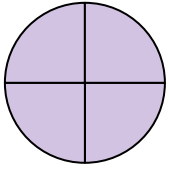




Determina quale lettera descrive la parte colorata.

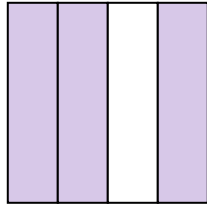
Risposte

1)



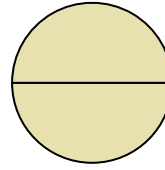
- A. un quarto
- B. un terzo
- C. quattro quarti

2)



- A. un mezzo
- B. tre quarti
- C. due terzi

3)



- A. due mezzi
- B. tre quarti
- C. due terzi

1. _____

2. _____

3. _____

4. _____

5. _____

6. _____

7. _____

8. _____

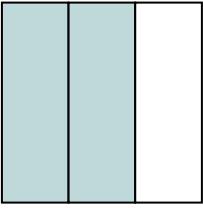
9. _____

10. _____

11. _____


12. _____

4)



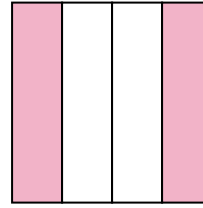
- A. tre terzi
- B. un terzo
- C. due terzi

5)




- A. due terzi
- B. due quarti
- C. un terzo

6)



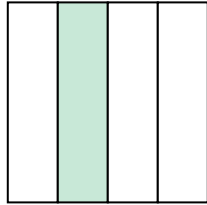
- A. tre quarti
- B. due quarti
- C. quattro quarti

7)



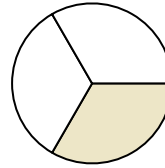
- A. tre quarti
- B. un terzo
- C. due mezzi

8)




- A. un quarto
- B. un mezzo
- C. due mezzi

9)



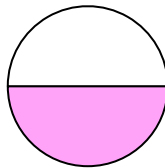
- A. un mezzo
- B. due terzi
- C. un terzo

10)



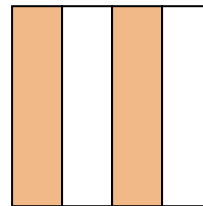
- A. due quarti
- B. due terzi
- C. due mezzi

11)



- A. tre terzi
- B. un mezzo
- C. un terzo

12)

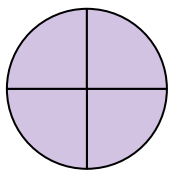


- A. due quarti
- B. due terzi
- C. tre quarti



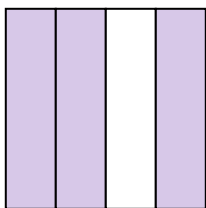
Determina quale lettera descrive la parte colorata.

1)



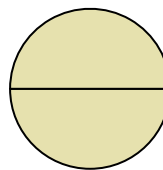
- A. un quarto
- B. un terzo
- C. quattro quarti

2)



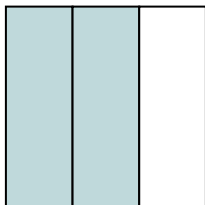
- A. un mezzo
- B. tre quarti
- C. due terzi

3)



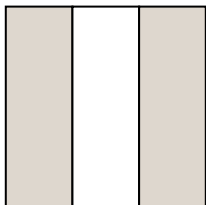
- A. due mezzi
- B. tre quarti
- C. due terzi

4)




- A. tre terzi
- B. un terzo
- C. due terzi

5)




- A. due terzi
- B. due quarti
- C. un terzo

6)



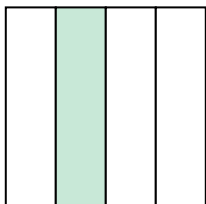
- A. tre quarti
- B. due quarti
- C. quattro quarti

7)



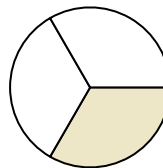
- A. tre quarti
- B. un terzo
- C. due mezzi

8)




- A. un quarto
- B. un mezzo
- C. due mezzi

9)



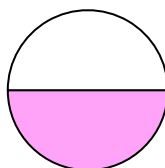
- A. un mezzo
- B. due terzi
- C. un terzo

10)



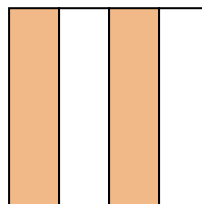
- A. due quarti
- B. due terzi
- C. due mezzi

11)



- A. tre terzi
- B. un mezzo
- C. un terzo

12)



- A. due quarti
- B. due terzi
- C. tre quarti

Risposte

1. **C**

2. **B**

3. **A**

4. **C**

5. **A**

6. **B**

7. **B**

8. **A**

9. **C**

10. **C**

11. **B**

12. **A**