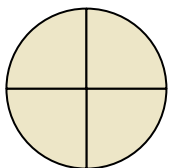




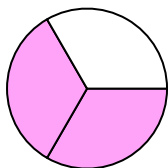
Determina quale lettera descrive la parte colorata.

1)



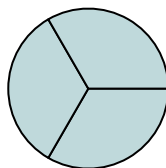
- A. un mezzo
- B. quattro quarti
- C. due quarti

2)



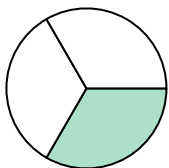
- A. due quarti
- B. due terzi
- C. un mezzo

3)



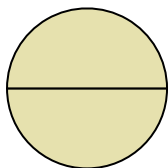
- A. tre quarti
- B. due quarti
- C. tre terzi

4)



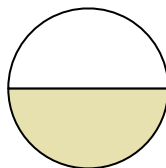
- A. un terzo
- B. quattro quarti
- C. tre quarti

5)



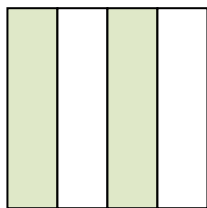
- A. due quarti
- B. un quarto
- C. due mezzi

6)



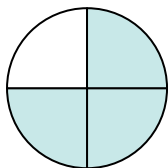
- A. un terzo
- B. tre terzi
- C. un mezzo

7)



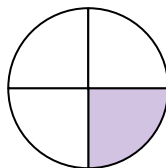
- A. quattro quarti
- B. tre quarti
- C. due quarti

8)



- A. due mezzi
- B. tre quarti
- C. un quarto

9)



- A. due mezzi
- B. un quarto
- C. tre quarti

**Risposte**

1. \_\_\_\_\_

2. \_\_\_\_\_

3. \_\_\_\_\_

4. \_\_\_\_\_

5. \_\_\_\_\_

6. \_\_\_\_\_

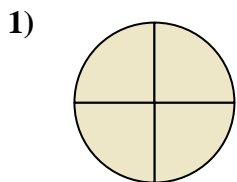
7. \_\_\_\_\_

8. \_\_\_\_\_

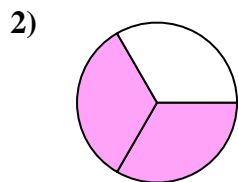
9. \_\_\_\_\_



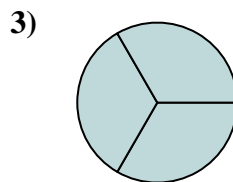
Determina quale lettera descrive la parte colorata.



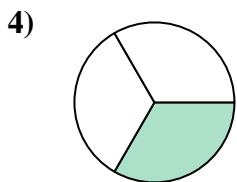
- A. un mezzo
- B. quattro quarti
- C. due quarti



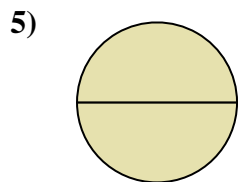
- A. due quarti
- B. due terzi
- C. un mezzo



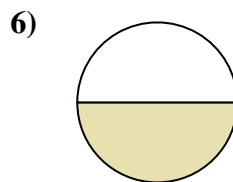
- A. tre quarti
- B. due quarti
- C. tre terzi



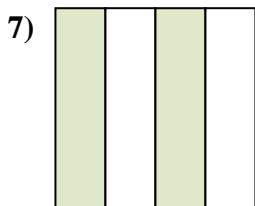
- A. un terzo
- B. quattro quarti
- C. tre quarti



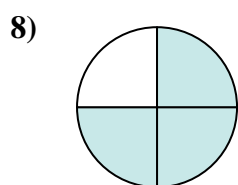
- A. due quarti
- B. un quarto
- C. due mezzi



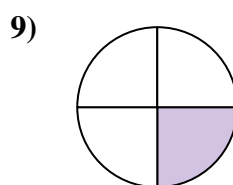
- A. un terzo
- B. tre terzi
- C. un mezzo



- A. quattro quarti
- B. tre quarti
- C. due quarti



- A. due mezzi
- B. tre quarti
- C. un quarto



- A. due mezzi
- B. un quarto
- C. tre quarti

**Risposte**

- 1.   **B**
- 2.   **B**
- 3.   **C**
- 4.   **A**
- 5.   **C**
- 6.   **C**
- 7.   **C**
- 8.   **B**
- 9.   **B**