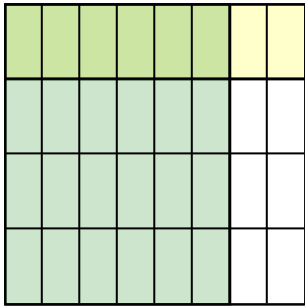


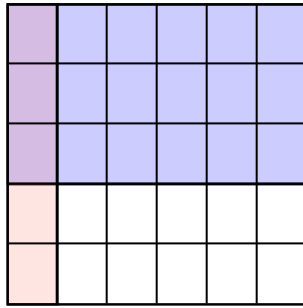


Usa i quadrati per rappresentare la moltiplicazione indicata.

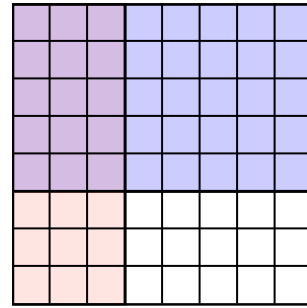
Es) $\frac{6}{8} \times \frac{1}{4} =$



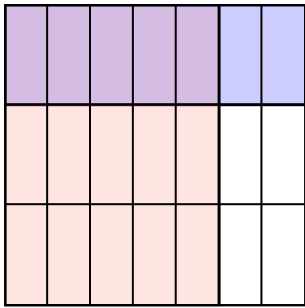
1) $\frac{1}{6} \times \frac{3}{5} =$



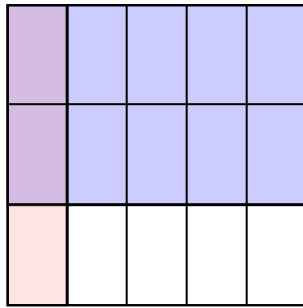
2) $\frac{3}{8} \times \frac{5}{8} =$



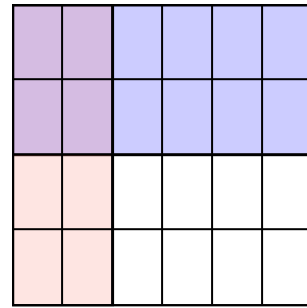
3) $\frac{5}{7} \times \frac{1}{3} =$




4) $\frac{1}{5} \times \frac{2}{3} =$



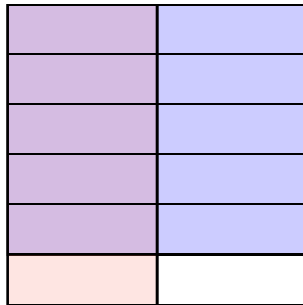
5) $\frac{2}{6} \times \frac{2}{4} =$



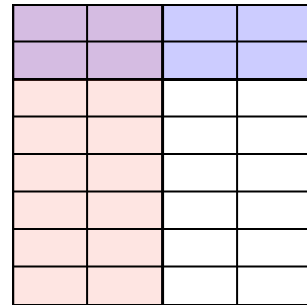
6) $\frac{2}{5} \times \frac{1}{3} =$




7) $\frac{1}{2} \times \frac{5}{6} =$



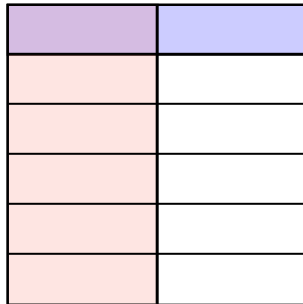
8) $\frac{2}{4} \times \frac{2}{8} =$



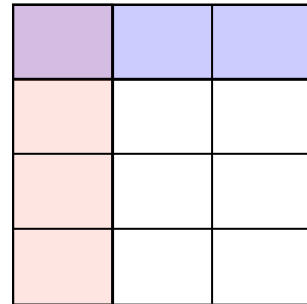
9) $\frac{1}{2} \times \frac{4}{7} =$



10) $\frac{1}{2} \times \frac{1}{6} =$



11) $\frac{1}{3} \times \frac{1}{4} =$



Risposte

Es. $\frac{6}{32}$

1. $\frac{3}{30}$

2. $\frac{15}{64}$

3. $\frac{5}{21}$

4. $\frac{2}{15}$

5. $\frac{4}{24}$

6. $\frac{2}{15}$

7. $\frac{5}{12}$

8. $\frac{4}{32}$

9. $\frac{4}{14}$

10. $\frac{1}{12}$

11. $\frac{1}{12}$