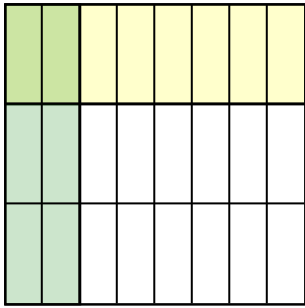




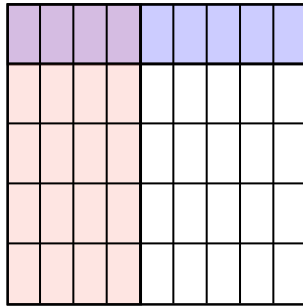


Usa i quadrati per rappresentare la moltiplicazione indicata.

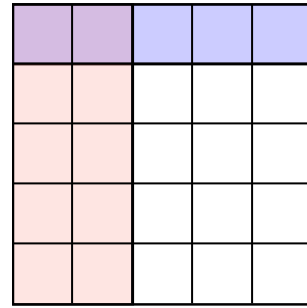
Es)  $\frac{2}{8} \times \frac{1}{3} =$



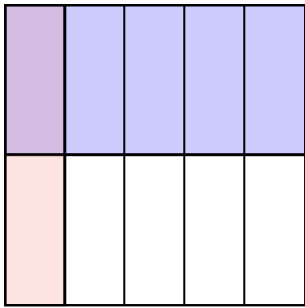
1)  $\frac{4}{9} \times \frac{1}{5} =$



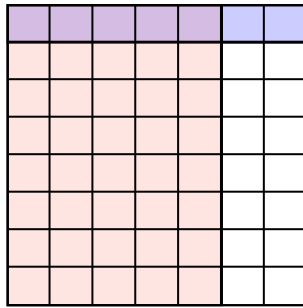
2)  $\frac{2}{5} \times \frac{1}{5} =$



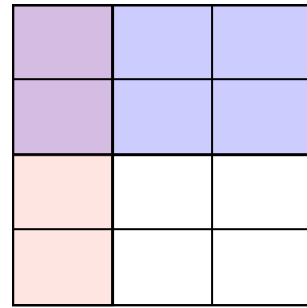
3)  $\frac{1}{5} \times \frac{1}{2} =$



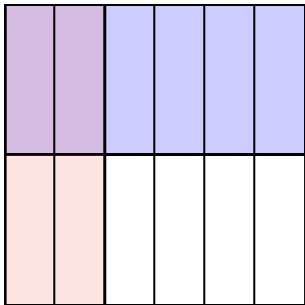
4)  $\frac{5}{7} \times \frac{1}{8} =$



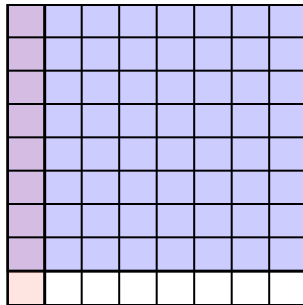
5)  $\frac{1}{3} \times \frac{2}{4} =$



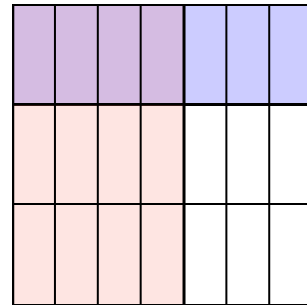
6)  $\frac{2}{6} \times \frac{1}{2} =$




7)  $\frac{1}{8} \times \frac{8}{9} =$



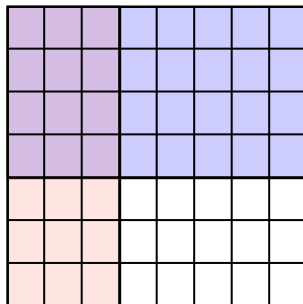
8)  $\frac{4}{7} \times \frac{1}{3} =$



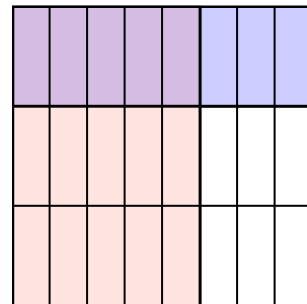
9)  $\frac{2}{3} \times \frac{4}{7} =$



10)  $\frac{3}{8} \times \frac{4}{7} =$



11)  $\frac{5}{8} \times \frac{1}{3} =$



**Risposte**

Es.  $\frac{2}{24}$

1.  $\frac{4}{45}$

2.  $\frac{2}{25}$

3.  $\frac{1}{10}$

4.  $\frac{5}{56}$

5.  $\frac{2}{12}$

6.  $\frac{2}{12}$

7.  $\frac{8}{72}$

8.  $\frac{4}{21}$

9.  $\frac{8}{21}$

10.  $\frac{12}{56}$

11.  $\frac{5}{24}$