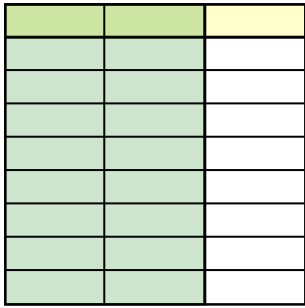




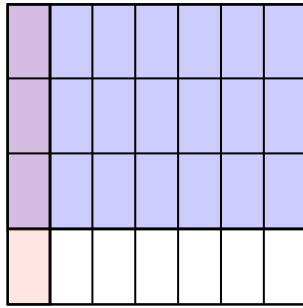


Usa i quadrati per rappresentare la moltiplicazione indicata.

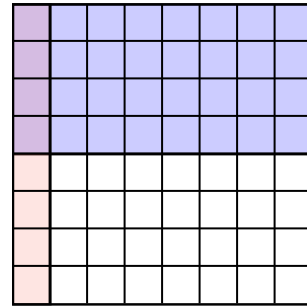
Es)  $\frac{2}{3} \times \frac{1}{9} =$



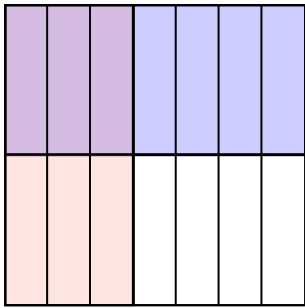
1)  $\frac{1}{7} \times \frac{3}{4} =$



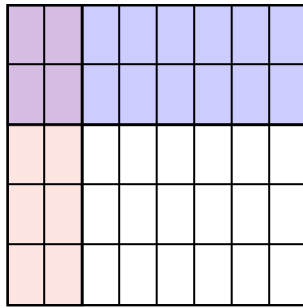
2)  $\frac{1}{8} \times \frac{4}{8} =$



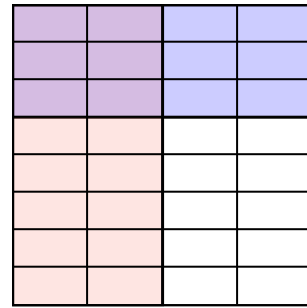
3)  $\frac{3}{7} \times \frac{1}{2} =$



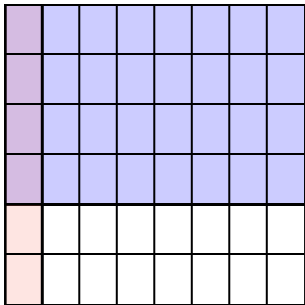
4)  $\frac{2}{8} \times \frac{2}{5} =$



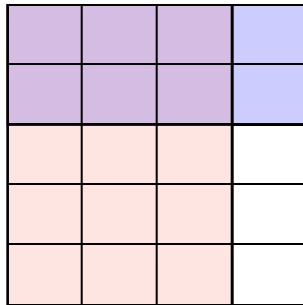
5)  $\frac{2}{4} \times \frac{3}{8} =$



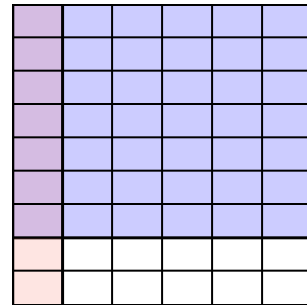
6)  $\frac{1}{8} \times \frac{4}{6} =$




7)  $\frac{3}{4} \times \frac{2}{5} =$



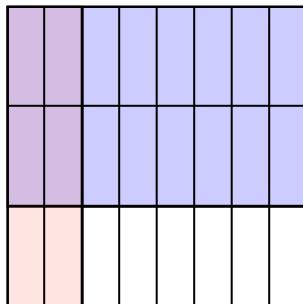
8)  $\frac{1}{6} \times \frac{7}{9} =$



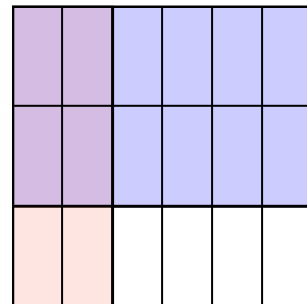
9)  $\frac{3}{5} \times \frac{2}{7} =$



10)  $\frac{2}{8} \times \frac{2}{3} =$



11)  $\frac{2}{6} \times \frac{2}{3} =$



**Risposte**

Es.  $\frac{2}{27}$

1.  $\frac{3}{28}$

2.  $\frac{4}{64}$

3.  $\frac{3}{14}$

4.  $\frac{4}{40}$

5.  $\frac{6}{32}$

6.  $\frac{4}{48}$

7.  $\frac{6}{20}$

8.  $\frac{7}{54}$

9.  $\frac{6}{35}$

10.  $\frac{4}{24}$

11.  $\frac{4}{18}$