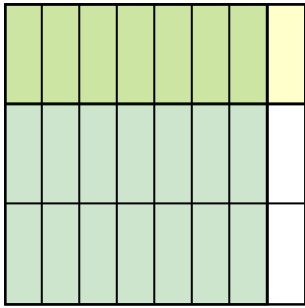





Usa i quadrati per rappresentare la moltiplicazione indicata.


Es) $\frac{7}{8} \times \frac{1}{3} =$



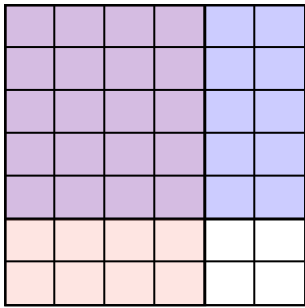
1) $\frac{6}{7} \times \frac{6}{9} =$




2) $\frac{1}{3} \times \frac{1}{2} =$



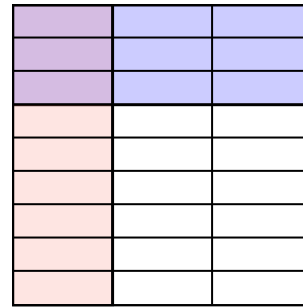
3) $\frac{4}{6} \times \frac{5}{7} =$



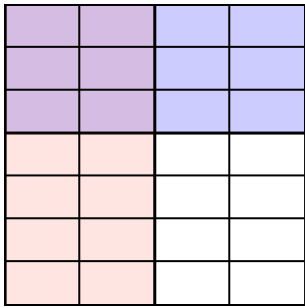
4) $\frac{1}{3} \times \frac{1}{2} =$



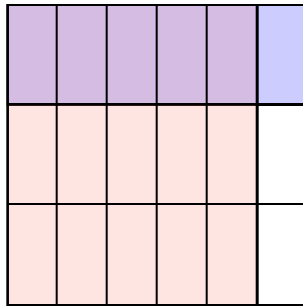
5) $\frac{1}{3} \times \frac{3}{9} =$



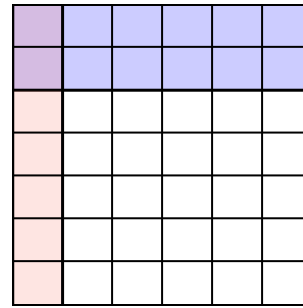
6) $\frac{2}{4} \times \frac{3}{7} =$




7) $\frac{5}{6} \times \frac{1}{3} =$



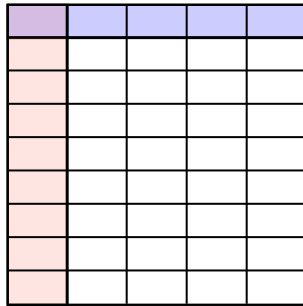
8) $\frac{1}{6} \times \frac{2}{7} =$



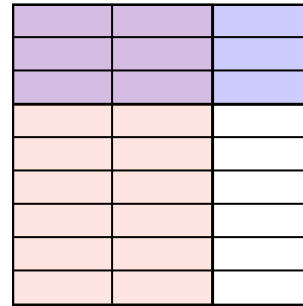
9) $\frac{3}{4} \times \frac{1}{3} =$



10) $\frac{1}{5} \times \frac{1}{9} =$



11) $\frac{2}{3} \times \frac{3}{9} =$



Risposte

Es. $\frac{7}{24}$

1. $\frac{36}{63}$

2. $\frac{1}{6}$

3. $\frac{20}{42}$

4. $\frac{1}{6}$

5. $\frac{3}{27}$

6. $\frac{6}{28}$

7. $\frac{5}{18}$

8. $\frac{2}{42}$

9. $\frac{3}{12}$

10. $\frac{1}{45}$

11. $\frac{6}{27}$