


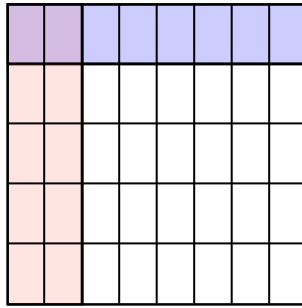


Usa i quadrati per rappresentare la moltiplicazione indicata.


Es) $\frac{3}{4} \times \frac{1}{2} =$




1) $\frac{2}{8} \times \frac{1}{5} =$



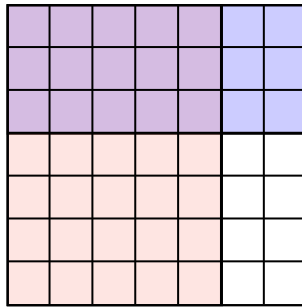
2) $\frac{1}{2} \times \frac{4}{8} =$



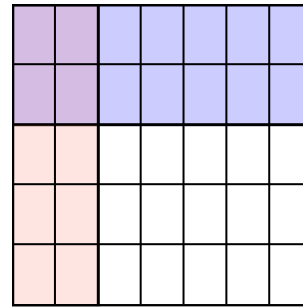
3) $\frac{1}{3} \times \frac{1}{3} =$



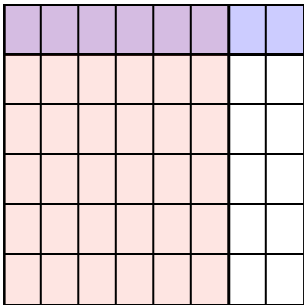
4) $\frac{5}{7} \times \frac{3}{7} =$




5) $\frac{2}{7} \times \frac{2}{5} =$



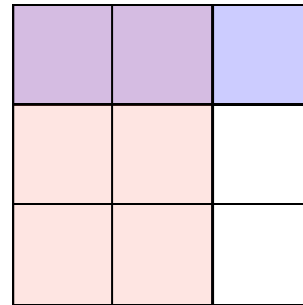
6) $\frac{6}{8} \times \frac{1}{6} =$



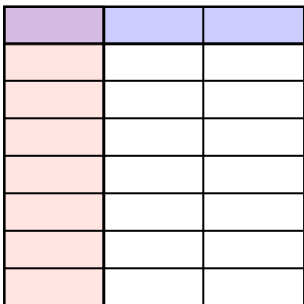
7) $\frac{1}{3} \times \frac{1}{2} =$



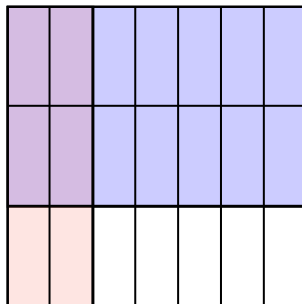
8) $\frac{2}{3} \times \frac{1}{3} =$



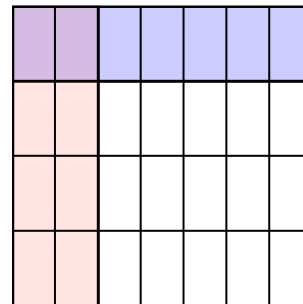
9) $\frac{1}{3} \times \frac{1}{8} =$



10) $\frac{2}{7} \times \frac{2}{3} =$



11) $\frac{2}{7} \times \frac{1}{4} =$



Risposte

Es. $\frac{3}{8}$

1. $\frac{2}{40}$

2. $\frac{4}{16}$

3. $\frac{1}{9}$

4. $\frac{15}{49}$

5. $\frac{4}{35}$

6. $\frac{6}{48}$

7. $\frac{1}{6}$

8. $\frac{2}{9}$

9. $\frac{1}{24}$

10. $\frac{4}{21}$

11. $\frac{2}{28}$