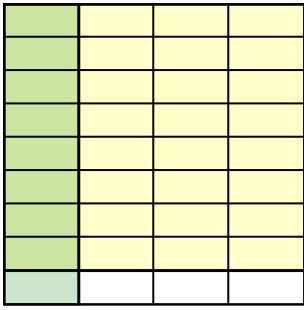


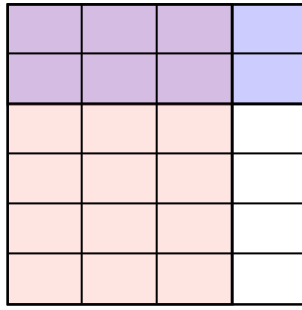


Usa i quadrati per rappresentare la moltiplicazione indicata.

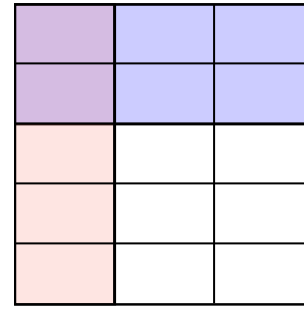
Es) $\frac{1}{4} \times \frac{8}{9} =$




1) $\frac{3}{4} \times \frac{2}{6} =$



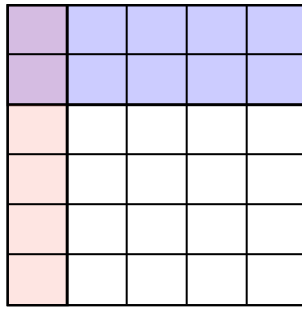
2) $\frac{1}{3} \times \frac{2}{5} =$



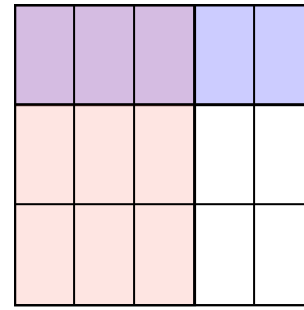
3) $\frac{1}{2} \times \frac{1}{4} =$



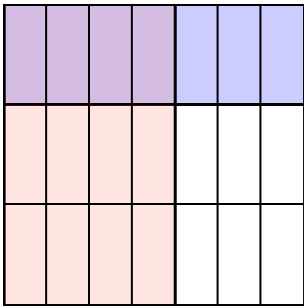
4) $\frac{1}{5} \times \frac{2}{6} =$



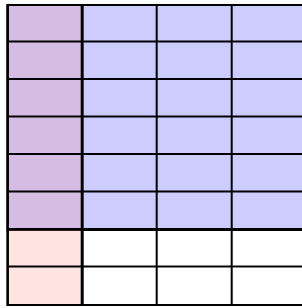
5) $\frac{3}{5} \times \frac{1}{3} =$



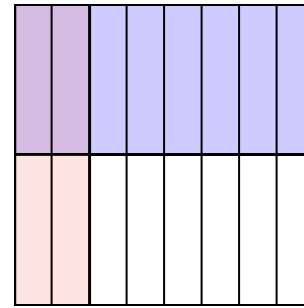
6) $\frac{4}{7} \times \frac{1}{3} =$




7) $\frac{1}{4} \times \frac{6}{8} =$



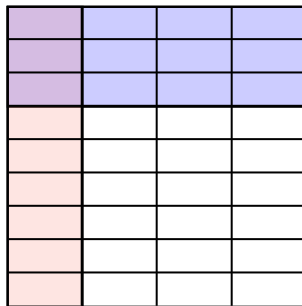
8) $\frac{2}{8} \times \frac{1}{2} =$



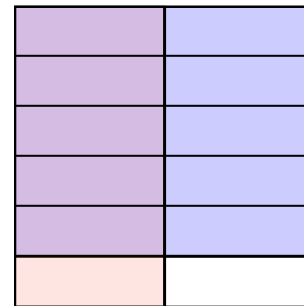
9) $\frac{1}{3} \times \frac{1}{2} =$



10) $\frac{1}{4} \times \frac{3}{9} =$



11) $\frac{1}{2} \times \frac{5}{6} =$



Risposte

Es. $\frac{8}{36}$

1. $\frac{6}{24}$

2. $\frac{2}{15}$

3. $\frac{1}{8}$

4. $\frac{2}{30}$

5. $\frac{3}{15}$

6. $\frac{4}{21}$

7. $\frac{6}{32}$

8. $\frac{2}{16}$

9. $\frac{1}{6}$

10. $\frac{3}{36}$

11. $\frac{5}{12}$