



Usa il metodo grafico per risolvere ogni operazione.

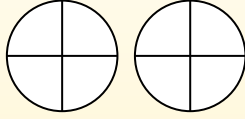
$$\frac{2}{4} \times 3 =$$

Un metodo per risolvere le moltiplicazioni tra le frazioni è di considerarla un'addizione. Per esempio il problema qui indicato è uguale a:

$$\frac{2}{4} + \frac{2}{4} + \frac{2}{4}$$

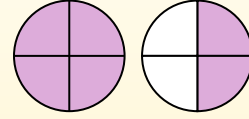
$$\frac{2}{4} \times 3 =$$

Se coloriamo $\frac{2}{4}$ per tre volte possiamo vedere la rappresentazione grafica del problema.



$$\frac{2}{4} \times 3 = 1 \frac{2}{4}$$

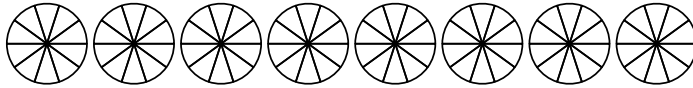
oppo aver colorato possiamo vedere perché tre volte $\frac{2}{4}$ è uguale a 1 intero e $\frac{2}{4}$.



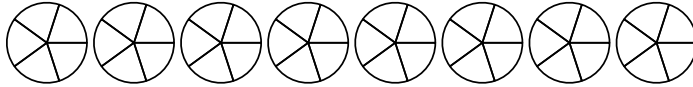
Risposte

1. _____
2. _____
3. _____
4. _____
5. _____
6. _____
7. _____
8. _____
9. _____
10. _____
11. _____
12. _____

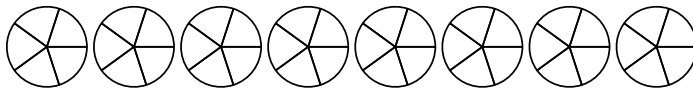
1) $\frac{8}{10} \times 5 =$



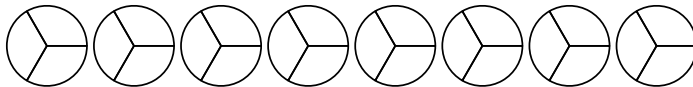
2) $\frac{2}{5} \times 4 =$



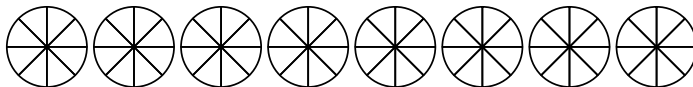
3) $\frac{1}{5} \times 6 =$



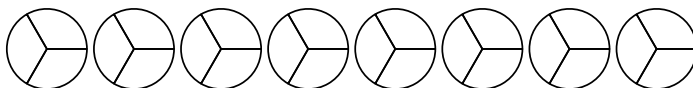
4) $\frac{1}{3} \times 5 =$



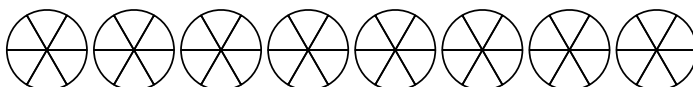
5) $\frac{4}{8} \times 4 =$



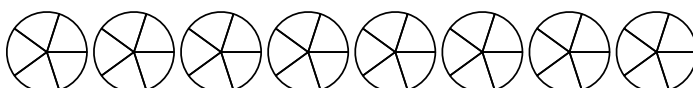
6) $\frac{2}{3} \times 6 =$



7) $\frac{3}{6} \times 2 =$



8) $\frac{3}{5} \times 3 =$



9) $\frac{1}{3} \times 7 =$



10) $\frac{1}{3} \times 6 =$



11) $\frac{2}{5} \times 3 =$



12) $\frac{1}{3} \times 4 =$





Usa il metodo grafico per risolvere ogni operazione.

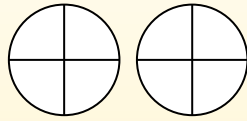
$$\frac{2}{4} \times 3 =$$

Un metodo per risolvere le moltiplicazioni tra le frazioni è di considerarla un'addizione. Per esempio il problema qui indicato è uguale a:

$$\frac{2}{4} + \frac{2}{4} + \frac{2}{4}$$

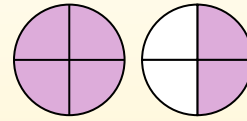
$$\frac{2}{4} \times 3 =$$

Se coloriamo $\frac{2}{4}$ per tre volte possiamo vedere la rappresentazione grafica del problema.



$$\frac{2}{4} \times 3 = 1 \frac{2}{4}$$

oppo aver colorato possiamo vedere perché tre volte $\frac{2}{4}$ è uguale a 1 intero e $\frac{2}{4}$.



Risposte

1. 4

2. $1 \frac{3}{5}$

3. $1 \frac{1}{5}$

4. $1 \frac{2}{3}$

5. 2

6. 4

7. 1

8. $1 \frac{4}{5}$

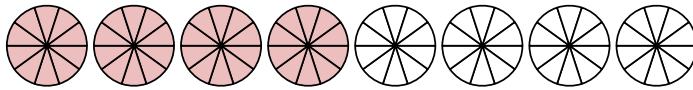
9. $2 \frac{1}{3}$

10. 2

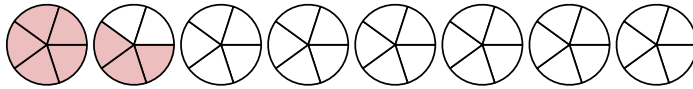
11. $1 \frac{1}{5}$

12. $1 \frac{1}{3}$

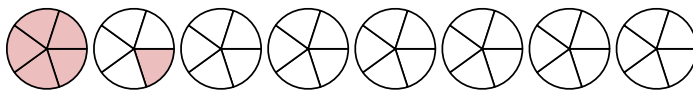
1) $\frac{8}{10} \times 5 =$



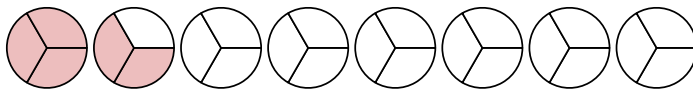
2) $\frac{2}{5} \times 4 =$



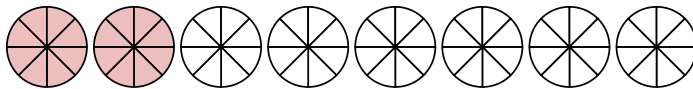
3) $\frac{1}{5} \times 6 =$



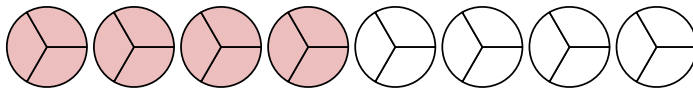
4) $\frac{1}{3} \times 5 =$



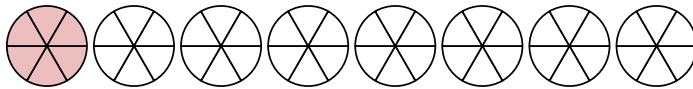
5) $\frac{4}{8} \times 4 =$



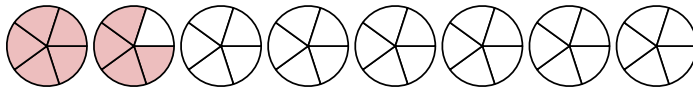
6) $\frac{2}{3} \times 6 =$



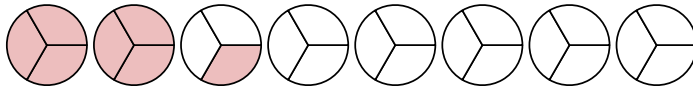
7) $\frac{3}{6} \times 2 =$



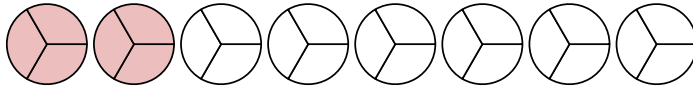
8) $\frac{3}{5} \times 3 =$



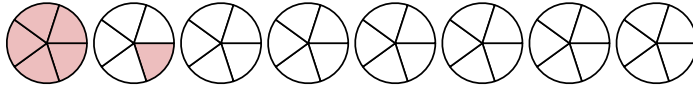
9) $\frac{1}{3} \times 7 =$



10) $\frac{1}{3} \times 6 =$



11) $\frac{2}{5} \times 3 =$



12) $\frac{1}{3} \times 4 =$

