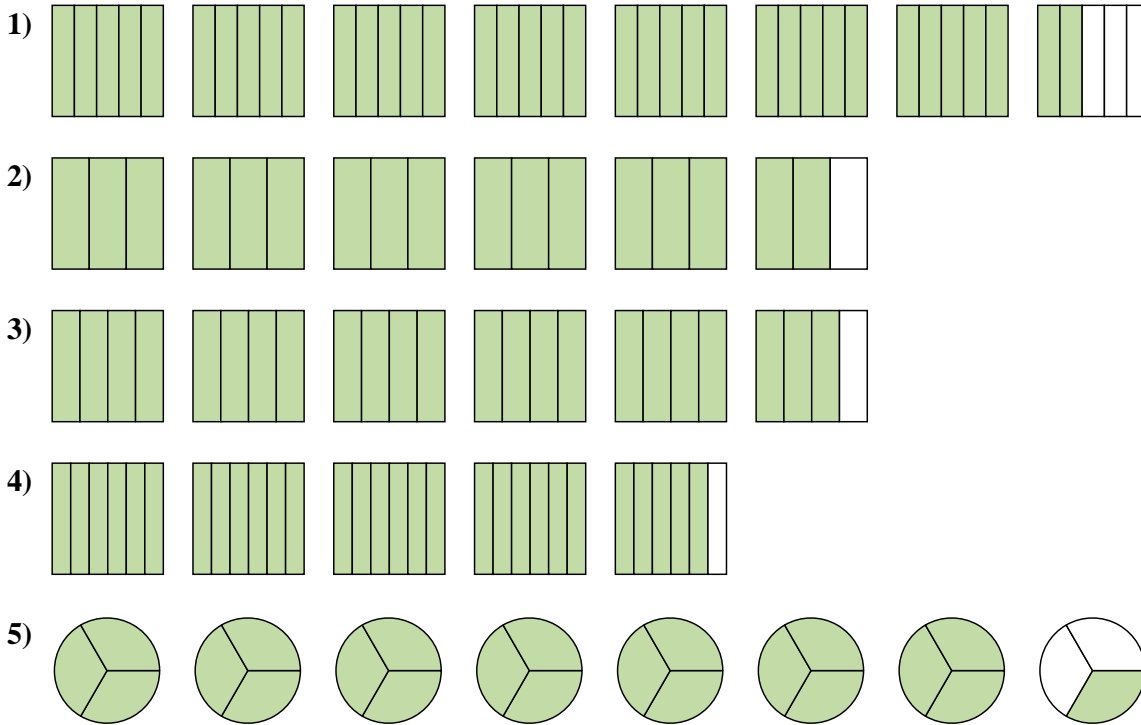




Scrivi ogni quantità come un numero misto.



Risposte

1. $7 \frac{2}{5}$

2. $5 \frac{2}{3}$

3. $5 \frac{3}{4}$

4. $4 \frac{5}{6}$

5. $7 \frac{1}{3}$

6. $\frac{16}{6}$

7. $\frac{24}{4}$

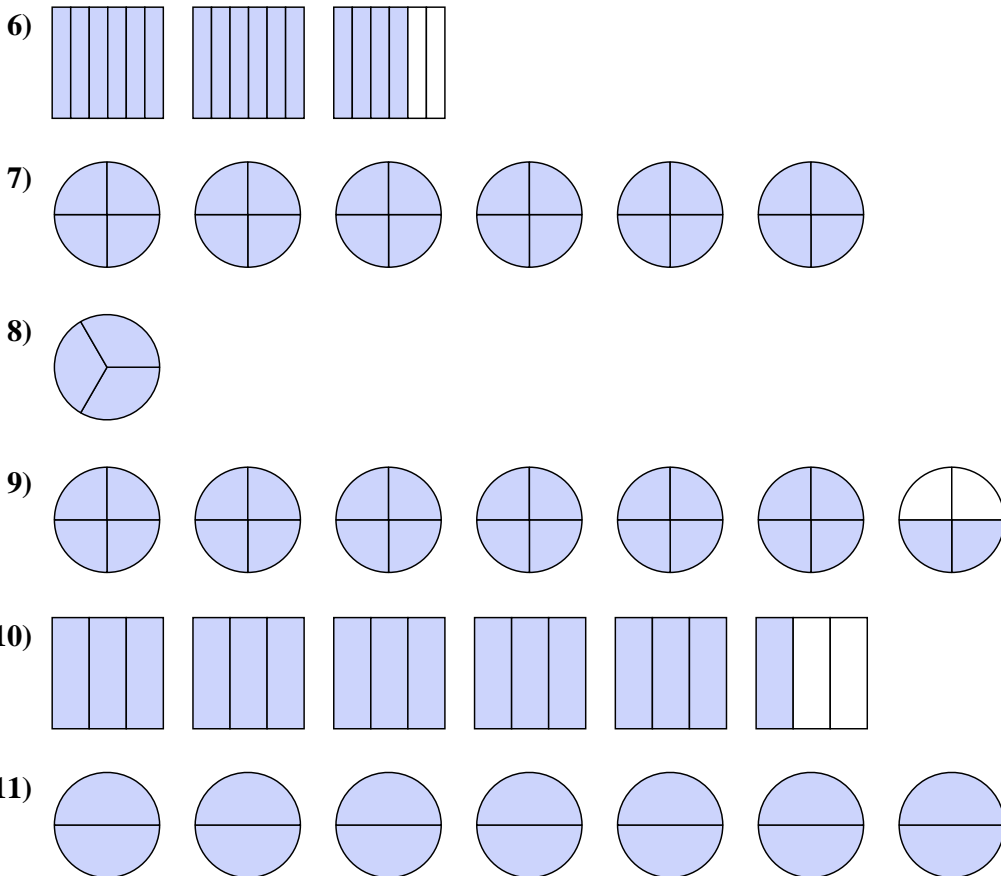
8. $\frac{3}{3}$

9. $\frac{26}{4}$

10. $\frac{16}{3}$

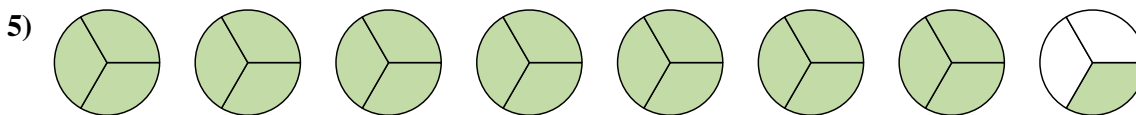
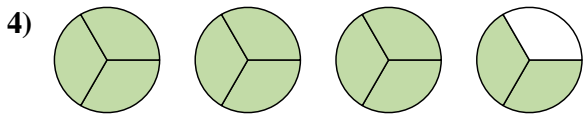
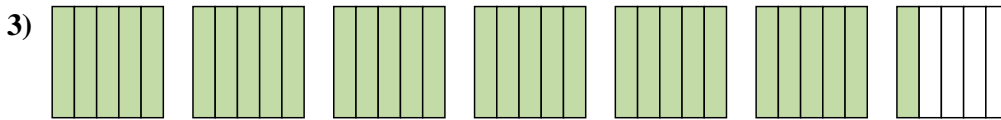
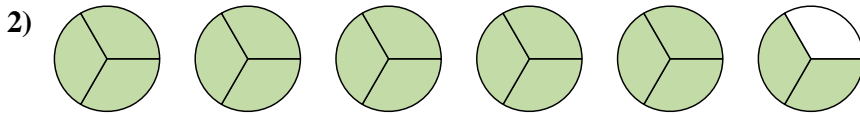
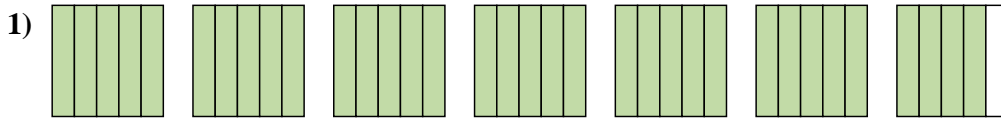
11. $\frac{14}{2}$

Scrivi ogni quantità come una frazione impropria.

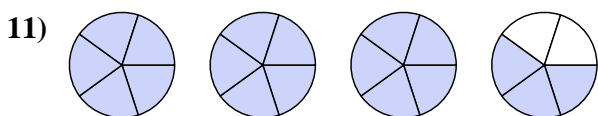
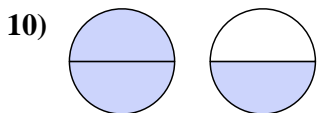
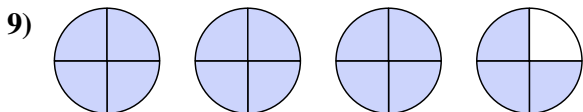
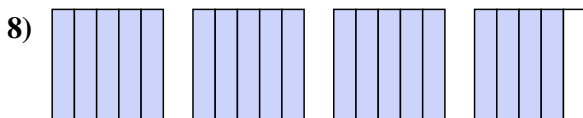
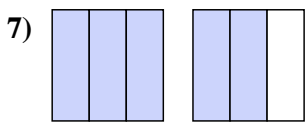
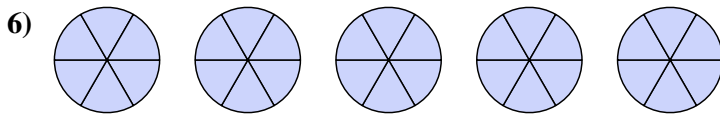




Scrivi ogni quantità come un numero misto.



Scrivi ogni quantità come una frazione impropria.



Risposte

1. $6 \frac{4}{5}$

2. $5 \frac{2}{3}$

3. $6 \frac{1}{5}$

4. $3 \frac{2}{3}$

5. $7 \frac{1}{3}$

6. $\frac{30}{6}$

7. $\frac{5}{3}$

8. $\frac{19}{5}$

9. $\frac{15}{4}$

10. $\frac{3}{2}$

11. $\frac{18}{5}$

