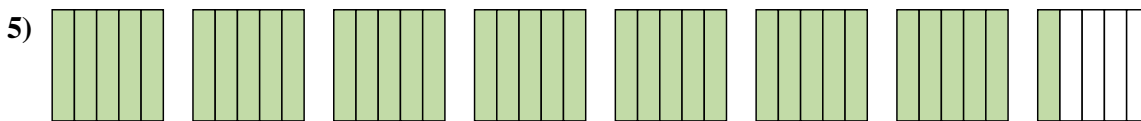
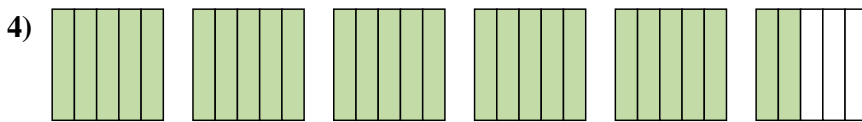
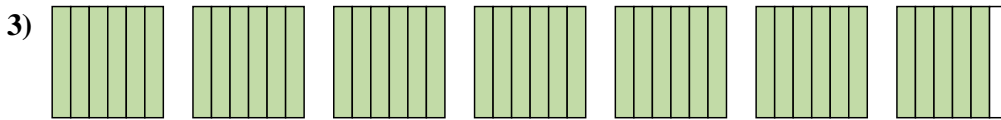
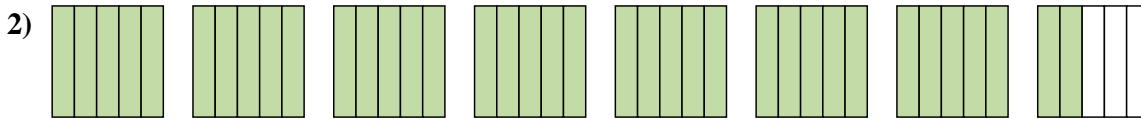
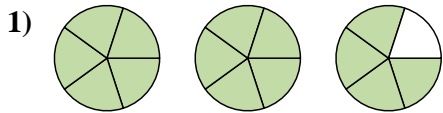


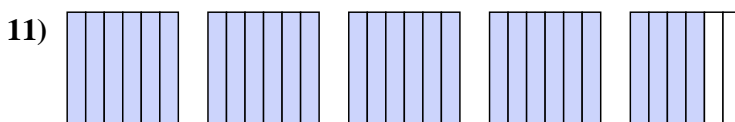
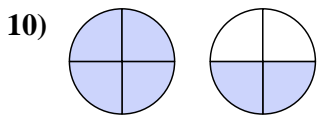
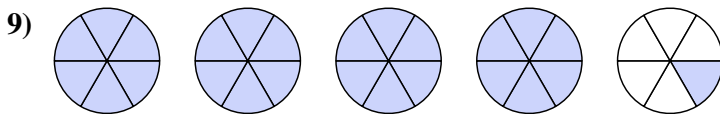
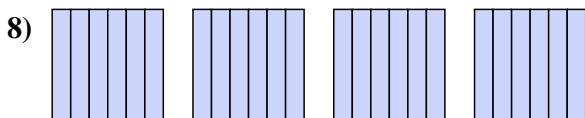
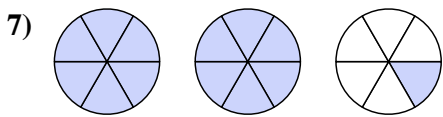
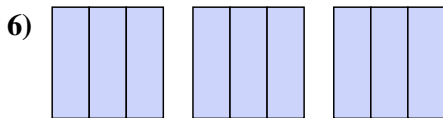




Scrivi ogni quantità come un numero misto.



Scrivi ogni quantità come una frazione impropria.



Risposte

1.  $2 \frac{4}{5}$

2.  $7 \frac{2}{5}$

3.  $6 \frac{5}{6}$

4.  $5 \frac{2}{5}$

5.  $7 \frac{1}{5}$

6.  $\frac{9}{3}$

7.  $\frac{13}{6}$

8.  $\frac{24}{6}$

9.  $\frac{25}{6}$

10.  $\frac{6}{4}$

11.  $\frac{28}{6}$