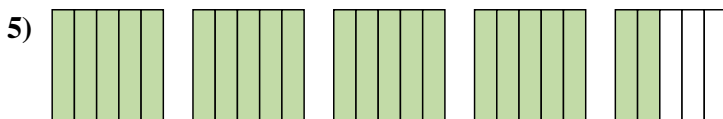
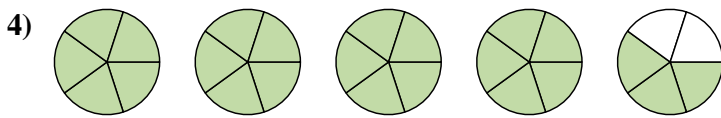
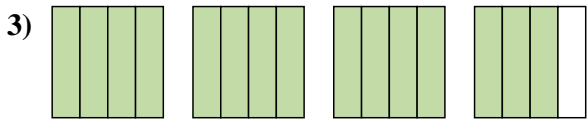
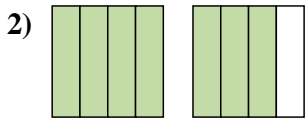
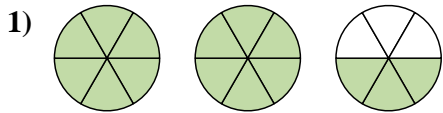


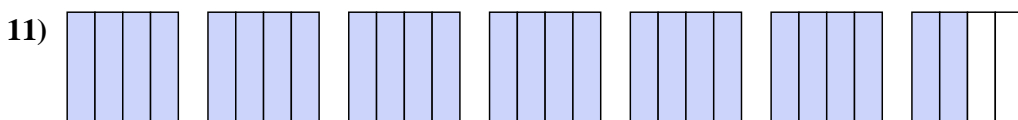
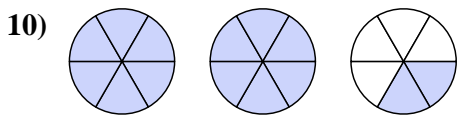
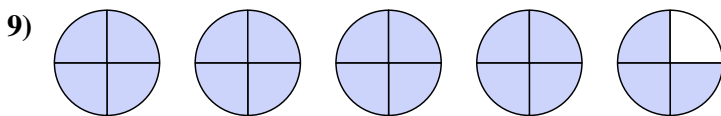
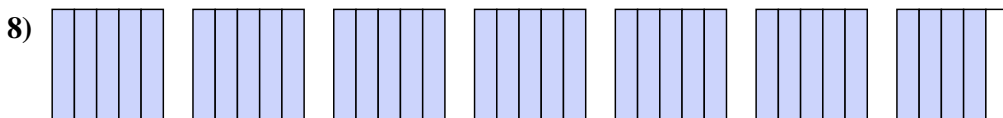
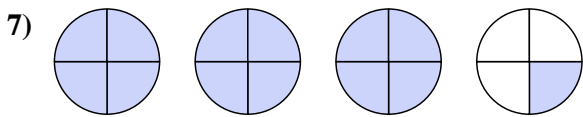
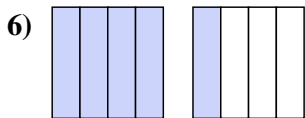




Scrivi ogni quantità come un numero misto.



Scrivi ogni quantità come una frazione impropria.



Risposte

1.  $2 \frac{3}{6}$

2.  $1 \frac{3}{4}$

3.  $3 \frac{3}{4}$

4.  $4 \frac{3}{5}$

5.  $4 \frac{2}{5}$

6.  $\frac{5}{4}$

7.  $\frac{13}{4}$

8.  $\frac{34}{5}$

9.  $\frac{19}{4}$

10.  $\frac{14}{6}$

11.  $\frac{26}{4}$