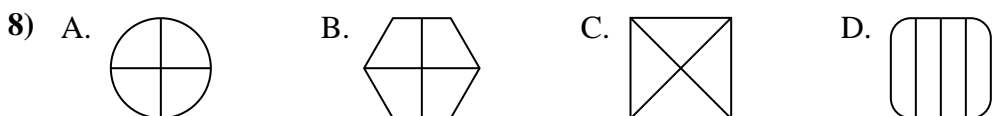

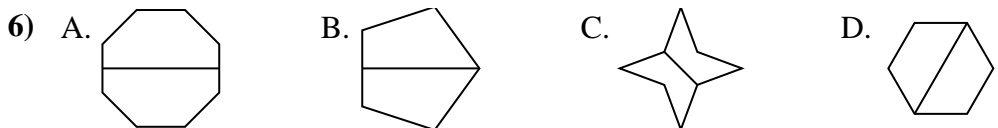
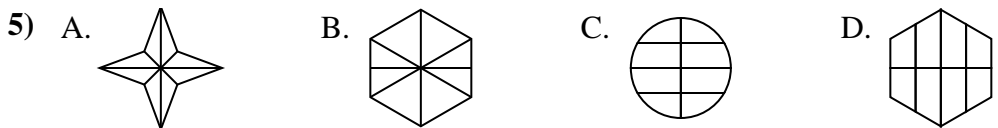
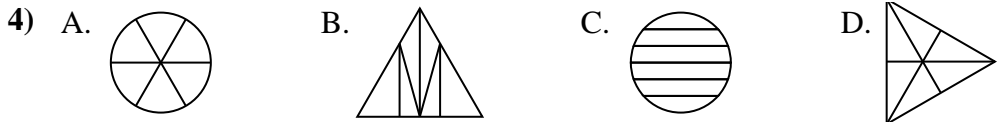
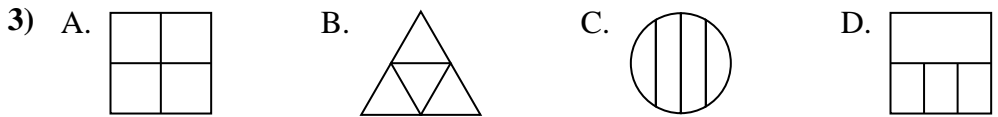

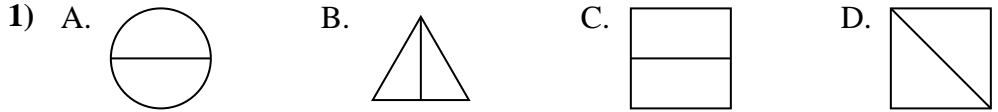




Determina quale scelta (scelte) mostri la forma suddivisa in modo che ogni parte abbia la stessa area. Se nessuna, scrivi 'nessuna'.

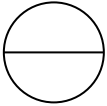
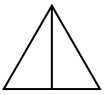

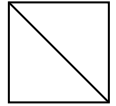


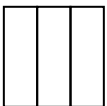

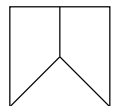

Risposte

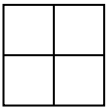
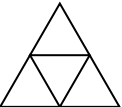
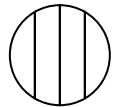
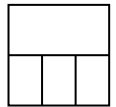
1. _____
2. _____
3. _____
4. _____
5. _____
6. _____
7. _____
8. _____

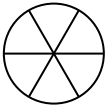

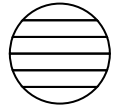
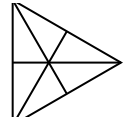



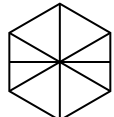
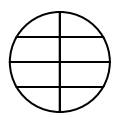
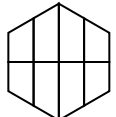
Determina quale scelta (scelte) mostri la forma suddivisa in modo che ogni parte abbia la stessa area. Se nessuna, scrivi 'nessuna'.

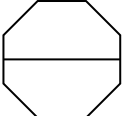
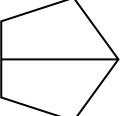
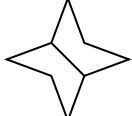
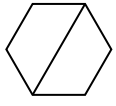
1) A.  B.  C.  D. 

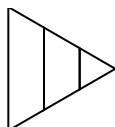


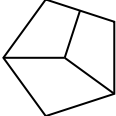
2) A.  B.  C.  D. 

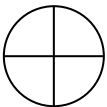
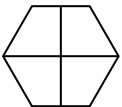
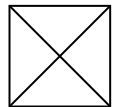
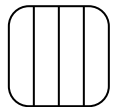
3) A.  B.  C.  D. 

4) A.  B.  C.  D. 

5) A.  B.  C.  D. 

6) A.  B.  C.  D. 

7) A.  B.  C.  D. 

8) A.  B.  C.  D. 

Risposte

1. A,B,C,D
2. A,B,D
3. A,B
4. A,D
5. A
6. A,B,C,D
7. nessuna
8. A,B,C