


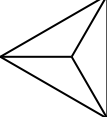
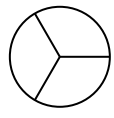
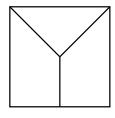
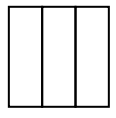


Determina quale scelta (scelte) mostri la forma suddivisa in modo che ogni parte abbia la stessa area. Se nessuna, scrivi 'nessuna'.

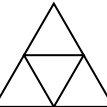
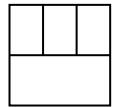

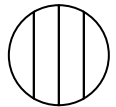
Risposte

1) A.  B.  C.  D. 


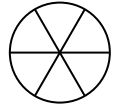
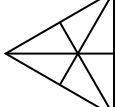

1. _____

2) A.  B.  C.  D. 

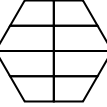
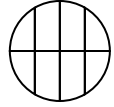
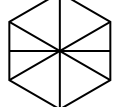

2. _____

3) A.  B.  C.  D. 


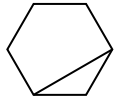
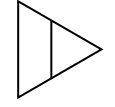

3. _____

4) A.  B.  C.  D. 

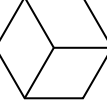

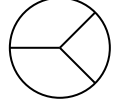
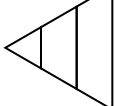
4. _____

5) A.  B.  C.  D. 

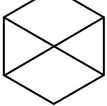
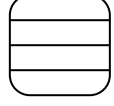

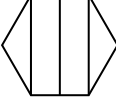
5. _____

6) A.  B.  C.  D. 

6. _____

7) A.  B.  C.  D. 

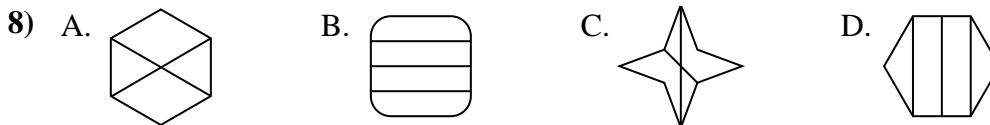

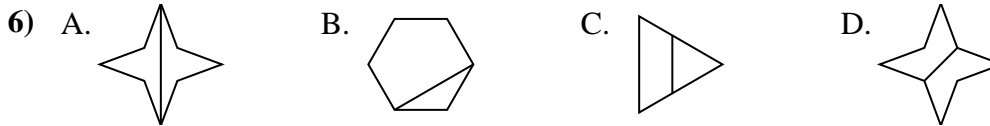
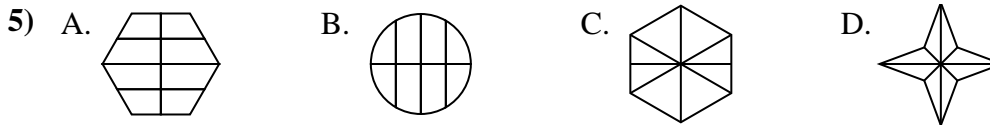
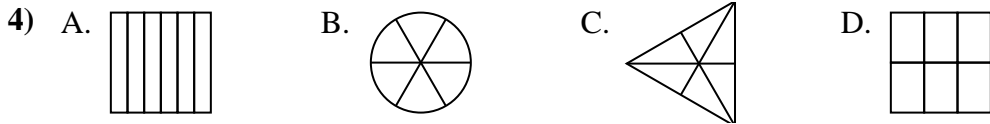
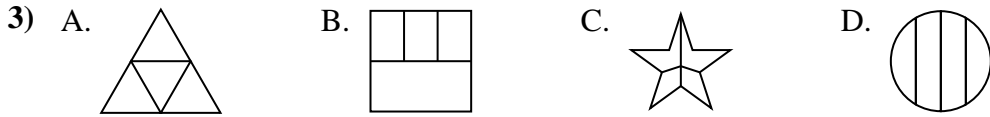
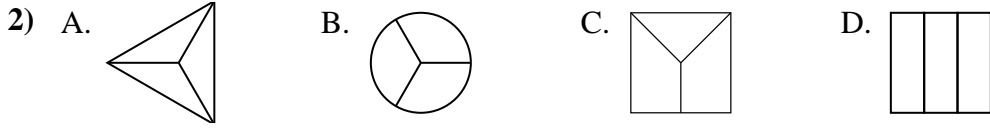
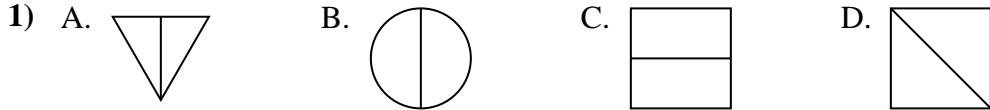
7. _____

8) A.  B.  C.  D. 

8. _____



Determina quale scelta (scelte) mostri la forma suddivisa in modo che ogni parte abbia la stessa area. Se nessuna, scrivi 'nessuna'.



Risposte

1. A,B,C,D

2. A,B,D

3. A

4. A,B,C,D

5. D

6. A,D

7. A

8. nessuna