




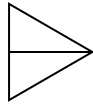
Determina quale scelta (scelte) mostri la forma suddivisa in modo che ogni parte abbia la stessa area. Se nessuna, scrivi "nessuna".

Risposte

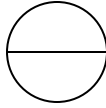
1) a.



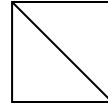
b.



c.



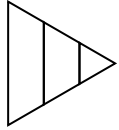
d.



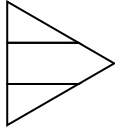
1. \_\_\_\_\_

2. \_\_\_\_\_


2) a.



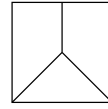
b.



c.



d.

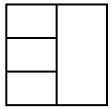


3. \_\_\_\_\_

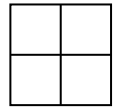
4. \_\_\_\_\_

5. \_\_\_\_\_

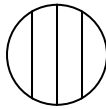
3) a.



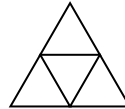
b.



c.



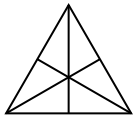
d.



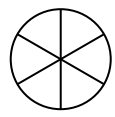
6. \_\_\_\_\_

7. \_\_\_\_\_

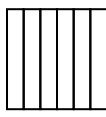
4) a.



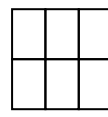
b.



c.



d.

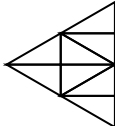


8. \_\_\_\_\_

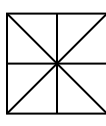
5) a.



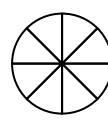
b.



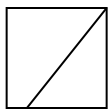
c.



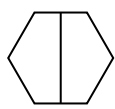
d.



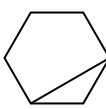
6) a.



b.



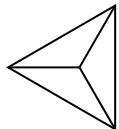
c.



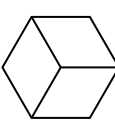
d.



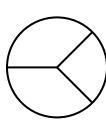
7) a.



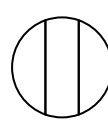
b.



c.



d.



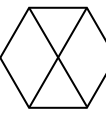
8) a.



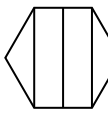
b.



c.




d.



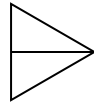


Determina quale scelta (scelte) mostri la forma suddivisa in modo che ogni parte abbia la stessa area. Se nessuna, scrivi "nessuna".

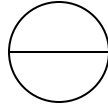
1) a.



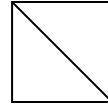
b.



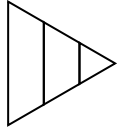
c.



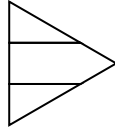
d.



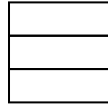
2) a.



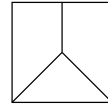
b.



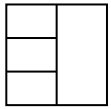
c.



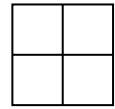
d.



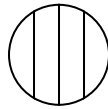
3) a.



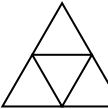
b.



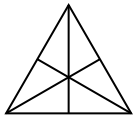
c.



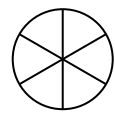
d.



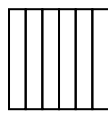
4) a.



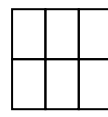
b.



c.



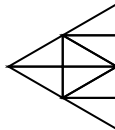
d.



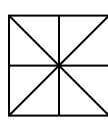
5) a.



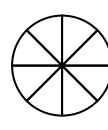
b.



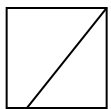
c.



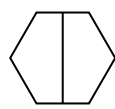
d.



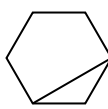
6) a.



b.



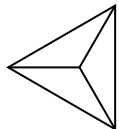
c.



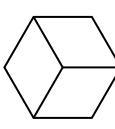
d.



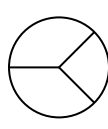
7) a.



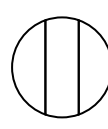
b.



c.



d.



8) a.



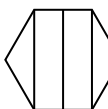
b.



c.



d.



Risposte

1. A,B,C,D

2. C

3. B,D

4. A,B,C,D

5. A,B,C,D

6. B

7. A,B

8. nessuna