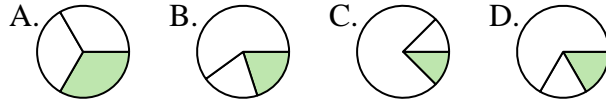




Determina quale lettera rappresenta correttamente la frazione.

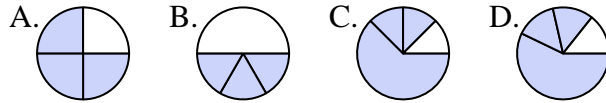
Risposte

1) Quale scelta rappresenta meglio $\frac{1}{3}$?



1. _____

2) Quale scelta rappresenta meglio $\frac{3}{4}$?



2. _____

3) Quale scelta rappresenta meglio $\frac{4}{6}$?



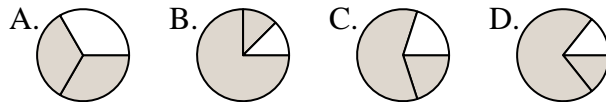
3. _____

4) Quale scelta rappresenta meglio $\frac{6}{8}$?



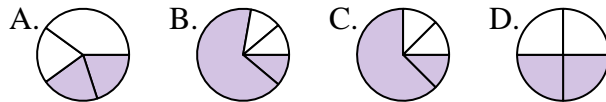
4. _____

5) Quale scelta rappresenta meglio $\frac{2}{3}$?



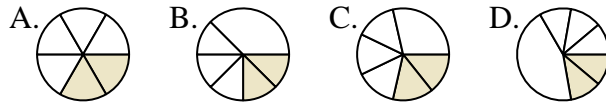
5. _____

6) Quale scelta rappresenta meglio $\frac{2}{4}$?



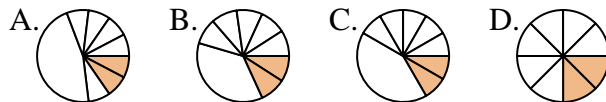
6. _____

7) Quale scelta rappresenta meglio $\frac{2}{6}$?



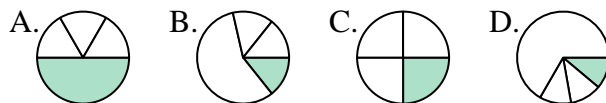
7. _____

8) Quale scelta rappresenta meglio $\frac{2}{8}$?



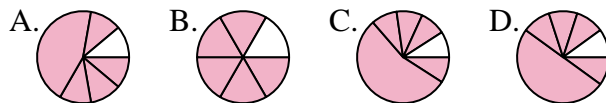
8. _____

9) Quale scelta rappresenta meglio $\frac{1}{4}$?



9. _____

10) Quale scelta rappresenta meglio $\frac{5}{6}$?



10. _____

11) Quale scelta rappresenta meglio $\frac{3}{8}$?



11. _____

12) Quale scelta rappresenta meglio $\frac{3}{6}$?



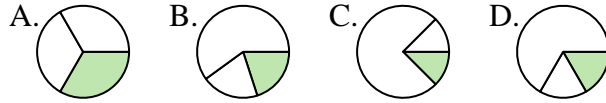
12. _____



Determina quale lettera rappresenta correttamente la frazione.

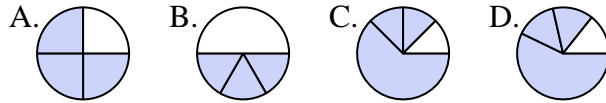
Risposte

1) Quale scelta rappresenta meglio $\frac{1}{3}$?



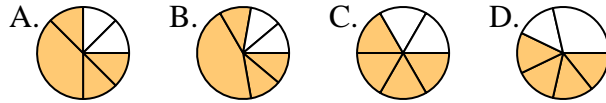
1. **A**

2) Quale scelta rappresenta meglio $\frac{3}{4}$?



2. **A**

3) Quale scelta rappresenta meglio $\frac{4}{6}$?



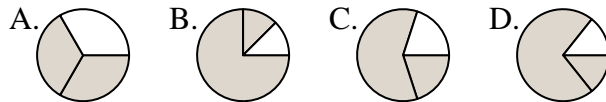
3. **C**

4) Quale scelta rappresenta meglio $\frac{6}{8}$?



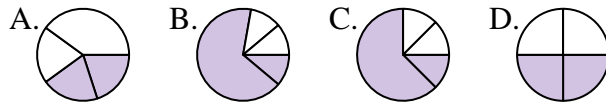
4. **D**

5) Quale scelta rappresenta meglio $\frac{2}{3}$?



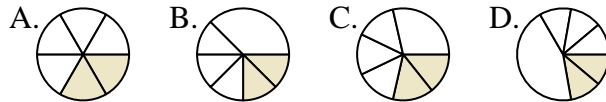
5. **A**

6) Quale scelta rappresenta meglio $\frac{2}{4}$?



6. **D**

7) Quale scelta rappresenta meglio $\frac{2}{6}$?



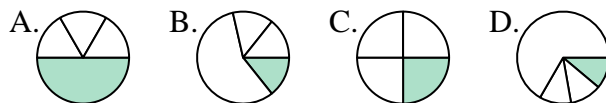
7. **A**

8) Quale scelta rappresenta meglio $\frac{2}{8}$?



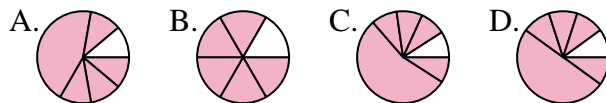
8. **D**

9) Quale scelta rappresenta meglio $\frac{1}{4}$?



9. **C**

10) Quale scelta rappresenta meglio $\frac{5}{6}$?



10. **B**

11) Quale scelta rappresenta meglio $\frac{3}{8}$?



11. **D**

12) Quale scelta rappresenta meglio $\frac{3}{6}$?



12. **C**