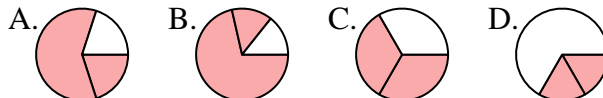




**Determina quale lettera rappresenta correttamente la frazione.**

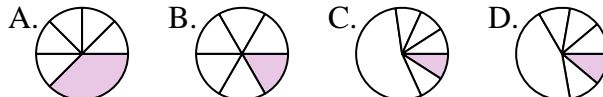
1) Quale scelta rappresenta meglio  $\frac{2}{3}$  ?



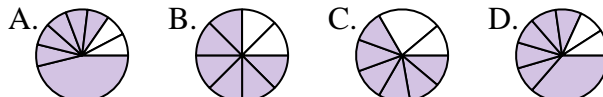
2) Quale scelta rappresenta meglio  $\frac{3}{4}$  ?



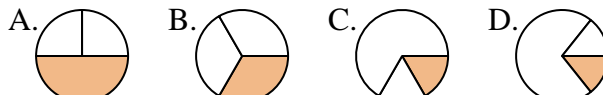
3) Quale scelta rappresenta meglio  $\frac{1}{6}$  ?



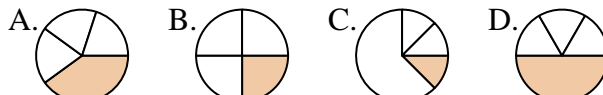
4) Quale scelta rappresenta meglio  $\frac{6}{8}$  ?



5) Quale scelta rappresenta meglio  $\frac{1}{3}$  ?



6) Quale scelta rappresenta meglio  $\frac{1}{4}$  ?



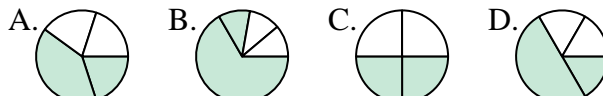
7) Quale scelta rappresenta meglio  $\frac{3}{6}$  ?



8) Quale scelta rappresenta meglio  $\frac{1}{8}$  ?



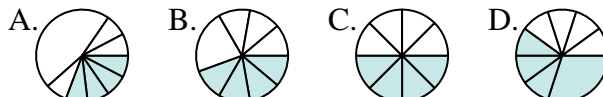
9) Quale scelta rappresenta meglio  $\frac{2}{4}$  ?



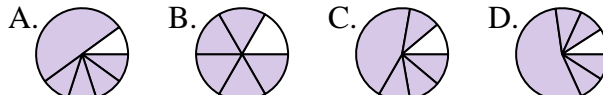
10) Quale scelta rappresenta meglio  $\frac{4}{6}$  ?



11) Quale scelta rappresenta meglio  $\frac{4}{8}$  ?



12) Quale scelta rappresenta meglio  $\frac{5}{6}$  ?



**Risposte**

1. \_\_\_\_\_

2. \_\_\_\_\_

3. \_\_\_\_\_

4. \_\_\_\_\_

5. \_\_\_\_\_

6. \_\_\_\_\_

7. \_\_\_\_\_

8. \_\_\_\_\_

9. \_\_\_\_\_

10. \_\_\_\_\_

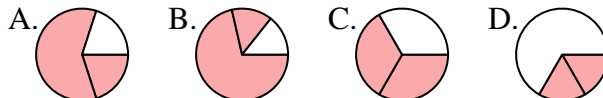
11. \_\_\_\_\_

12. \_\_\_\_\_



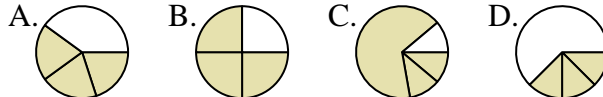
Determina quale lettera rappresenta correttamente la frazione.

1) Quale scelta rappresenta meglio  $\frac{2}{3}$ ?



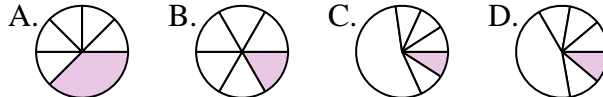
1.           **C**          

2) Quale scelta rappresenta meglio  $\frac{3}{4}$ ?



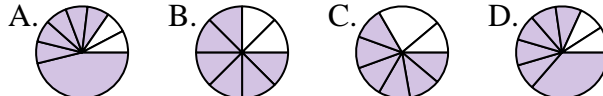
2.           **B**          

3) Quale scelta rappresenta meglio  $\frac{1}{6}$ ?



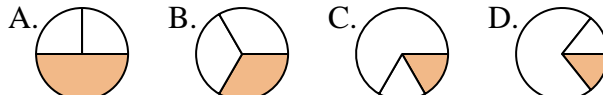
3.           **B**          

4) Quale scelta rappresenta meglio  $\frac{6}{8}$ ?



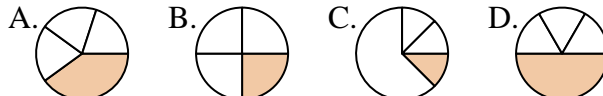
4.           **B**          

5) Quale scelta rappresenta meglio  $\frac{1}{3}$ ?



5.           **C**          

6) Quale scelta rappresenta meglio  $\frac{1}{4}$ ?



6.           **A**          

7) Quale scelta rappresenta meglio  $\frac{3}{6}$ ?



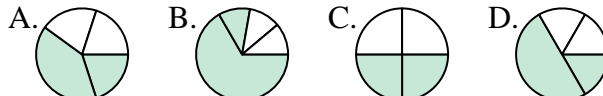
7.           **C**          

8) Quale scelta rappresenta meglio  $\frac{1}{8}$ ?



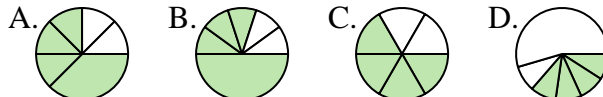
8.           **C**          

9) Quale scelta rappresenta meglio  $\frac{2}{4}$ ?



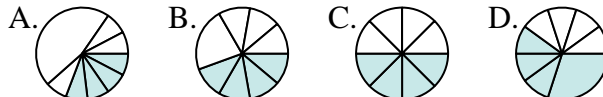
9.           **C**          

10) Quale scelta rappresenta meglio  $\frac{4}{6}$ ?



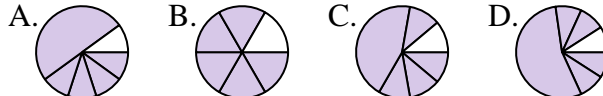
10.           **C**          

11) Quale scelta rappresenta meglio  $\frac{4}{8}$ ?



11.           **C**          

12) Quale scelta rappresenta meglio  $\frac{5}{6}$ ?



12.           **B**          

**Risposte**