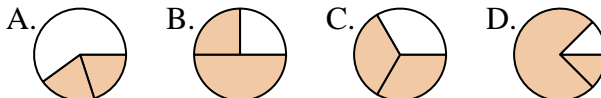




**Determina quale lettera rappresenta correttamente la frazione.**

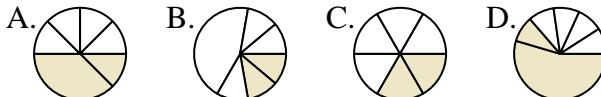
1) Quale scelta rappresenta meglio  $\frac{2}{3}$  ?



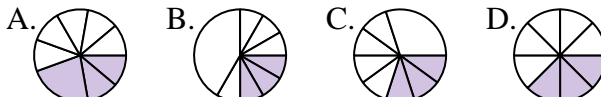
2) Quale scelta rappresenta meglio  $\frac{2}{4}$  ?



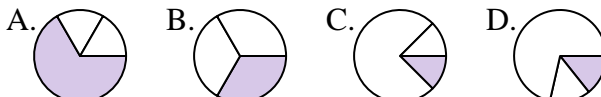
3) Quale scelta rappresenta meglio  $\frac{2}{6}$  ?



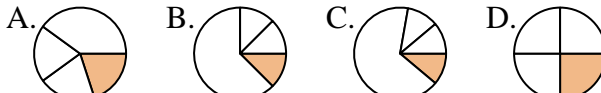
4) Quale scelta rappresenta meglio  $\frac{3}{8}$  ?



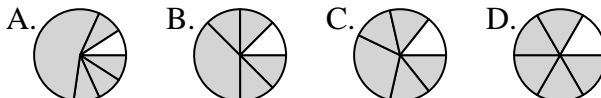
5) Quale scelta rappresenta meglio  $\frac{1}{3}$  ?



6) Quale scelta rappresenta meglio  $\frac{1}{4}$  ?



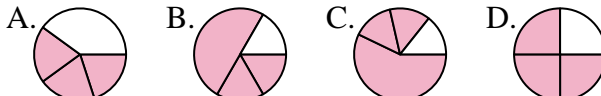
7) Quale scelta rappresenta meglio  $\frac{5}{6}$  ?



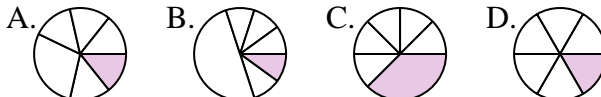
8) Quale scelta rappresenta meglio  $\frac{4}{8}$  ?



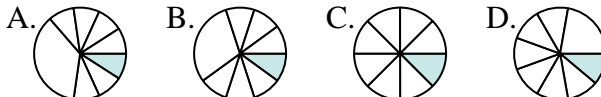
9) Quale scelta rappresenta meglio  $\frac{3}{4}$  ?



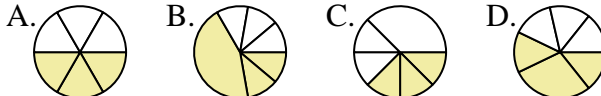
10) Quale scelta rappresenta meglio  $\frac{1}{6}$  ?



11) Quale scelta rappresenta meglio  $\frac{1}{8}$  ?



12) Quale scelta rappresenta meglio  $\frac{3}{6}$  ?



**Risposte**

1. \_\_\_\_\_

2. \_\_\_\_\_

3. \_\_\_\_\_

4. \_\_\_\_\_

5. \_\_\_\_\_

6. \_\_\_\_\_

7. \_\_\_\_\_

8. \_\_\_\_\_

9. \_\_\_\_\_

10. \_\_\_\_\_

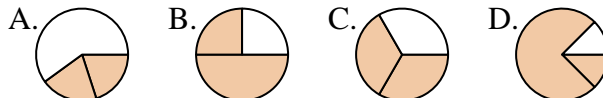
11. \_\_\_\_\_

12. \_\_\_\_\_



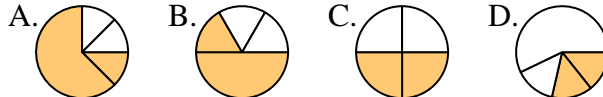
Determina quale lettera rappresenta correttamente la frazione.

1) Quale scelta rappresenta meglio  $\frac{2}{3}$ ?



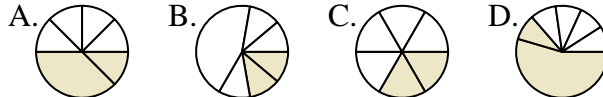
1.     **C**    

2) Quale scelta rappresenta meglio  $\frac{2}{4}$ ?



2.     **C**    

3) Quale scelta rappresenta meglio  $\frac{2}{6}$ ?



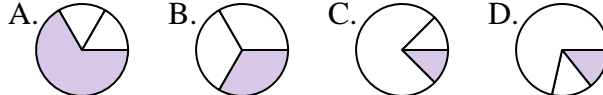
3.     **C**    

4) Quale scelta rappresenta meglio  $\frac{3}{8}$ ?



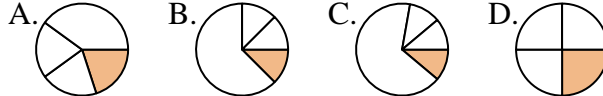
4.     **D**    

5) Quale scelta rappresenta meglio  $\frac{1}{3}$ ?



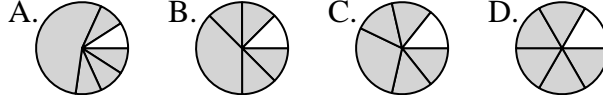
5.     **B**    

6) Quale scelta rappresenta meglio  $\frac{1}{4}$ ?



6.     **D**    

7) Quale scelta rappresenta meglio  $\frac{5}{6}$ ?



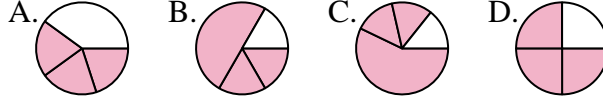
7.     **D**    

8) Quale scelta rappresenta meglio  $\frac{4}{8}$ ?



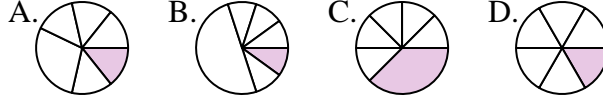
8.     **A**    

9) Quale scelta rappresenta meglio  $\frac{3}{4}$ ?



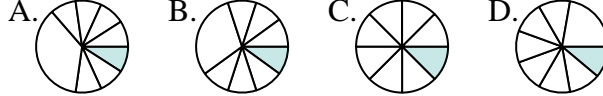
9.     **D**    

10) Quale scelta rappresenta meglio  $\frac{1}{6}$ ?



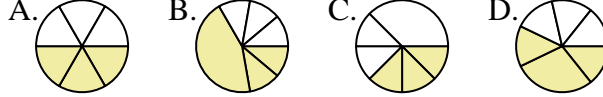
10.     **D**    

11) Quale scelta rappresenta meglio  $\frac{1}{8}$ ?



11.     **C**    

12) Quale scelta rappresenta meglio  $\frac{3}{6}$ ?



12.     **A**    

**Risposte**