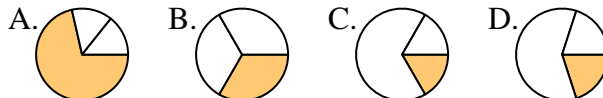


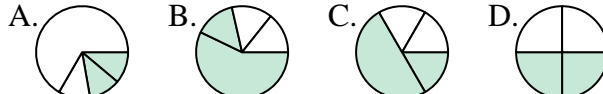


**Determina quale lettera rappresenta correttamente la frazione.**

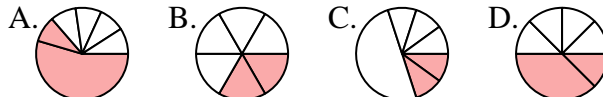
1) Quale scelta rappresenta meglio  $\frac{1}{3}$  ?



2) Quale scelta rappresenta meglio  $\frac{2}{4}$  ?



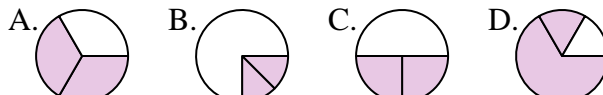
3) Quale scelta rappresenta meglio  $\frac{2}{6}$  ?



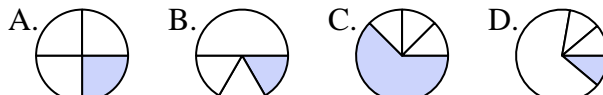
4) Quale scelta rappresenta meglio  $\frac{1}{8}$  ?



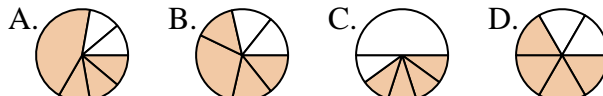
5) Quale scelta rappresenta meglio  $\frac{2}{3}$  ?



6) Quale scelta rappresenta meglio  $\frac{1}{4}$  ?



7) Quale scelta rappresenta meglio  $\frac{4}{6}$  ?



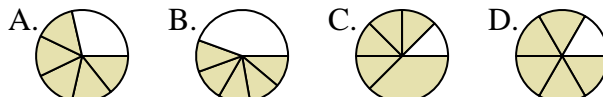
8) Quale scelta rappresenta meglio  $\frac{6}{8}$  ?



9) Quale scelta rappresenta meglio  $\frac{3}{4}$  ?



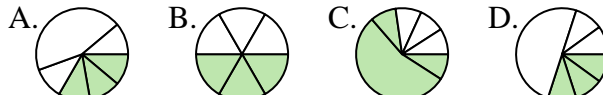
10) Quale scelta rappresenta meglio  $\frac{5}{6}$  ?



11) Quale scelta rappresenta meglio  $\frac{4}{8}$  ?



12) Quale scelta rappresenta meglio  $\frac{3}{6}$  ?



**Risposte**

1. \_\_\_\_\_

2. \_\_\_\_\_

3. \_\_\_\_\_

4. \_\_\_\_\_

5. \_\_\_\_\_

6. \_\_\_\_\_

7. \_\_\_\_\_

8. \_\_\_\_\_

9. \_\_\_\_\_

10. \_\_\_\_\_

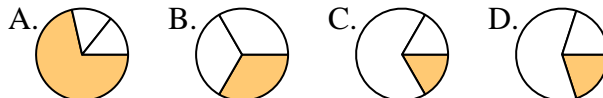
11. \_\_\_\_\_

12. \_\_\_\_\_

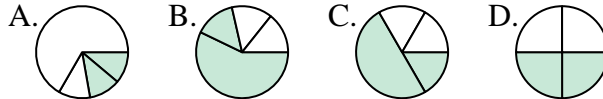


Determina quale lettera rappresenta correttamente la frazione.

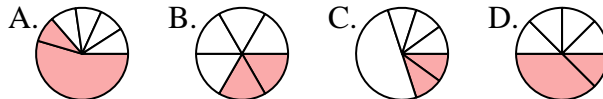
1) Quale scelta rappresenta meglio  $\frac{1}{3}$ ?



2) Quale scelta rappresenta meglio  $\frac{2}{4}$ ?



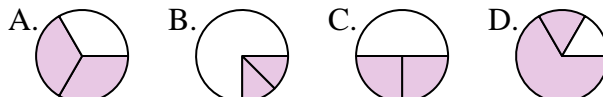
3) Quale scelta rappresenta meglio  $\frac{2}{6}$ ?



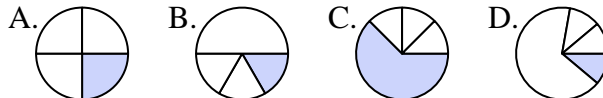
4) Quale scelta rappresenta meglio  $\frac{1}{8}$ ?



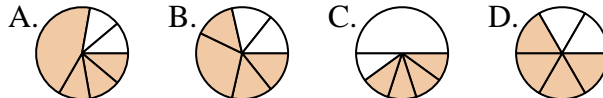
5) Quale scelta rappresenta meglio  $\frac{2}{3}$ ?



6) Quale scelta rappresenta meglio  $\frac{1}{4}$ ?



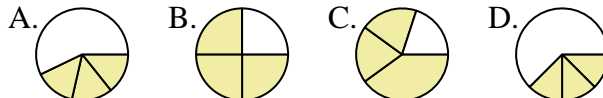
7) Quale scelta rappresenta meglio  $\frac{4}{6}$ ?



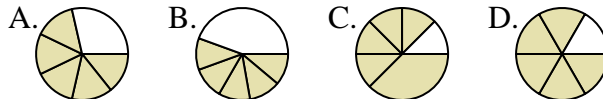
8) Quale scelta rappresenta meglio  $\frac{6}{8}$ ?



9) Quale scelta rappresenta meglio  $\frac{3}{4}$ ?



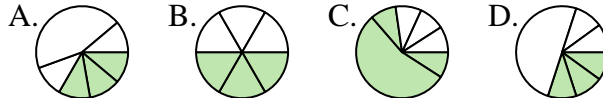
10) Quale scelta rappresenta meglio  $\frac{5}{6}$ ?



11) Quale scelta rappresenta meglio  $\frac{4}{8}$ ?



12) Quale scelta rappresenta meglio  $\frac{3}{6}$ ?



**Risposte**

1. **B**

2. **D**

3. **B**

4. **C**

5. **A**

6. **A**

7. **D**

8. **C**

9. **B**

10. **D**

11. **D**

12. **B**