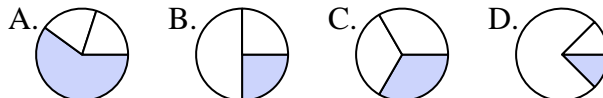




Determina quale lettera rappresenta correttamente la frazione.

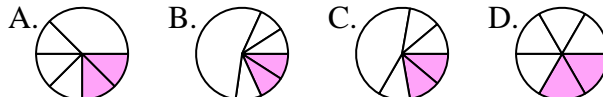
1) Quale scelta rappresenta meglio $\frac{1}{3}$?



2) Quale scelta rappresenta meglio $\frac{1}{4}$?



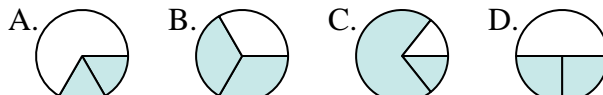
3) Quale scelta rappresenta meglio $\frac{2}{6}$?



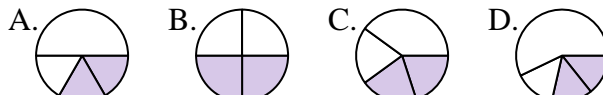
4) Quale scelta rappresenta meglio $\frac{4}{8}$?



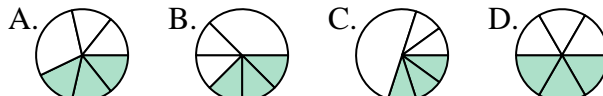
5) Quale scelta rappresenta meglio $\frac{2}{3}$?



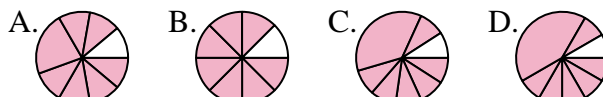
6) Quale scelta rappresenta meglio $\frac{2}{4}$?



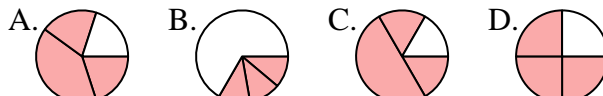
7) Quale scelta rappresenta meglio $\frac{3}{6}$?



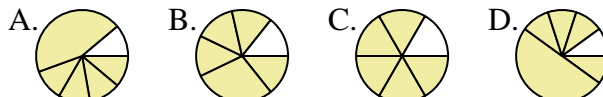
8) Quale scelta rappresenta meglio $\frac{7}{8}$?



9) Quale scelta rappresenta meglio $\frac{3}{4}$?



10) Quale scelta rappresenta meglio $\frac{5}{6}$?



11) Quale scelta rappresenta meglio $\frac{3}{8}$?



12) Quale scelta rappresenta meglio $\frac{1}{6}$?



Risposte

1. _____

2. _____

3. _____

4. _____

5. _____

6. _____

7. _____

8. _____

9. _____

10. _____

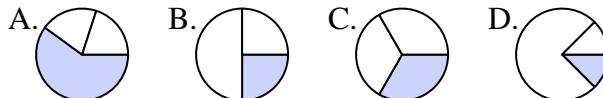
11. _____

12. _____



Determina quale lettera rappresenta correttamente la frazione.

1) Quale scelta rappresenta meglio $\frac{1}{3}$?



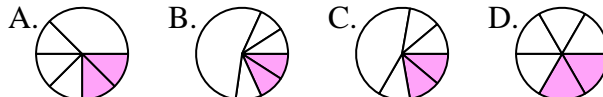
1. **C**

2) Quale scelta rappresenta meglio $\frac{1}{4}$?



2. **B**

3) Quale scelta rappresenta meglio $\frac{2}{6}$?



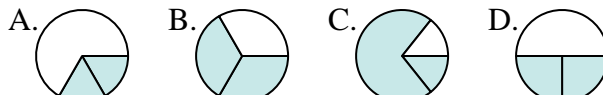
3. **D**

4) Quale scelta rappresenta meglio $\frac{4}{8}$?



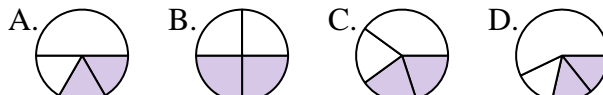
4. **D**

5) Quale scelta rappresenta meglio $\frac{2}{3}$?



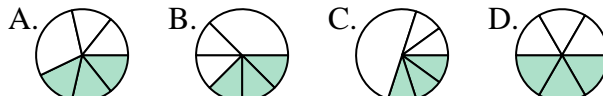
5. **B**

6) Quale scelta rappresenta meglio $\frac{2}{4}$?



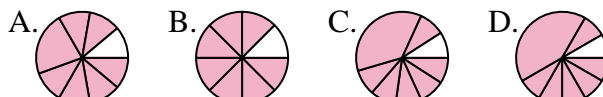
6. **B**

7) Quale scelta rappresenta meglio $\frac{3}{6}$?



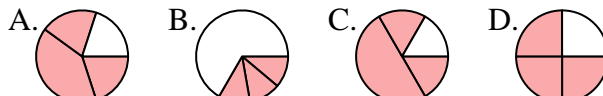
7. **D**

8) Quale scelta rappresenta meglio $\frac{7}{8}$?



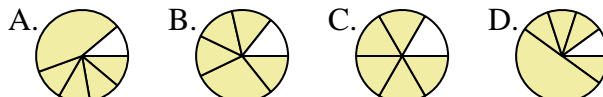
8. **B**

9) Quale scelta rappresenta meglio $\frac{3}{4}$?



9. **D**

10) Quale scelta rappresenta meglio $\frac{5}{6}$?



10. **C**

11) Quale scelta rappresenta meglio $\frac{3}{8}$?



11. **A**

12) Quale scelta rappresenta meglio $\frac{1}{6}$?



12. **A**

Risposte