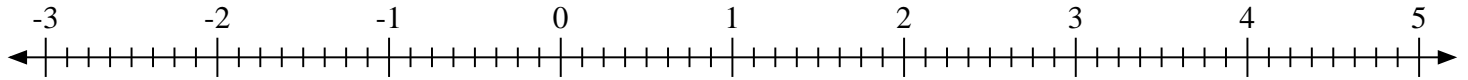
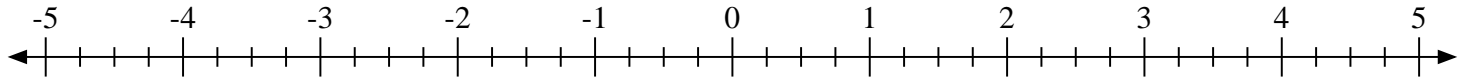
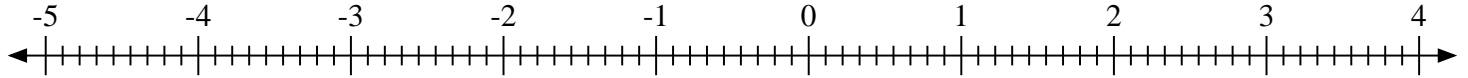
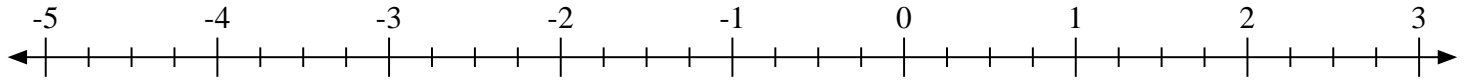
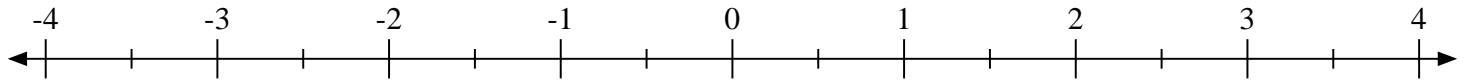
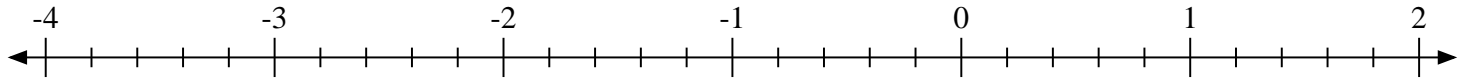
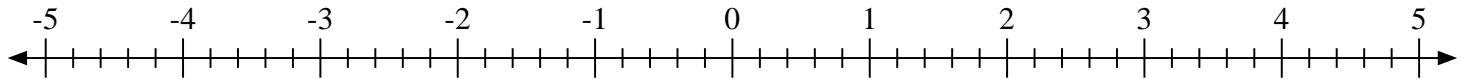
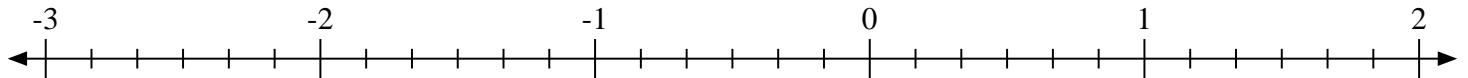
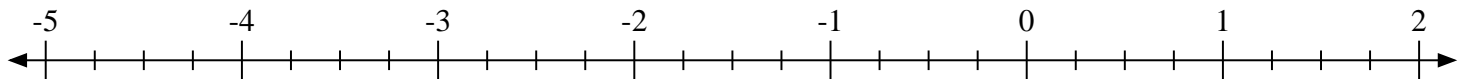
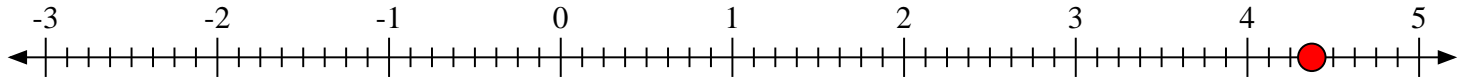
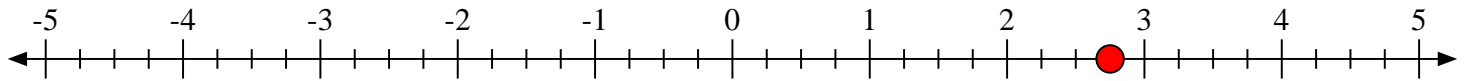
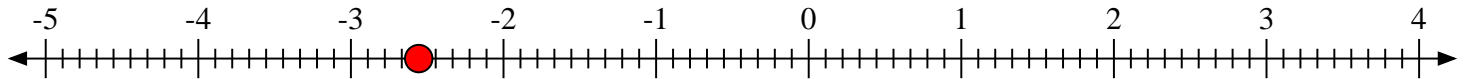
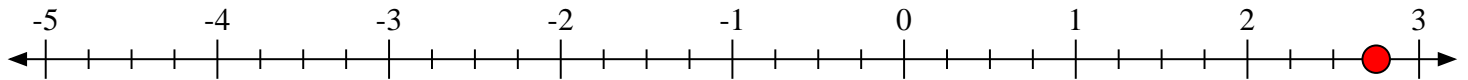
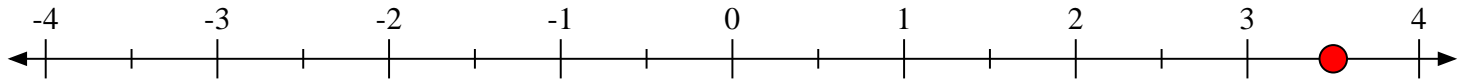
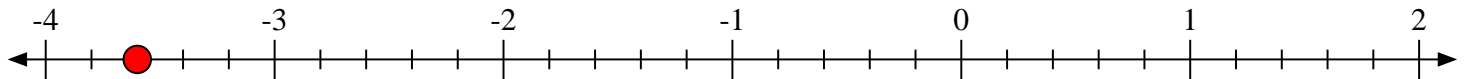
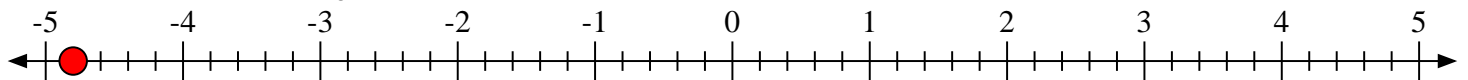
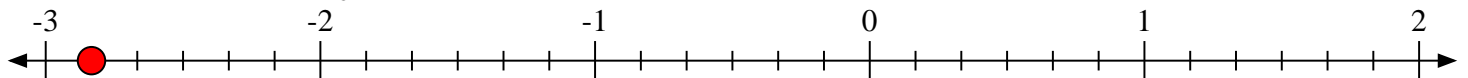


**Scrivi la posizione di ogni frazione.**1) Indica la posizione di $4\frac{3}{8}$ 2) Indica la posizione di $2\frac{3}{4}$ 3) Indica la posizione di $-2\frac{5}{9}$ 4) Indica la posizione di $2\frac{3}{4}$ 5) Indica la posizione di $3\frac{1}{2}$ 6) Indica la posizione di $-3\frac{3}{5}$ 7) Indica la posizione di $-4\frac{4}{5}$ 8) Indica la posizione di $-2\frac{5}{6}$ 9) Indica la posizione di $-3\frac{2}{4}$ 



Scrivi la posizione di ogni frazione.

1) Indica la posizione di $4\frac{3}{8}$ 2) Indica la posizione di $2\frac{3}{4}$ 3) Indica la posizione di $-2\frac{5}{9}$ 4) Indica la posizione di $2\frac{3}{4}$ 5) Indica la posizione di $3\frac{1}{2}$ 6) Indica la posizione di $-3\frac{3}{5}$ 7) Indica la posizione di $-4\frac{4}{5}$ 8) Indica la posizione di $-2\frac{5}{6}$ 9) Indica la posizione di $-3\frac{2}{4}$ 