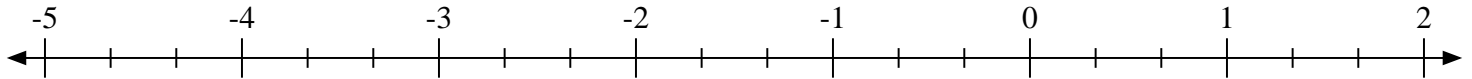


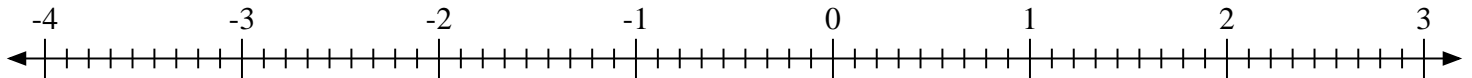


Scrivi la posizione di ogni frazione.

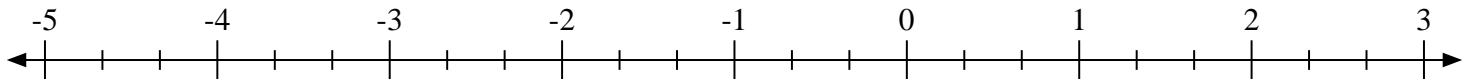
1) Indica la posizione di $-3\frac{2}{3}$



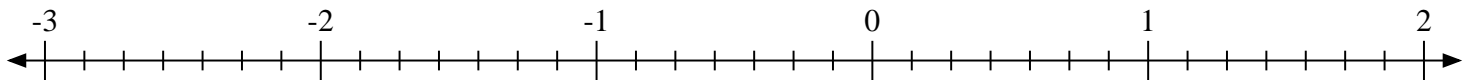
2) Indica la posizione di $1\frac{8}{9}$



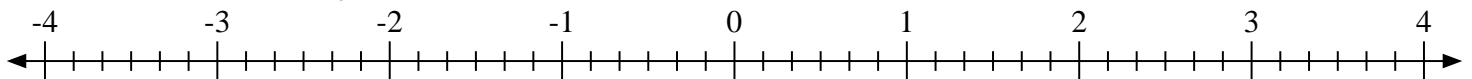
3) Indica la posizione di $-4\frac{2}{3}$



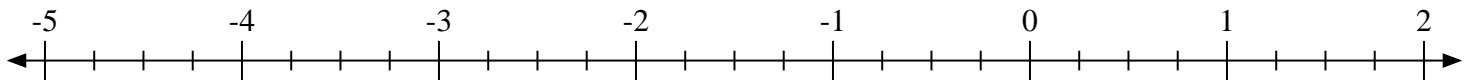
4) Indica la posizione di $-1\frac{5}{7}$



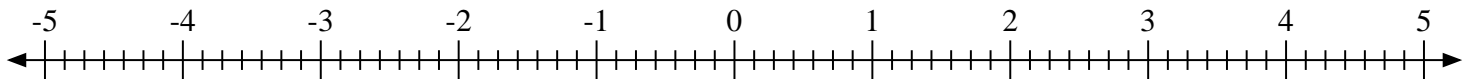
5) Indica la posizione di $-3\frac{4}{6}$



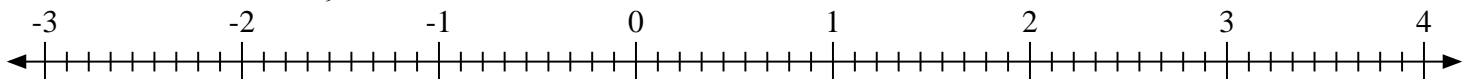
6) Indica la posizione di $1\frac{2}{4}$



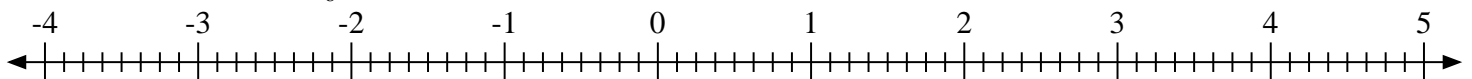
7) Indica la posizione di $3\frac{3}{7}$



8) Indica la posizione di $3\frac{8}{9}$

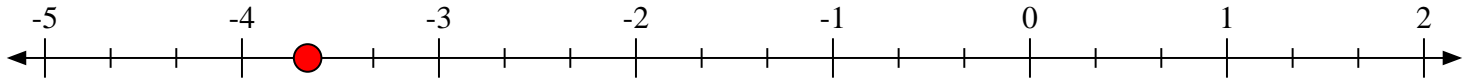
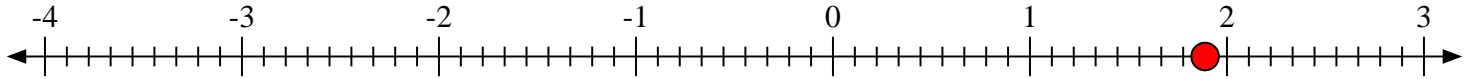
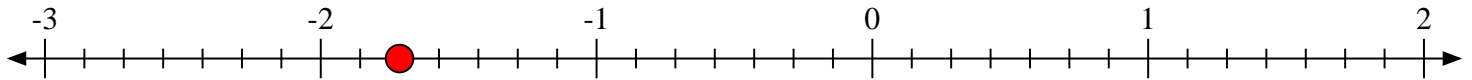
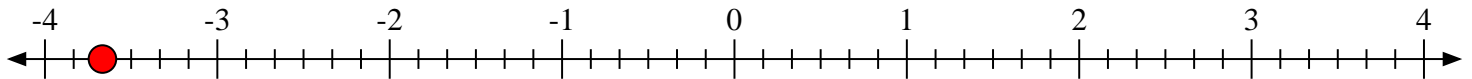
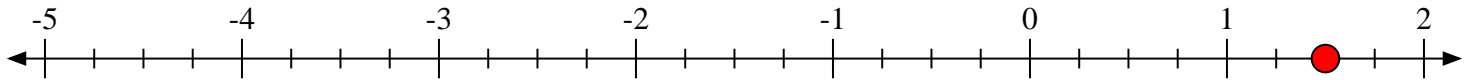
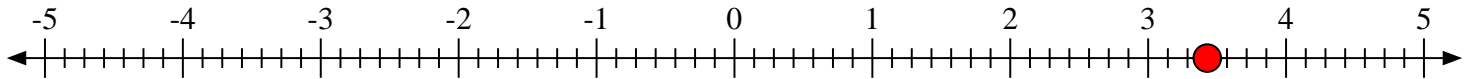
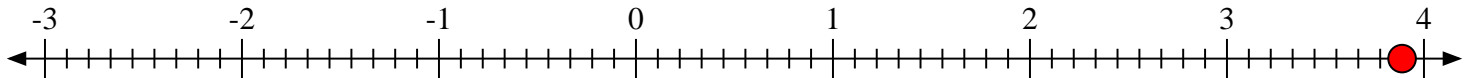


9) Indica la posizione di $2\frac{3}{8}$





Scrivi la posizione di ogni frazione.

1) Indica la posizione di $-3\frac{2}{3}$ 2) Indica la posizione di $1\frac{8}{9}$ 3) Indica la posizione di $-4\frac{2}{3}$ 4) Indica la posizione di $-1\frac{5}{7}$ 5) Indica la posizione di $-3\frac{4}{6}$ 6) Indica la posizione di $1\frac{2}{4}$ 7) Indica la posizione di $3\frac{3}{7}$ 8) Indica la posizione di $3\frac{8}{9}$ 9) Indica la posizione di $2\frac{3}{8}$ 