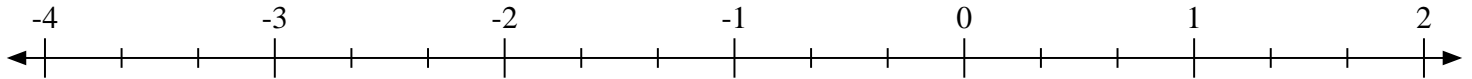


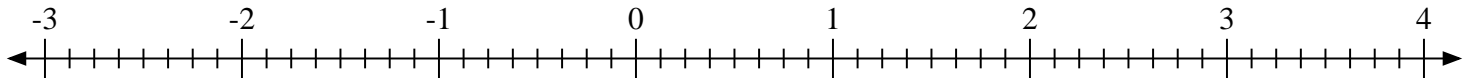


Scrivi la posizione di ogni frazione.

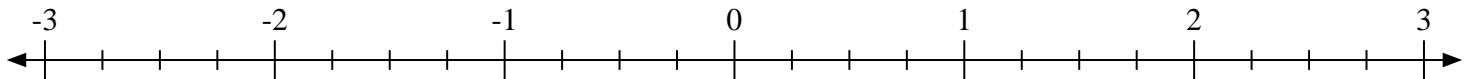
1) Indica la posizione di  $-1\frac{2}{3}$



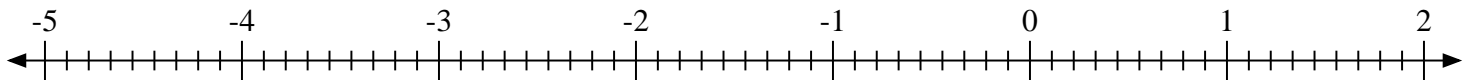
2) Indica la posizione di  $-1\frac{1}{8}$



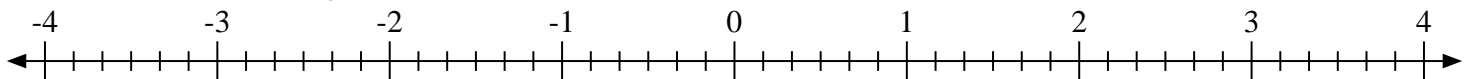
3) Indica la posizione di  $0\frac{2}{4}$



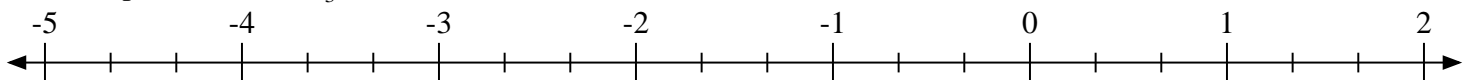
4) Indica la posizione di  $-3\frac{6}{9}$



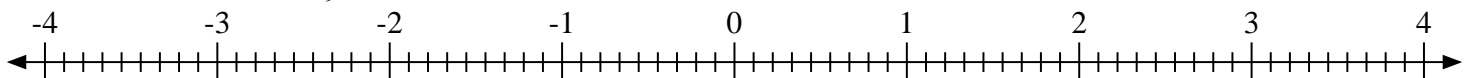
5) Indica la posizione di  $3\frac{1}{6}$



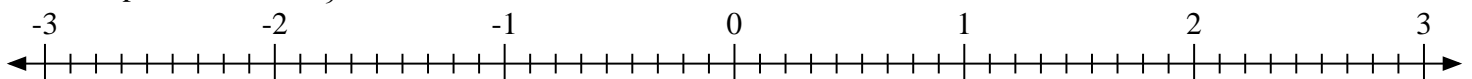
6) Indica la posizione di  $1\frac{1}{3}$



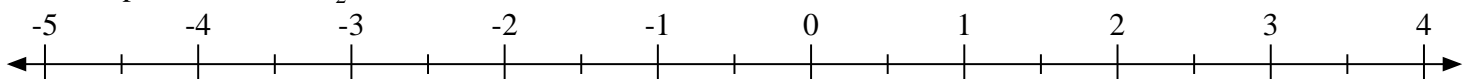
7) Indica la posizione di  $3\frac{1}{9}$



8) Indica la posizione di  $2\frac{4}{9}$

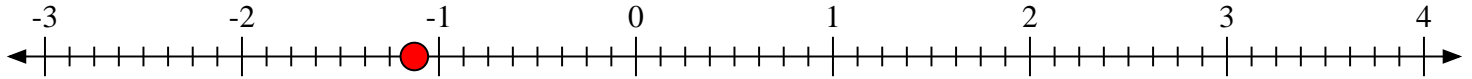
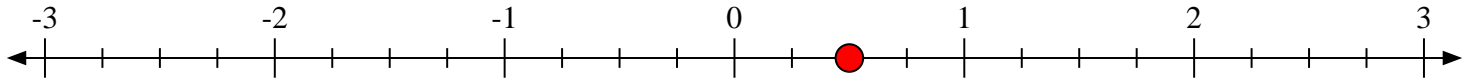
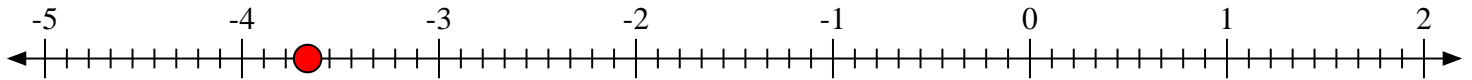
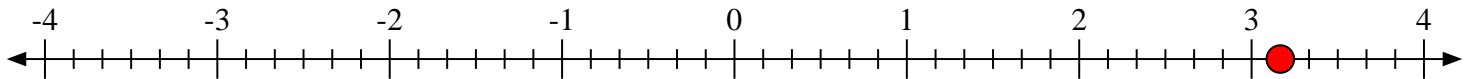
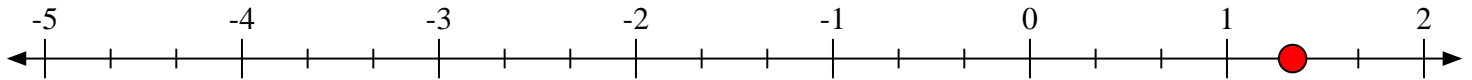
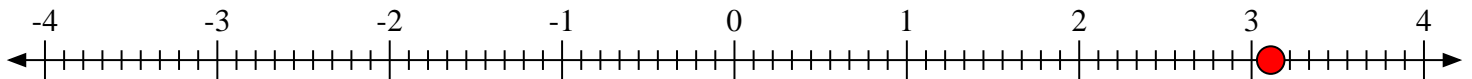
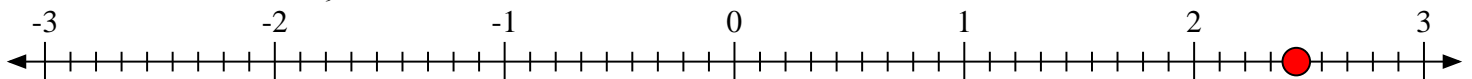


9) Indica la posizione di  $-4\frac{1}{2}$





Scrivi la posizione di ogni frazione.

1) Indica la posizione di  $-1\frac{2}{3}$ 2) Indica la posizione di  $-1\frac{1}{8}$ 3) Indica la posizione di  $0\frac{2}{4}$ 4) Indica la posizione di  $-3\frac{6}{9}$ 5) Indica la posizione di  $3\frac{1}{6}$ 6) Indica la posizione di  $1\frac{1}{3}$ 7) Indica la posizione di  $3\frac{1}{9}$ 8) Indica la posizione di  $2\frac{4}{9}$ 9) Indica la posizione di  $-4\frac{1}{2}$ 