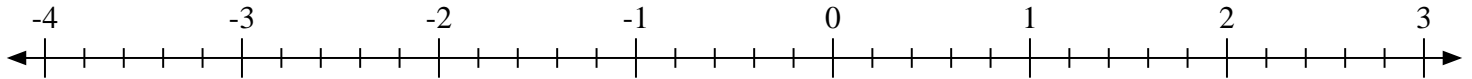


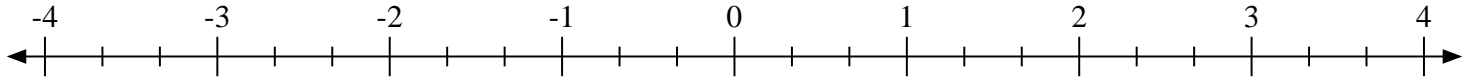


Scrivi la posizione di ogni frazione.

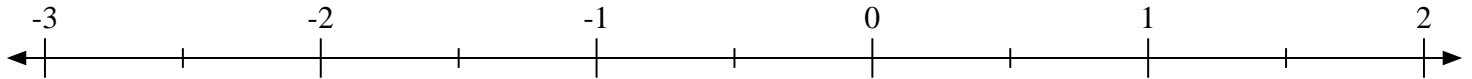
1) Indica la posizione di  $-3\frac{2}{5}$



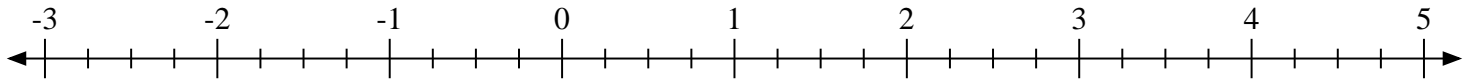
2) Indica la posizione di  $-1\frac{2}{3}$



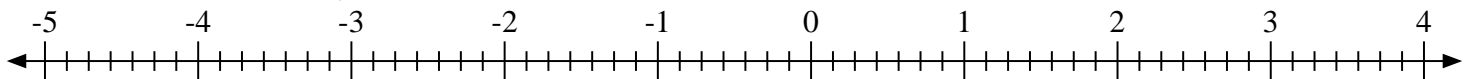
3) Indica la posizione di  $1\frac{1}{2}$



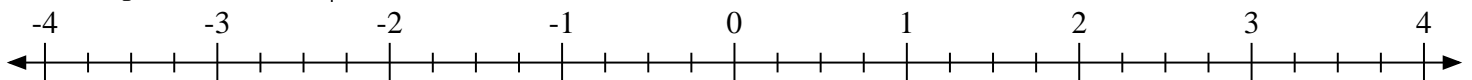
4) Indica la posizione di  $2\frac{1}{4}$



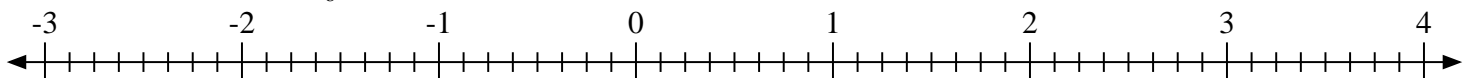
5) Indica la posizione di  $-3\frac{5}{7}$



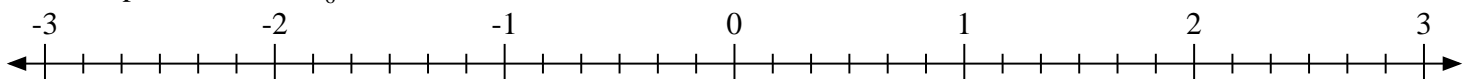
6) Indica la posizione di  $2\frac{2}{4}$



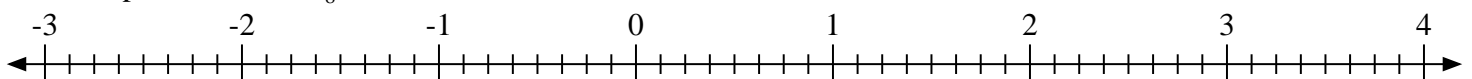
7) Indica la posizione di  $0\frac{3}{8}$



8) Indica la posizione di  $1\frac{5}{6}$

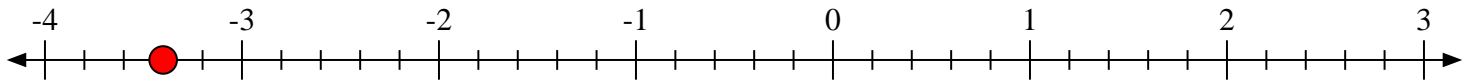
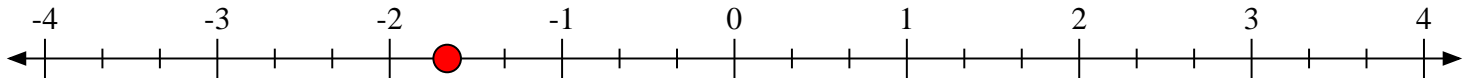
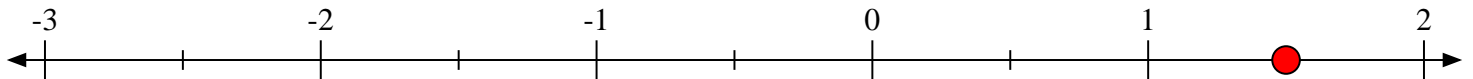
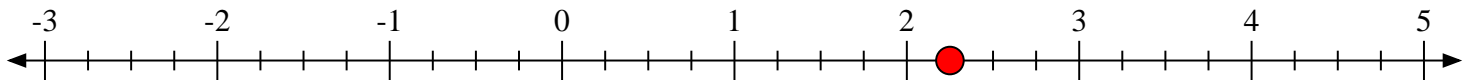
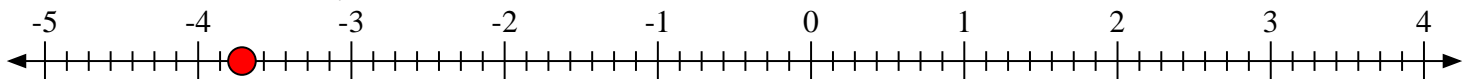
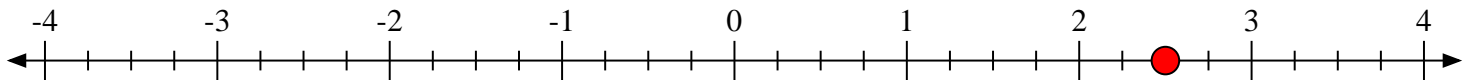
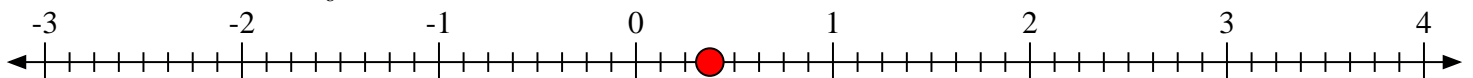
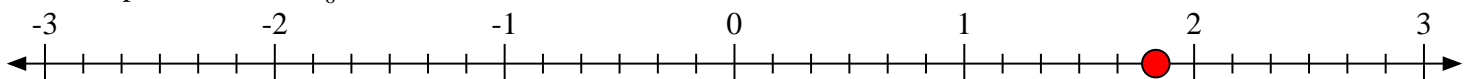


9) Indica la posizione di  $0\frac{6}{8}$





Scrivi la posizione di ogni frazione.

1) Indica la posizione di  $-3\frac{2}{5}$ 2) Indica la posizione di  $-1\frac{2}{3}$ 3) Indica la posizione di  $1\frac{1}{2}$ 4) Indica la posizione di  $2\frac{1}{4}$ 5) Indica la posizione di  $-3\frac{5}{7}$ 6) Indica la posizione di  $2\frac{2}{4}$ 7) Indica la posizione di  $0\frac{3}{8}$ 8) Indica la posizione di  $1\frac{5}{6}$ 9) Indica la posizione di  $0\frac{6}{8}$ 