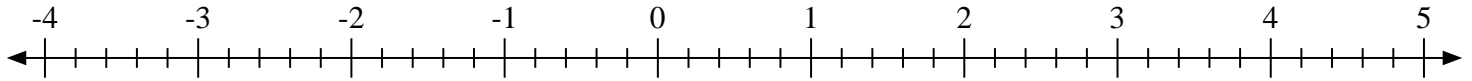


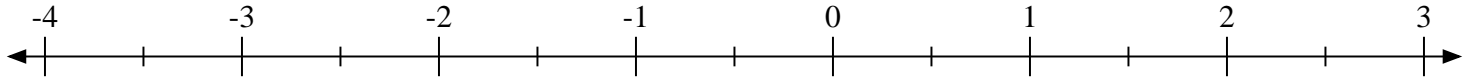


Scrivi la posizione di ogni frazione.

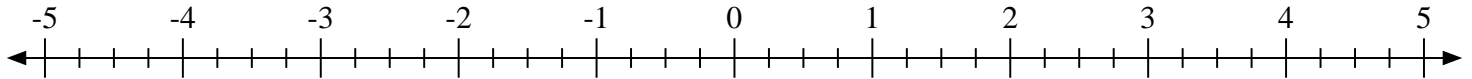
1) Indica la posizione di $-3\frac{2}{5}$



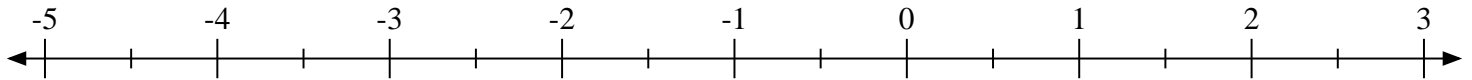
2) Indica la posizione di $1\frac{1}{2}$



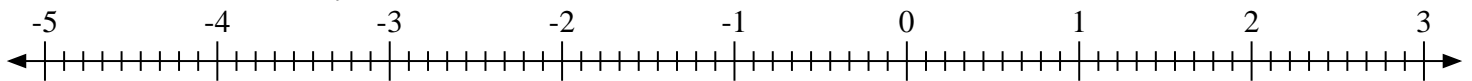
3) Indica la posizione di $-2\frac{3}{4}$



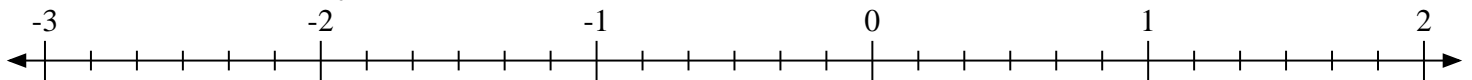
4) Indica la posizione di $2\frac{1}{2}$



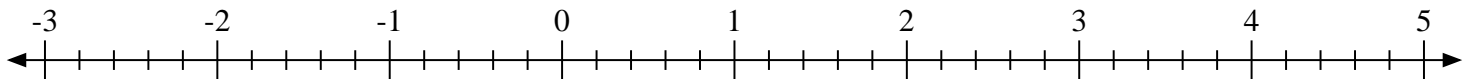
5) Indica la posizione di $-1\frac{4}{9}$



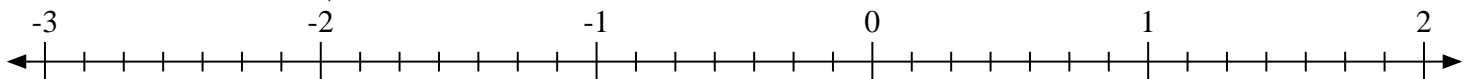
6) Indica la posizione di $-1\frac{2}{6}$



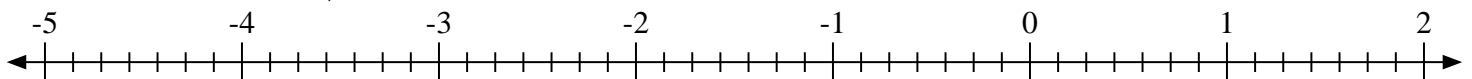
7) Indica la posizione di $-1\frac{1}{5}$



8) Indica la posizione di $0\frac{2}{7}$

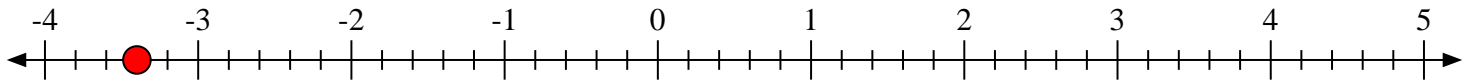
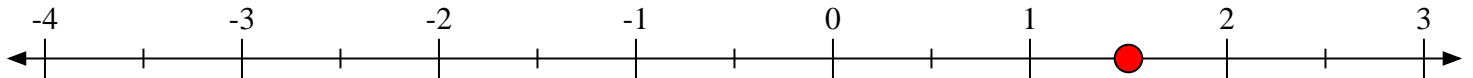
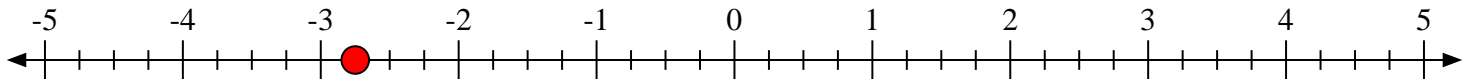
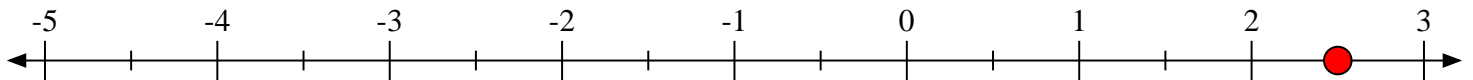
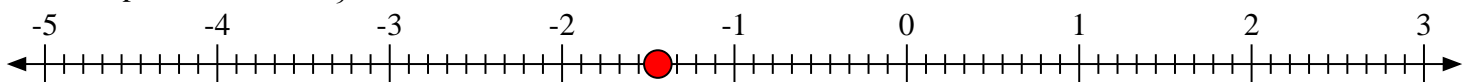
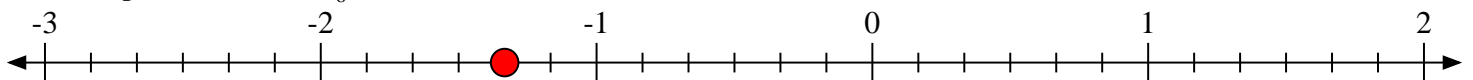
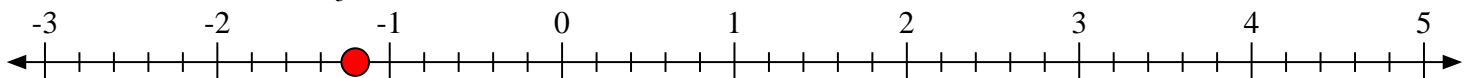
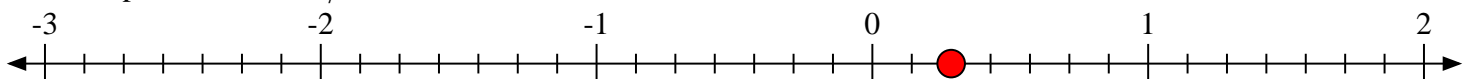


9) Indica la posizione di $1\frac{6}{7}$





Scrivi la posizione di ogni frazione.

1) Indica la posizione di $-3\frac{2}{5}$ 2) Indica la posizione di $1\frac{1}{2}$ 3) Indica la posizione di $-2\frac{3}{4}$ 4) Indica la posizione di $2\frac{1}{2}$ 5) Indica la posizione di $-1\frac{4}{9}$ 6) Indica la posizione di $-1\frac{2}{6}$ 7) Indica la posizione di $-1\frac{1}{5}$ 8) Indica la posizione di $0\frac{2}{7}$ 9) Indica la posizione di $1\frac{6}{7}$ 