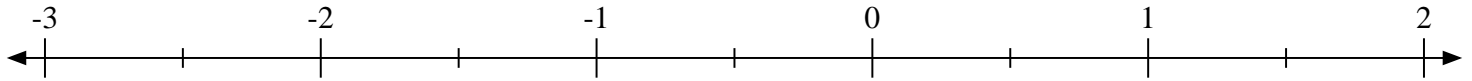


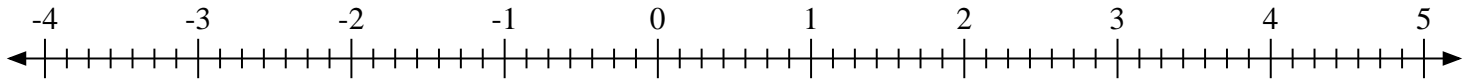


Scrivi la posizione di ogni frazione.

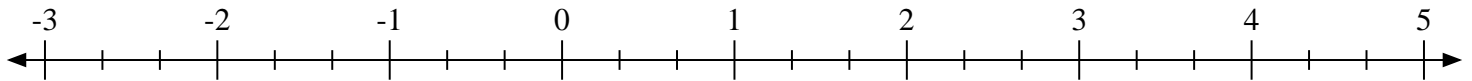
1) Indica la posizione di  $-2\frac{1}{2}$



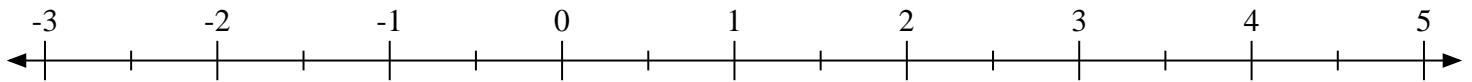
2) Indica la posizione di  $3\frac{5}{7}$



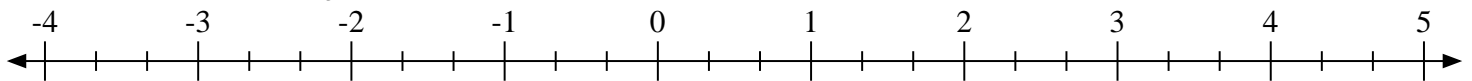
3) Indica la posizione di  $-2\frac{1}{3}$



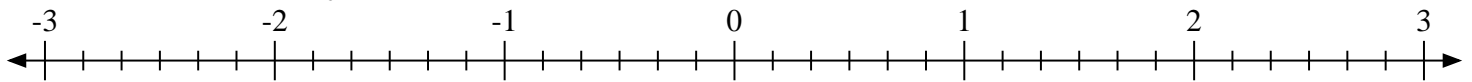
4) Indica la posizione di  $-1\frac{1}{2}$



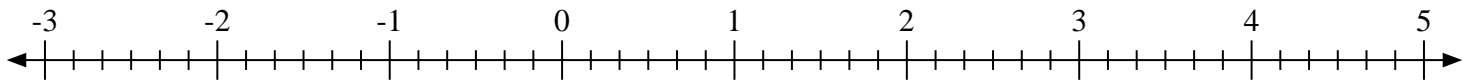
5) Indica la posizione di  $3\frac{2}{3}$



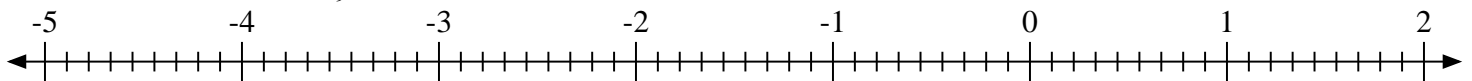
6) Indica la posizione di  $0\frac{3}{6}$



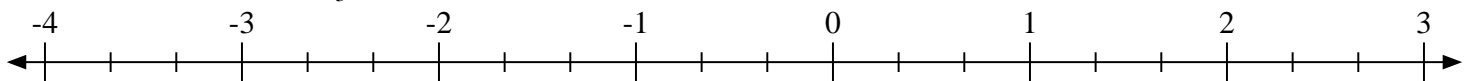
7) Indica la posizione di  $-1\frac{3}{6}$



8) Indica la posizione di  $-2\frac{2}{9}$

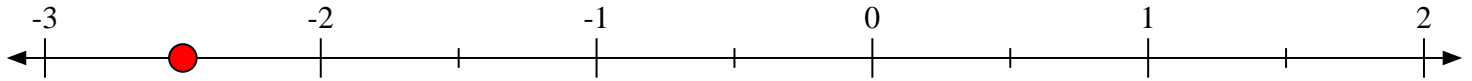
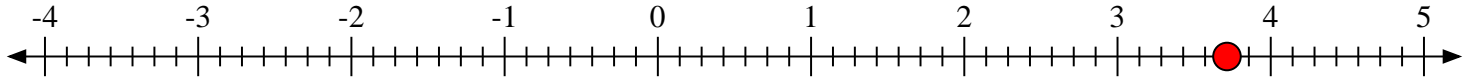
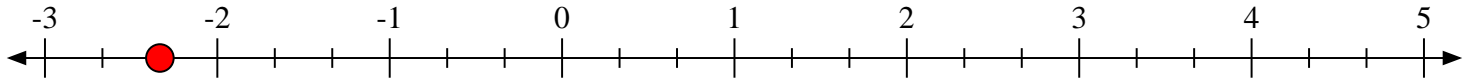
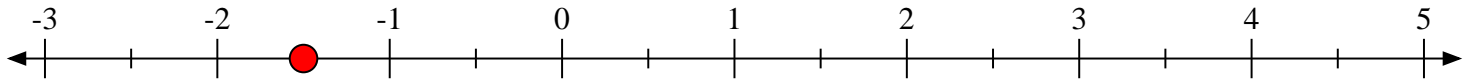
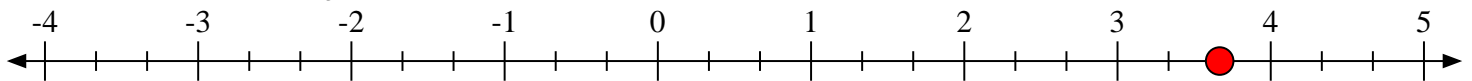
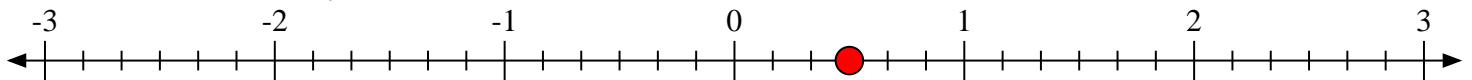
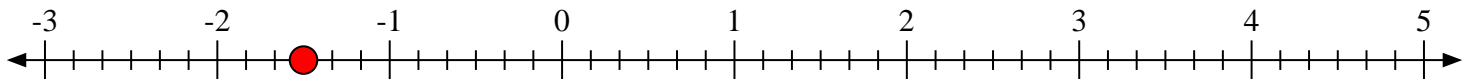
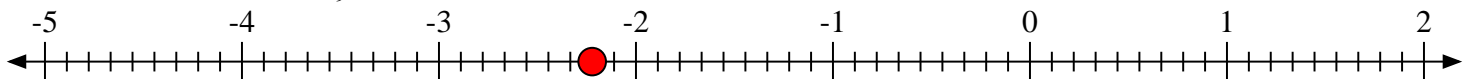


9) Indica la posizione di  $-2\frac{2}{3}$





Scrivi la posizione di ogni frazione.

1) Indica la posizione di  $-2\frac{1}{2}$ 2) Indica la posizione di  $3\frac{5}{7}$ 3) Indica la posizione di  $-2\frac{1}{3}$ 4) Indica la posizione di  $-1\frac{1}{2}$ 5) Indica la posizione di  $3\frac{2}{3}$ 6) Indica la posizione di  $0\frac{3}{6}$ 7) Indica la posizione di  $-1\frac{3}{6}$ 8) Indica la posizione di  $-2\frac{2}{9}$ 9) Indica la posizione di  $-2\frac{2}{3}$ 