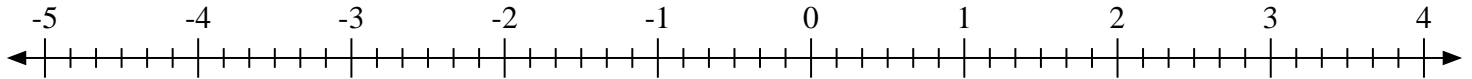


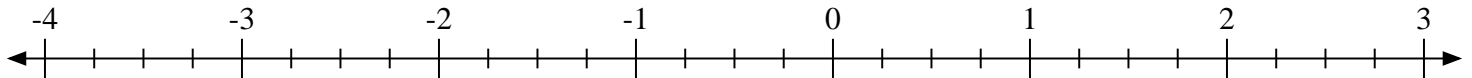


Scrivi la posizione di ogni frazione.

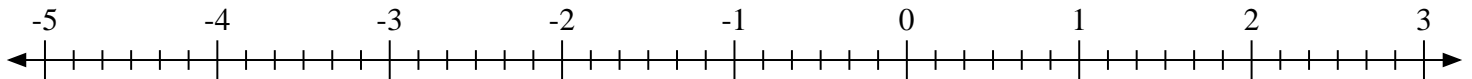
1) Indica la posizione di $-2\frac{5}{6}$



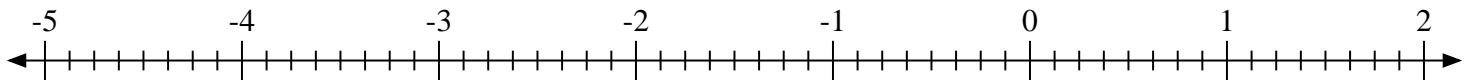
2) Indica la posizione di $0\frac{2}{4}$



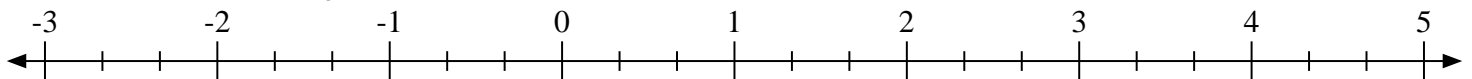
3) Indica la posizione di $0\frac{2}{6}$




4) Indica la posizione di $-1\frac{4}{8}$



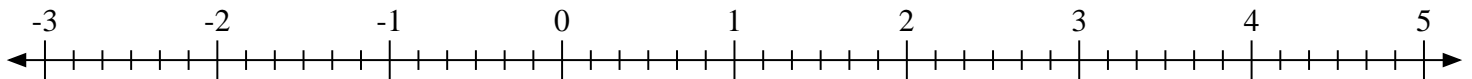
5) Indica la posizione di $3\frac{1}{3}$



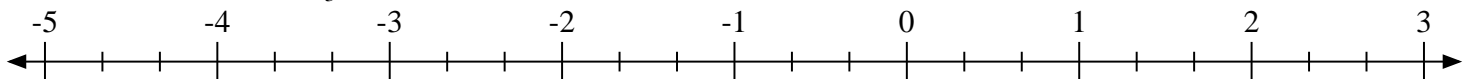
6) Indica la posizione di $-2\frac{2}{3}$



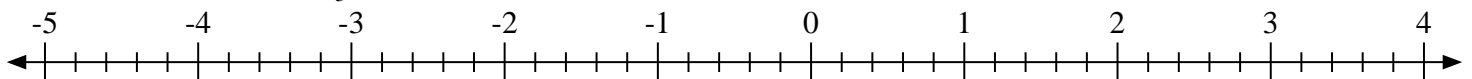
7) Indica la posizione di $1\frac{5}{6}$



8) Indica la posizione di $1\frac{1}{3}$

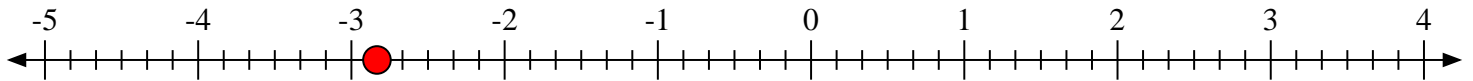
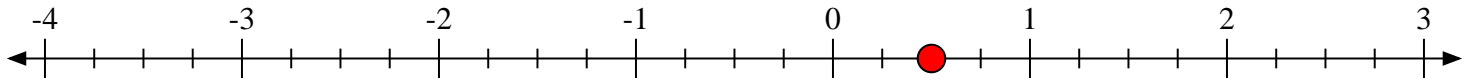
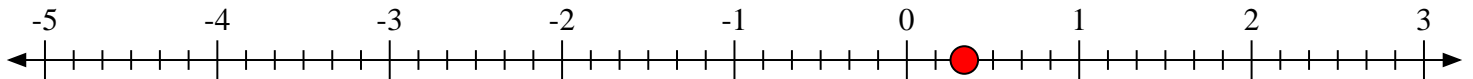
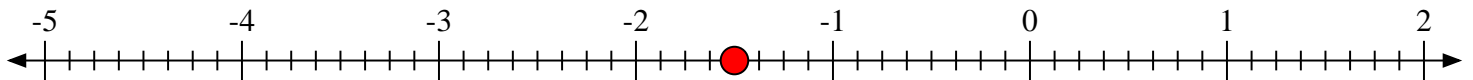
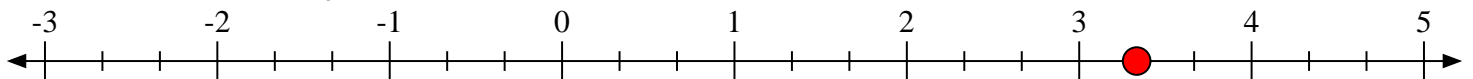

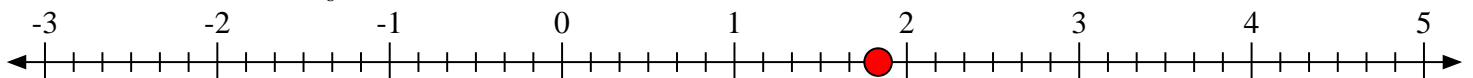
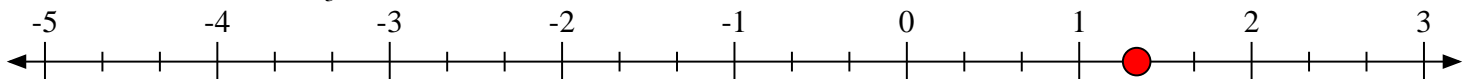


9) Indica la posizione di $-1\frac{3}{5}$





Scrivi la posizione di ogni frazione.

1) Indica la posizione di $-2\frac{5}{6}$ 2) Indica la posizione di $0\frac{2}{4}$ 3) Indica la posizione di $0\frac{2}{6}$ 4) Indica la posizione di $-1\frac{4}{8}$ 5) Indica la posizione di $3\frac{1}{3}$ 6) Indica la posizione di $-2\frac{2}{3}$ 7) Indica la posizione di $1\frac{5}{6}$ 8) Indica la posizione di $1\frac{1}{3}$ 9) Indica la posizione di $-1\frac{3}{5}$ 